




Benutze die vorgegebene Anordnung um jede Aufgabe zu lösen.

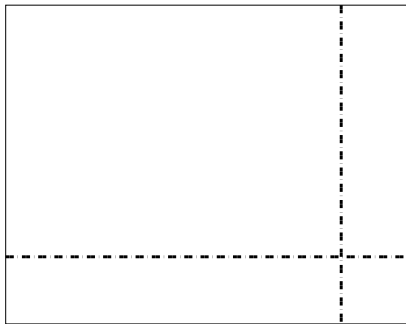
1) $42 \cdot 68 =$




2) $45 \cdot 32 =$



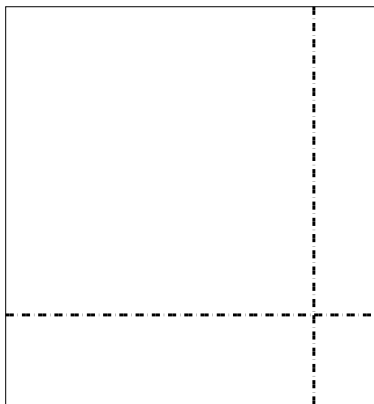
3) $38 \cdot 48 =$




4) $36 \cdot 13 =$



5) $39 \cdot 36 =$



6) $35 \cdot 23 =$



Antworten

1. _____

2. _____

3. _____

4. _____

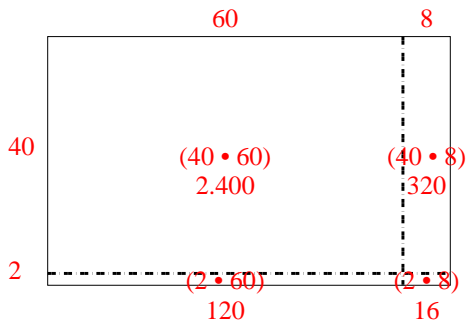
5. _____

6. _____

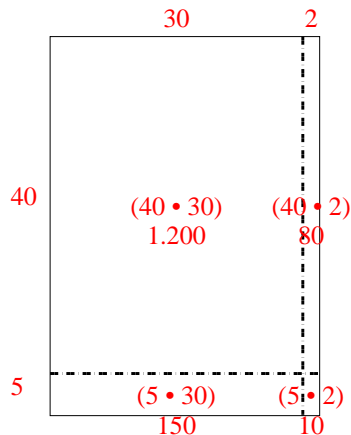


Benutze die vorgegebene Anordnung um jede Aufgabe zu lösen.

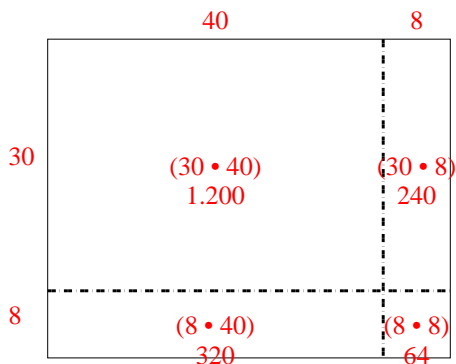
1) $42 \cdot 68 =$



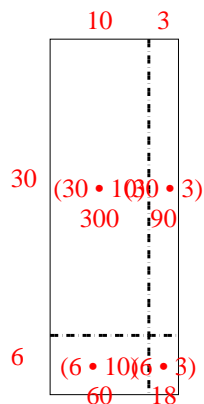
2) $45 \cdot 32 =$



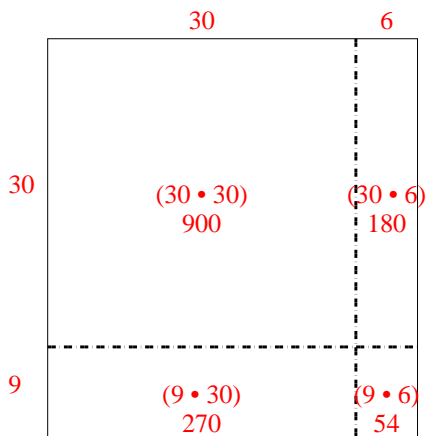
3) $38 \cdot 48 =$



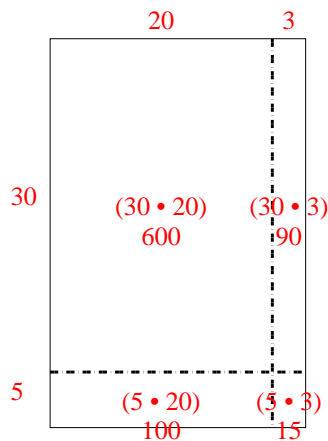
4) $36 \cdot 13 =$



5) $39 \cdot 36 =$



6) $35 \cdot 23 =$



Antworten

1. 2.856
2. 1.440
3. 1.824
4. 468
5. 1.404
6. 805