





Benutze die vorgegebene Anordnung um jede Aufgabe zu lösen.

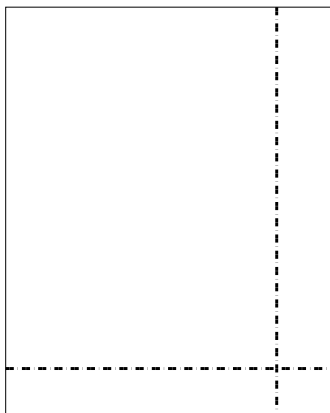
1) $66 \cdot 72 =$




2) $57 \cdot 47 =$




3) $45 \cdot 36 =$




4) $35 \cdot 23 =$



5) $33 \cdot 17 =$



6) $38 \cdot 48 =$



Antworten

1. _____

2. _____

3. _____

4. _____

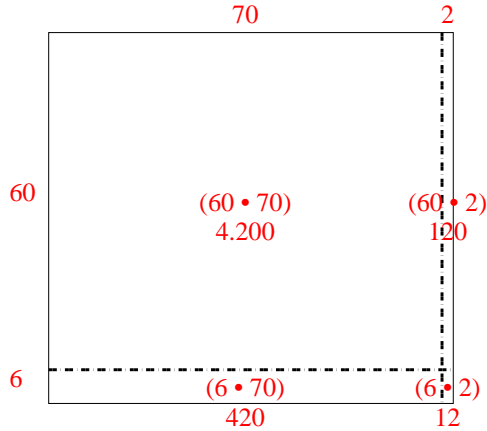
5. _____

6. _____

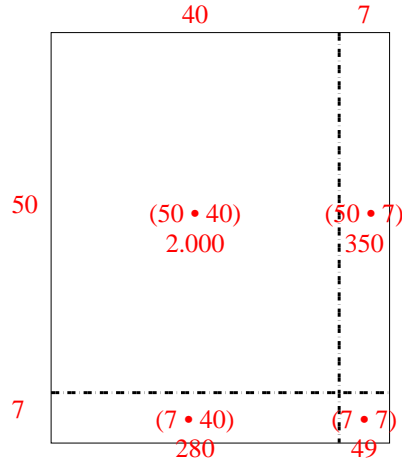


Benutze die vorgegebene Anordnung um jede Aufgabe zu lösen.

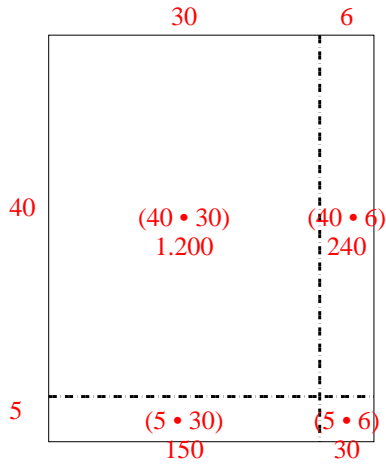
1) $66 \cdot 72 =$



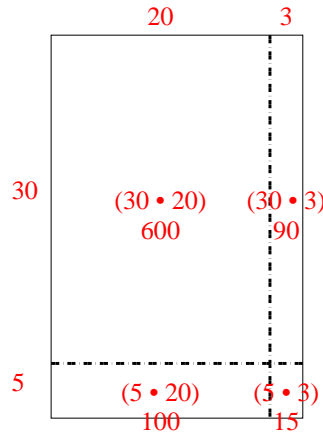
2) $57 \cdot 47 =$



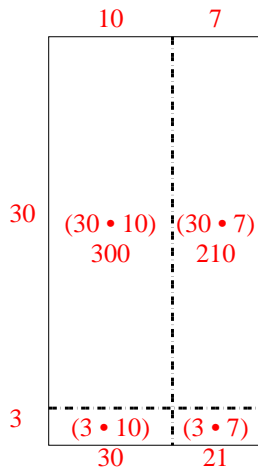
3) $45 \cdot 36 =$



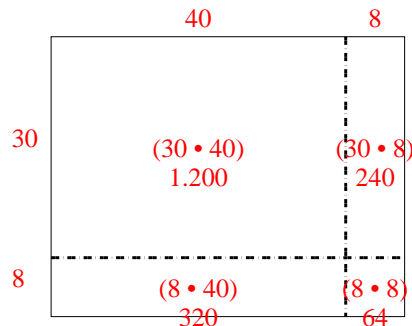
4) $35 \cdot 23 =$



5) $33 \cdot 17 =$



6) $38 \cdot 48 =$

Antworten1. 4.7522. 2.6793. 1.6204. 8055. 5616. 1.824