





Benutze die vorgegebene Anordnung um jede Aufgabe zu lösen.


1) $64 \cdot 62 =$




2) $43 \cdot 27 =$




3) $45 \cdot 54 =$




4) $35 \cdot 27 =$



5) $33 \cdot 36 =$



6) $32 \cdot 48 =$



Antworten

1. _____

2. _____

3. _____

4. _____

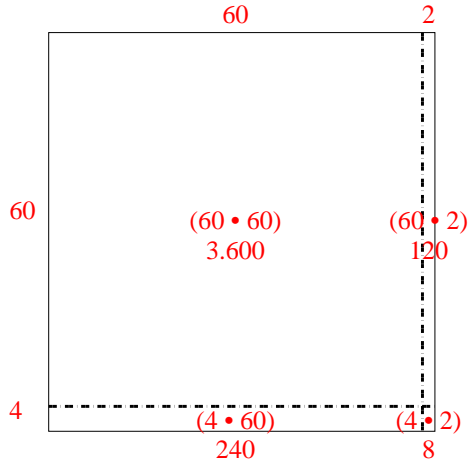
5. _____

6. _____

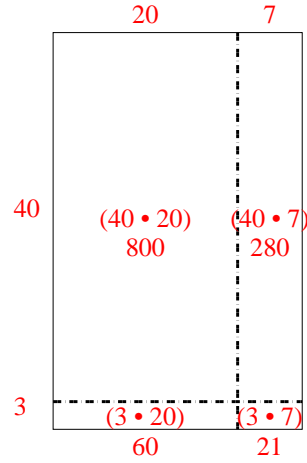


Benutze die vorgegebene Anordnung um jede Aufgabe zu lösen.

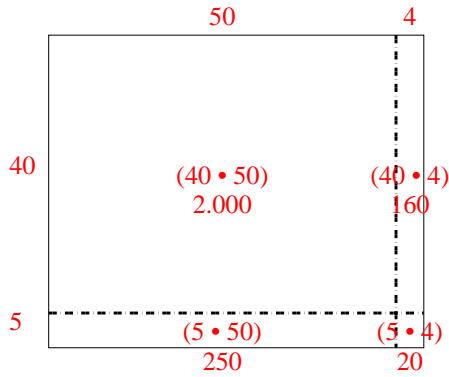
1) $64 \cdot 62 =$



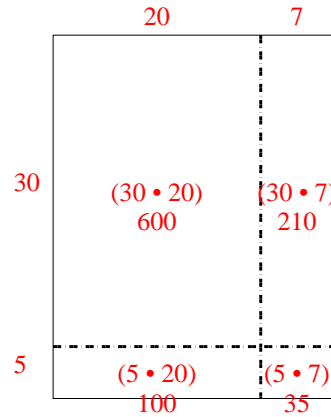
2) $43 \cdot 27 =$



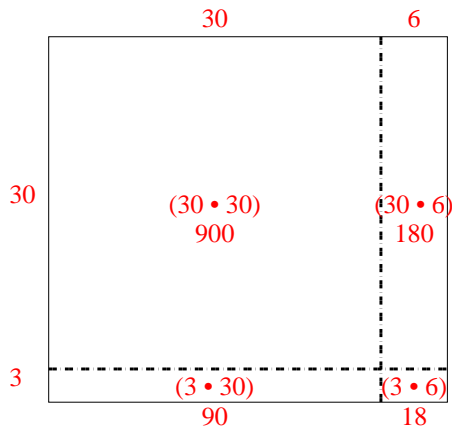
3) $45 \cdot 54 =$



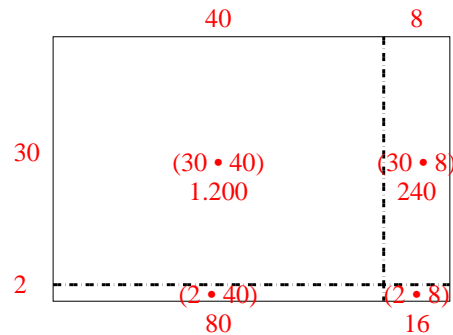
4) $35 \cdot 27 =$



5) $33 \cdot 36 =$



6) $32 \cdot 48 =$

Antworten1. 3.9682. 1.1613. 2.4304. 9455. 1.1886. 1.536