





Benutze die vorgegebene Anordnung um jede Aufgabe zu lösen.


1) $45 \cdot 68 =$




2) $56 \cdot 57 =$



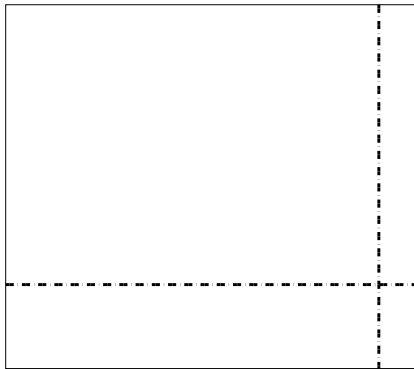
3) $44 \cdot 58 =$




4) $47 \cdot 26 =$



5) $39 \cdot 44 =$



6) $45 \cdot 34 =$



Antworten

1. _____

2. _____

3. _____

4. _____

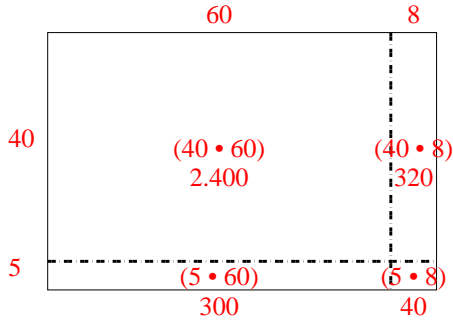
5. _____

6. _____

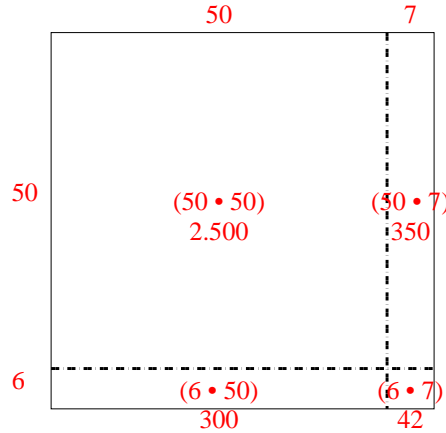


Benutze die vorgegebene Anordnung um jede Aufgabe zu lösen.

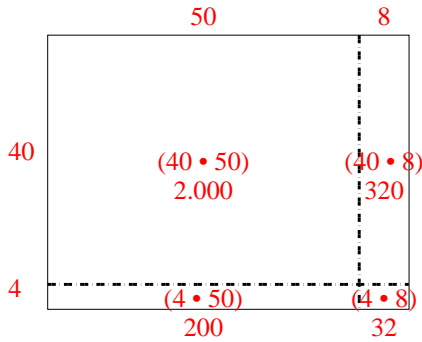
1) $45 \cdot 68 =$



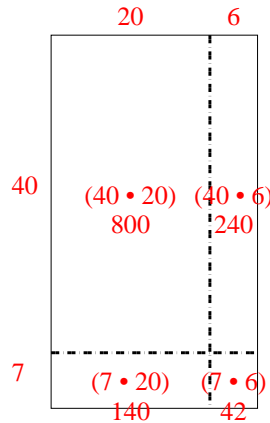
2) $56 \cdot 57 =$



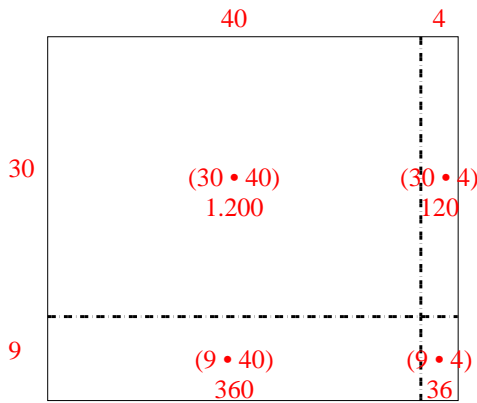
3) $44 \cdot 58 =$



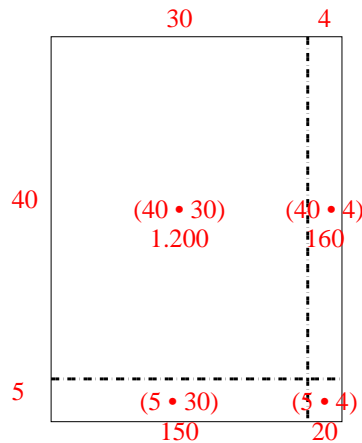
4) $47 \cdot 26 =$



5) $39 \cdot 44 =$



6) $45 \cdot 34 =$



Antworten

1. 3.060

2. 3.192

3. 2.552

4. 1.222

5. 1.716

6. 1.530