





Benutze die vorgegebene Anordnung um jede Aufgabe zu lösen.


1) $21 \cdot 20 =$




2) $20 \cdot 23 =$




3) $20 \cdot 29 =$




4) $28 \cdot 20 =$



5) $26 \cdot 20 =$



6) $29 \cdot 20 =$



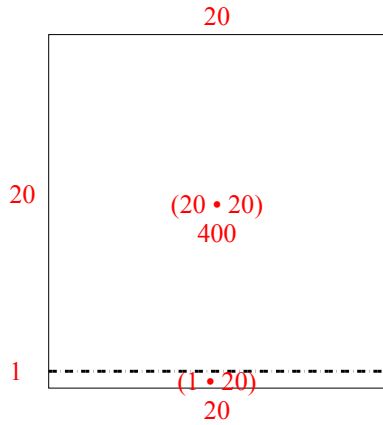
Antworten

- 1. _____
- 2. _____
- 3. _____
- 4. _____
- 5. _____
- 6. _____

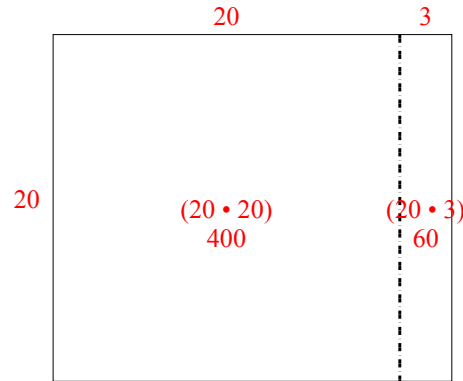


Benutze die vorgegebene Anordnung um jede Aufgabe zu lösen.

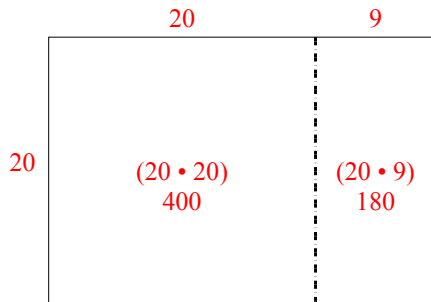
1) $21 \cdot 20 =$



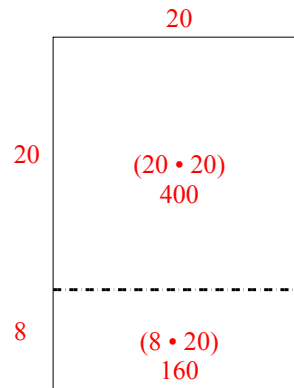
2) $20 \cdot 23 =$



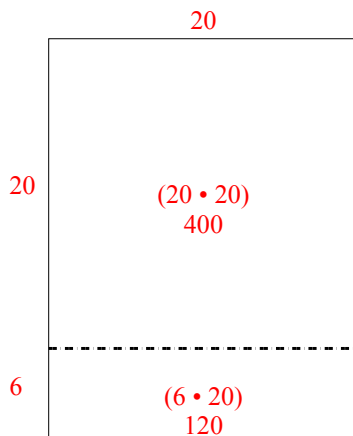
3) $20 \cdot 29 =$



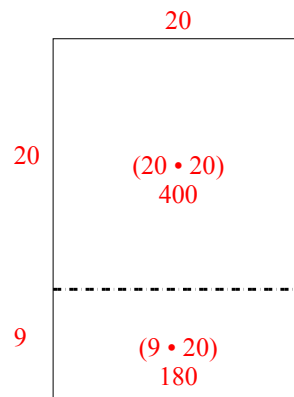
4) $28 \cdot 20 =$



5) $26 \cdot 20 =$



6) $29 \cdot 20 =$

**Antworten**

1. 420
2. 460
3. 580
4. 560
5. 520
6. 580