




Benutze die vorgegebene Anordnung um jede Aufgabe zu lösen.


1) $30 \cdot 32 =$




2) $20 \cdot 21 =$




3) $24 \cdot 20 =$




4) $20 \cdot 28 =$



5) $20 \cdot 24 =$



6) $26 \cdot 20 =$



Antworten

1. _____

2. _____

3. _____

4. _____

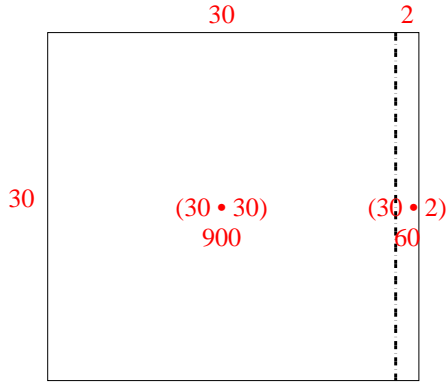
5. _____

6. _____

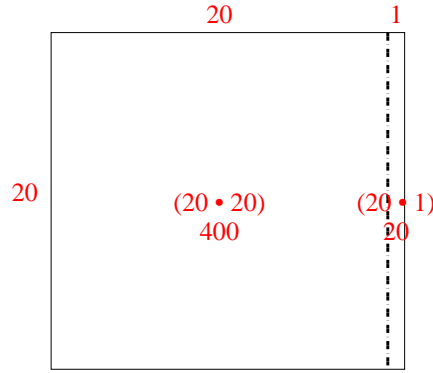


Benutze die vorgegebene Anordnung um jede Aufgabe zu lösen.

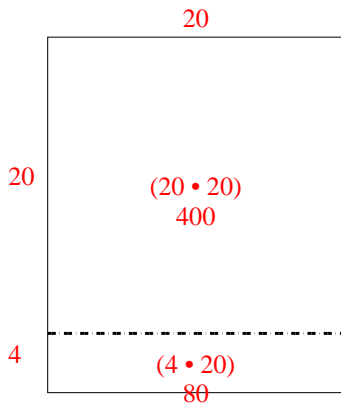
1) $30 \cdot 32 =$



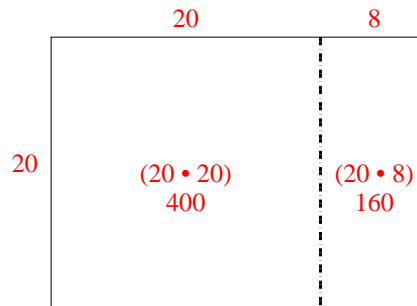
2) $20 \cdot 21 =$



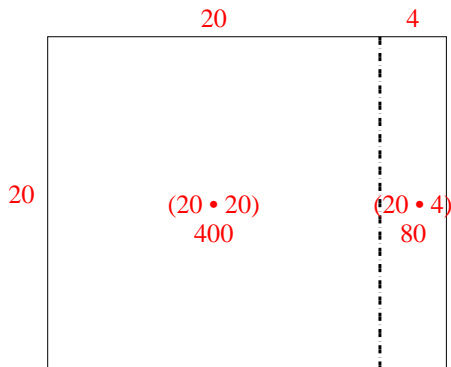
3) $24 \cdot 20 =$



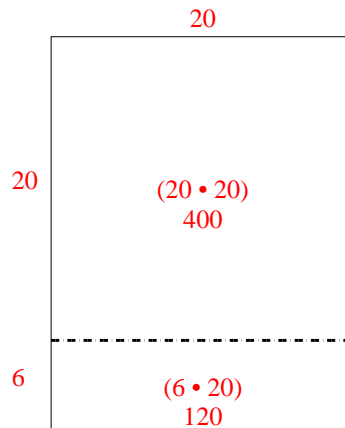
4) $20 \cdot 28 =$



5) $20 \cdot 24 =$



6) $26 \cdot 20 =$



Antworten

1. 960

2. 420

3. 480

4. 560

5. 480

6. 520