



Benutze die vorgegebene Anordnung um jede Aufgabe zu lösen.

1) $20 \cdot 36 =$

2) $25 \cdot 30 =$

3) $20 \cdot 29 =$

4) $23 \cdot 20 =$

5) $26 \cdot 20 =$

6) $24 \cdot 20 =$

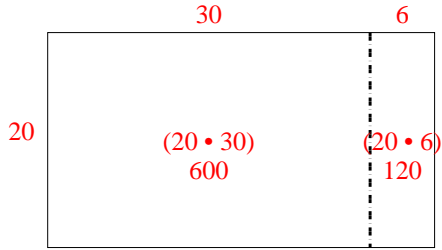
Antworten

- 1. _____
- 2. _____
- 3. _____
- 4. _____
- 5. _____
- 6. _____

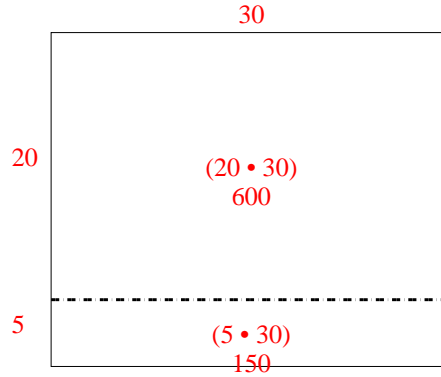


Benutze die vorgegebene Anordnung um jede Aufgabe zu lösen.

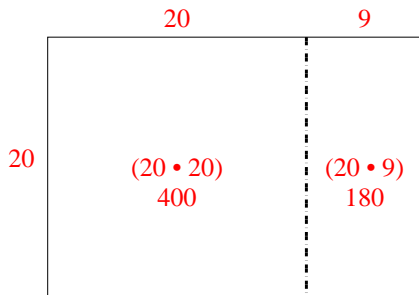
1) $20 \cdot 36 =$



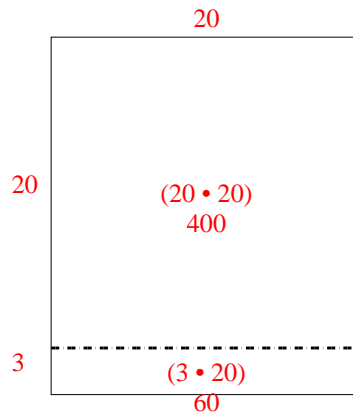
2) $25 \cdot 30 =$



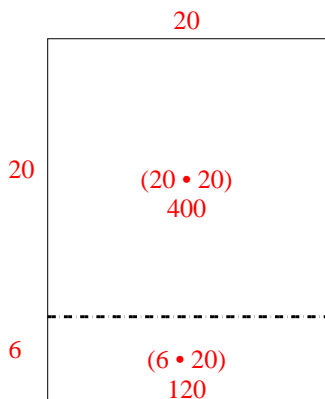
3) $20 \cdot 29 =$



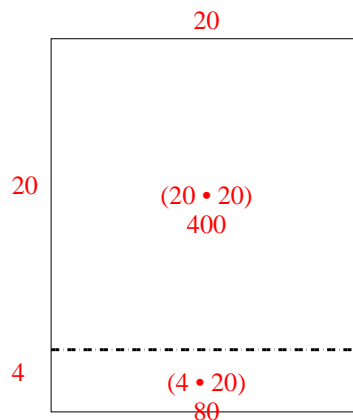
4) $23 \cdot 20 =$



5) $26 \cdot 20 =$



6) $24 \cdot 20 =$



Antworten

1. 720
2. 750
3. 580
4. 460
5. 520
6. 480