





Benutze die vorgegebene Anordnung um jede Aufgabe zu lösen.


1)  $20 \cdot 24 =$




2)  $20 \cdot 27 =$




3)  $20 \cdot 22 =$




4)  $20 \cdot 29 =$



5)  $25 \cdot 20 =$



6)  $24 \cdot 20 =$



Antworten

1. \_\_\_\_\_

2. \_\_\_\_\_

3. \_\_\_\_\_

4. \_\_\_\_\_

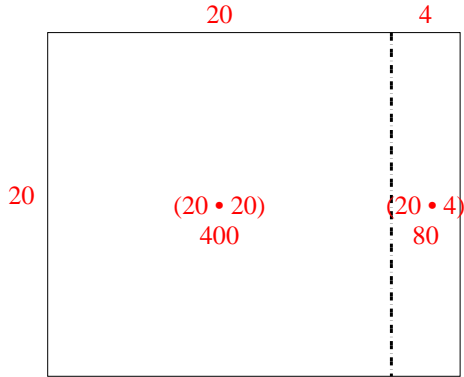
5. \_\_\_\_\_

6. \_\_\_\_\_

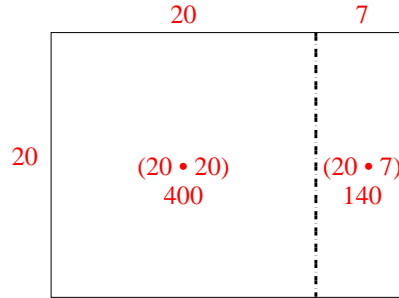


Benutze die vorgegebene Anordnung um jede Aufgabe zu lösen.

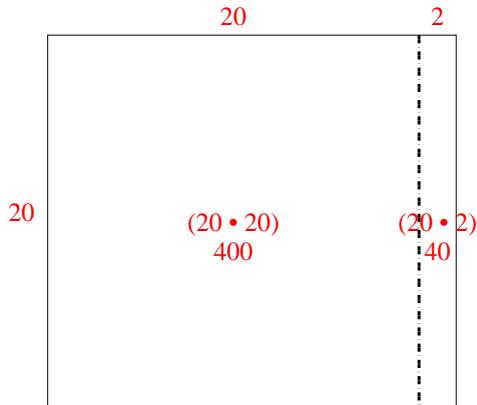
1)  $20 \cdot 24 =$



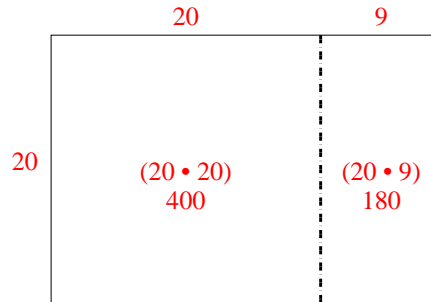
2)  $20 \cdot 27 =$



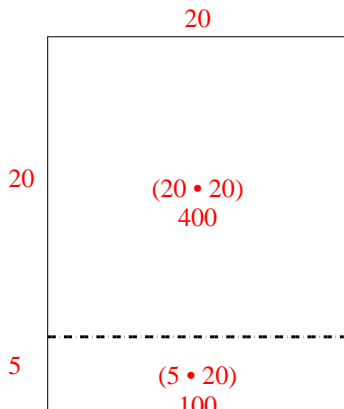
3)  $20 \cdot 22 =$



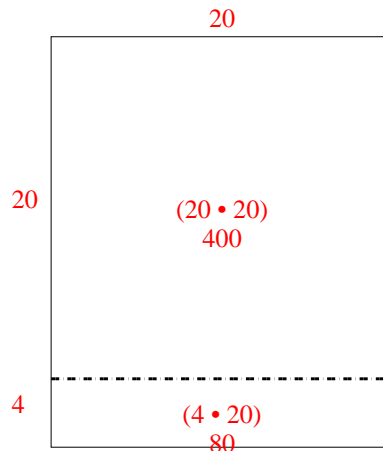
4)  $20 \cdot 29 =$



5)  $25 \cdot 20 =$



6)  $24 \cdot 20 =$



Antworten

1. 480
2. 540
3. 440
4. 580
5. 500
6. 480