




Benutze die vorgegebene Anordnung um jede Aufgabe zu lösen.


1) $20 \cdot 35 =$




2) $20 \cdot 31 =$




3) $20 \cdot 25 =$




4) $22 \cdot 20 =$



5) $20 \cdot 22 =$



6) $20 \cdot 28 =$



Antworten

1. _____

2. _____

3. _____

4. _____

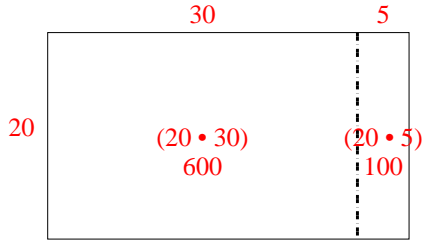
5. _____

6. _____

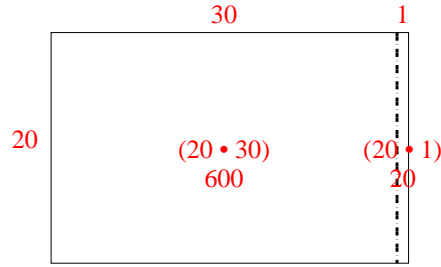


Benutze die vorgegebene Anordnung um jede Aufgabe zu lösen.

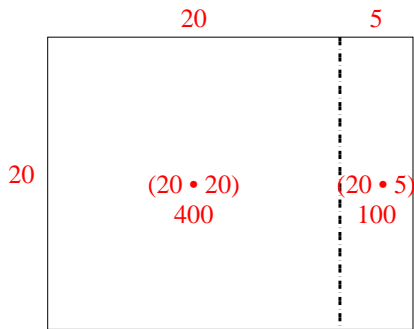
1) $20 \cdot 35 =$



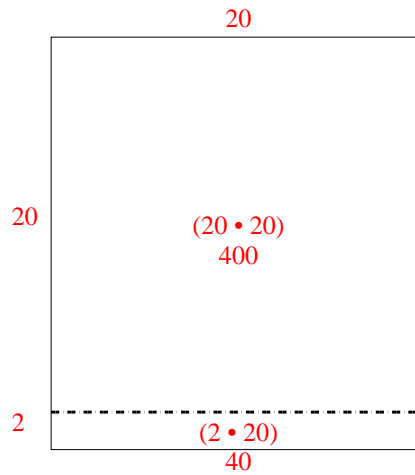
2) $20 \cdot 31 =$



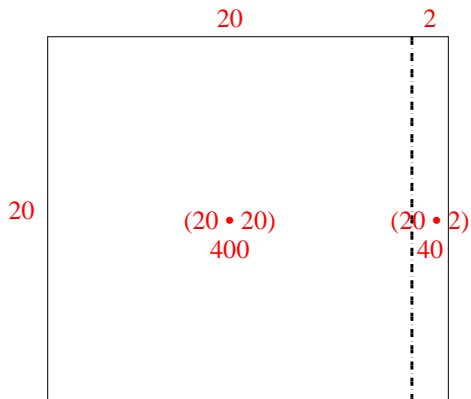
3) $20 \cdot 25 =$



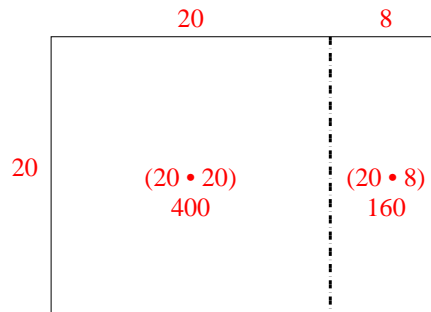
4) $22 \cdot 20 =$



5) $20 \cdot 22 =$



6) $20 \cdot 28 =$



Antworten

1. 700

2. 620

3. 500

4. 440

5. 440

6. 560