




Benutze die vorgegebene Anordnung um jede Aufgabe zu lösen.


1) $31 \cdot 20 =$




2) $20 \cdot 29 =$




3) $26 \cdot 20 =$




4) $20 \cdot 28 =$



5) $20 \cdot 22 =$



6) $20 \cdot 25 =$



Antworten

1. _____

2. _____

3. _____

4. _____

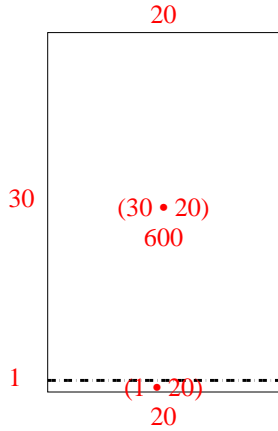
5. _____

6. _____

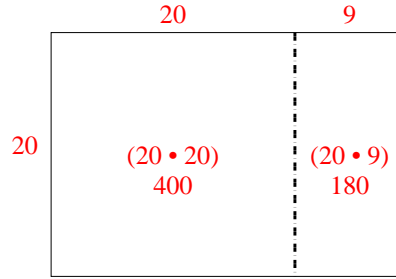


Benutze die vorgegebene Anordnung um jede Aufgabe zu lösen.

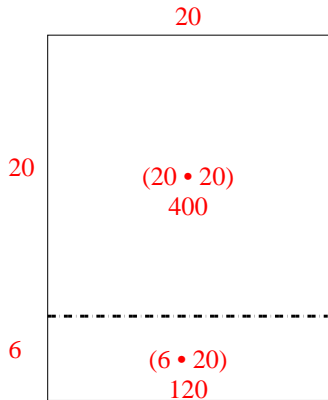
1) $31 \cdot 20 =$



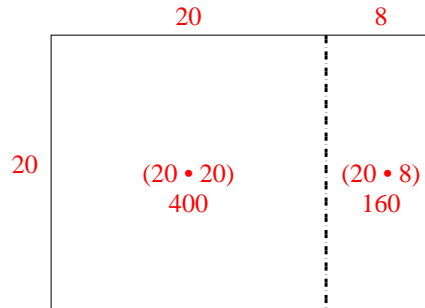
2) $20 \cdot 29 =$



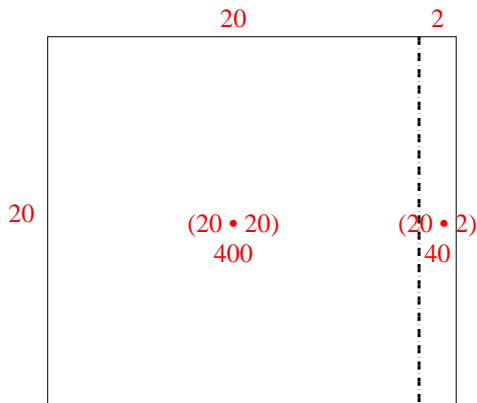
3) $26 \cdot 20 =$



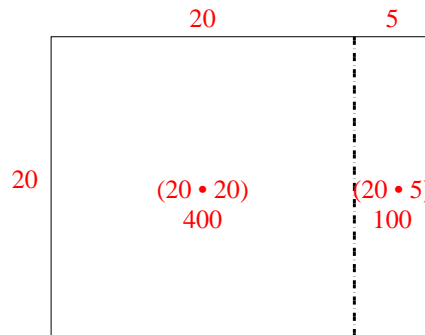
4) $20 \cdot 28 =$



5) $20 \cdot 22 =$



6) $20 \cdot 25 =$



Antworten

1. 620
2. 580
3. 520
4. 560
5. 440
6. 500