



Benutze die vorgegebene Anordnung um jede Aufgabe zu lösen.

1) $30 \cdot 35 =$

2) $30 \cdot 23 =$

3) $20 \cdot 29 =$

4) $20 \cdot 27 =$

5) $20 \cdot 24 =$

6) $20 \cdot 26 =$

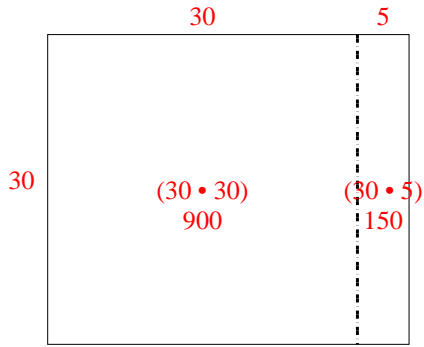
Antworten

- 1. _____
- 2. _____
- 3. _____
- 4. _____
- 5. _____
- 6. _____

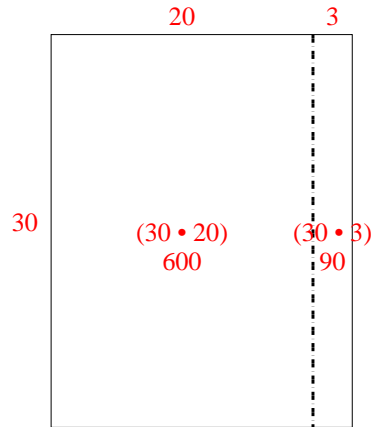


Benutze die vorgegebene Anordnung um jede Aufgabe zu lösen.

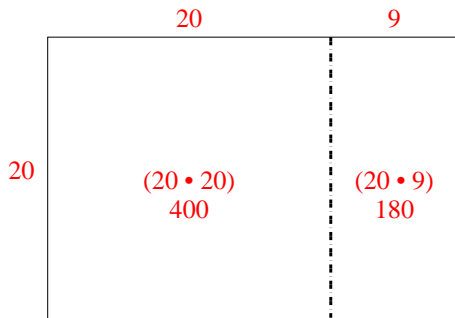
1) $30 \cdot 35 =$



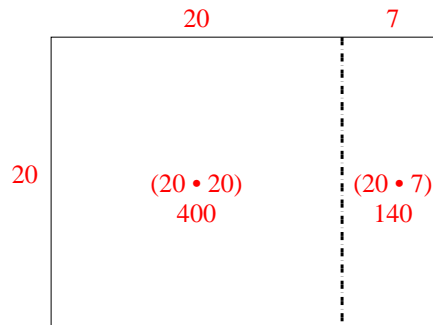
2) $30 \cdot 23 =$



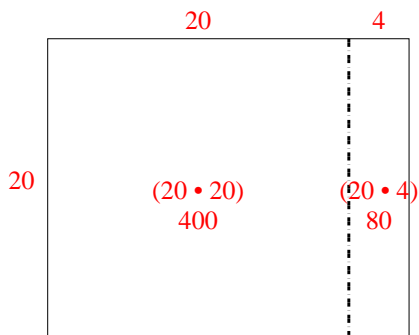
3) $20 \cdot 29 =$



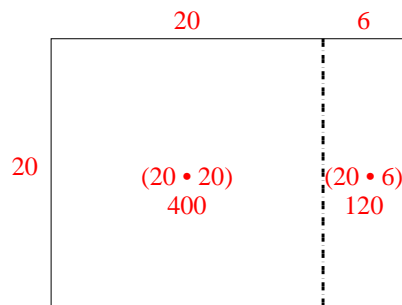
4) $20 \cdot 27 =$



5) $20 \cdot 24 =$



6) $20 \cdot 26 =$



Antworten

1. 1.050
2. 690
3. 580
4. 540
5. 480
6. 520