





Benutze die vorgegebenen Anordnungen um jede Aufgabe zu lösen.


1) $10 \cdot 39 =$




2) $10 \cdot 31 =$




3) $10 \cdot 28 =$




4) $20 \cdot 12 =$



5) $10 \cdot 15 =$



6) $13 \cdot 10 =$



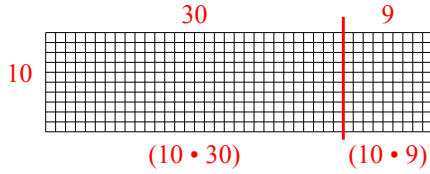
Antworten

- 1. _____
- 2. _____
- 3. _____
- 4. _____
- 5. _____
- 6. _____

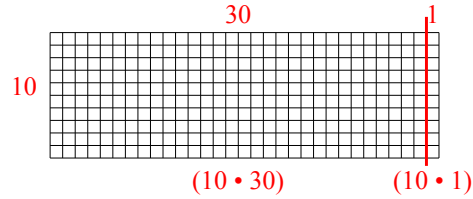


Benutze die vorgegebenen Anordnungen um jede Aufgabe zu lösen.

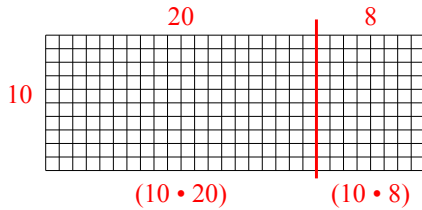
1) $10 \cdot 39 =$



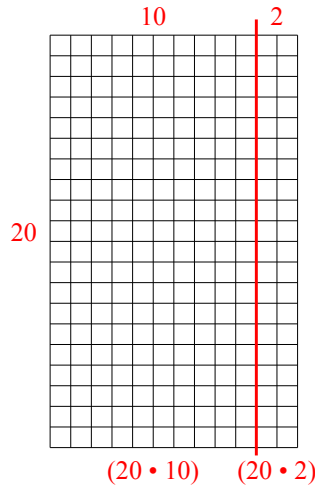
2) $10 \cdot 31 =$



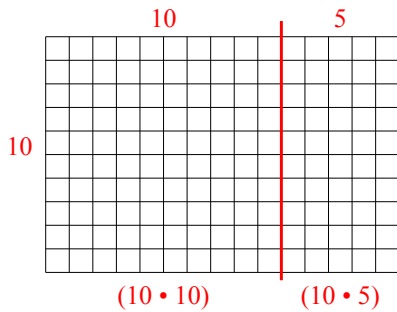
3) $10 \cdot 28 =$



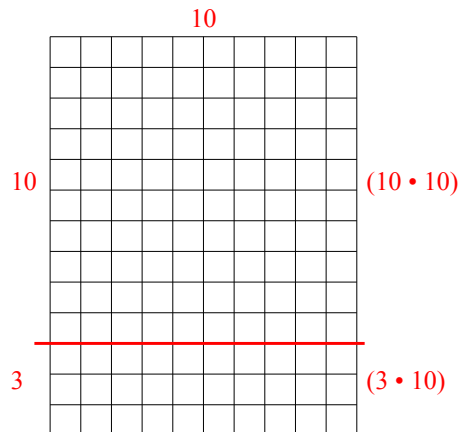
4) $20 \cdot 12 =$



5) $10 \cdot 15 =$



6) $13 \cdot 10 =$



Antworten

1. 390

2. 310

3. 280

4. 240

5. 150

6. 130