


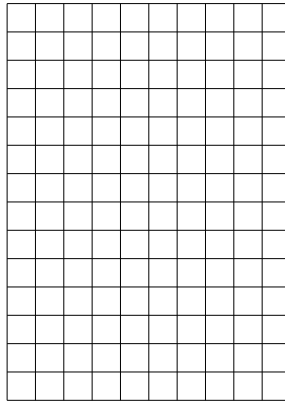


Benutze die vorgegebenen Anordnungen um jede Aufgabe zu lösen.


1)  $23 \cdot 10 =$




2)  $14 \cdot 10 =$




3)  $13 \cdot 10 =$




4)  $17 \cdot 10 =$



5)  $10 \cdot 16 =$



6)  $10 \cdot 13 =$



Antworten

1. \_\_\_\_\_

2. \_\_\_\_\_

3. \_\_\_\_\_

4. \_\_\_\_\_

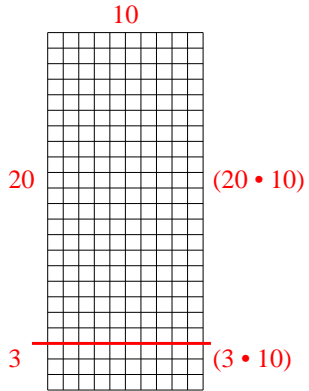
5. \_\_\_\_\_

6. \_\_\_\_\_

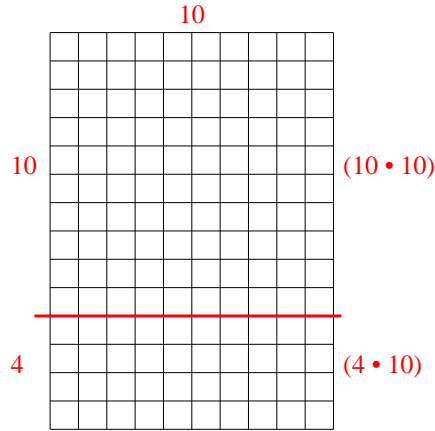


Benutze die vorgegebenen Anordnungen um jede Aufgabe zu lösen.

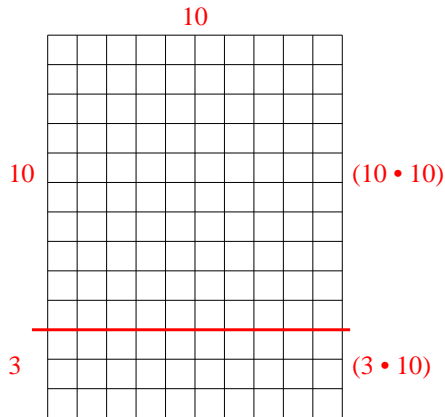
1)  $23 \cdot 10 =$



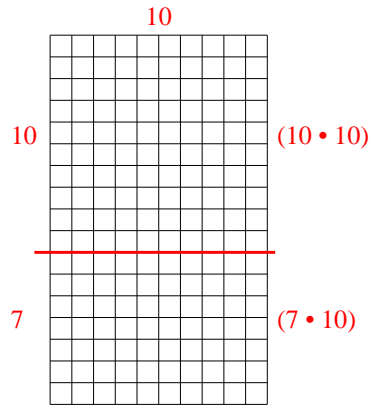
2)  $14 \cdot 10 =$



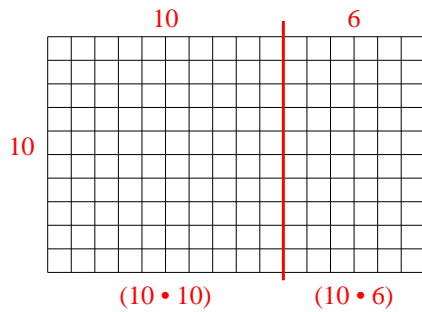
3)  $13 \cdot 10 =$



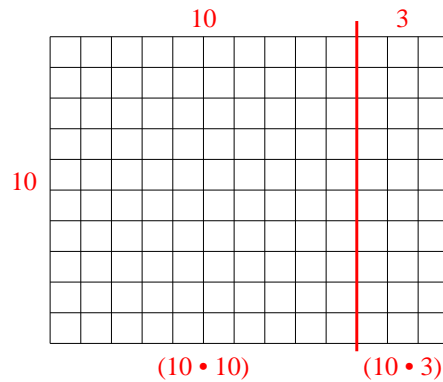
4)  $17 \cdot 10 =$



5)  $10 \cdot 16 =$



6)  $10 \cdot 13 =$



Antworten

1. 230
2. 140
3. 130
4. 170
5. 160
6. 130