





Benutze die vorgegebenen Anordnungen um jede Aufgabe zu lösen.


1) $10 \cdot 11 =$




2) $13 \cdot 10 =$




3) $10 \cdot 15 =$




4) $10 \cdot 13 =$



5) $17 \cdot 10 =$



6) $10 \cdot 19 =$



Antworten

1. _____

2. _____

3. _____

4. _____

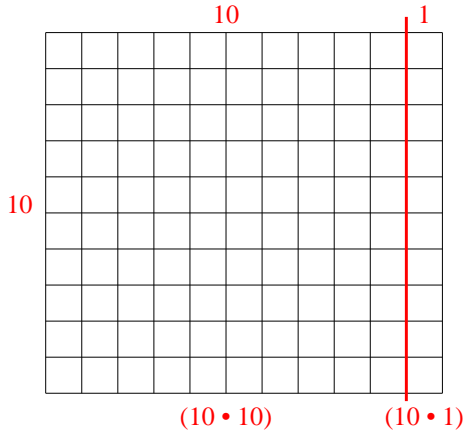
5. _____

6. _____

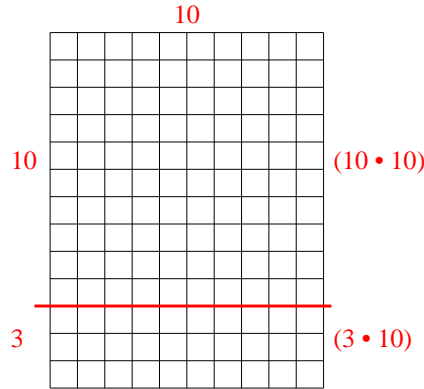


Benutze die vorgegebenen Anordnungen um jede Aufgabe zu lösen.

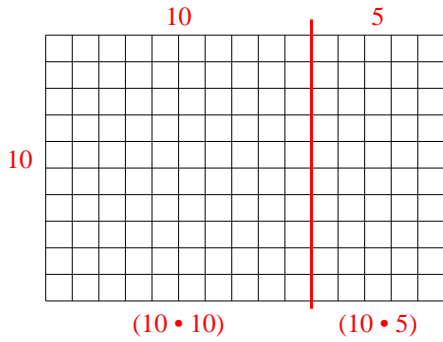
1) $10 \cdot 11 =$



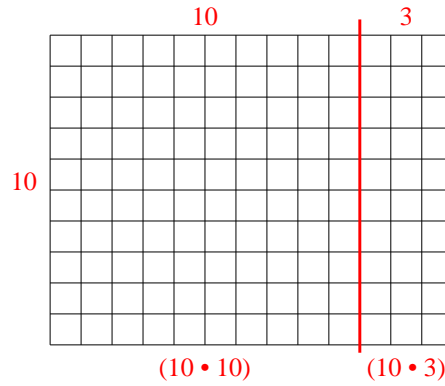
2) $13 \cdot 10 =$



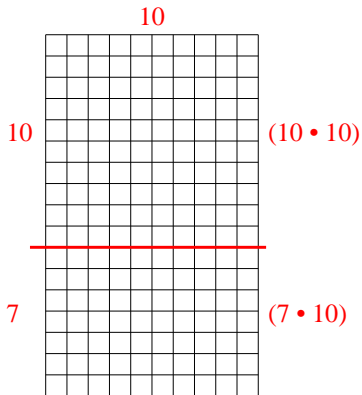
3) $10 \cdot 15 =$



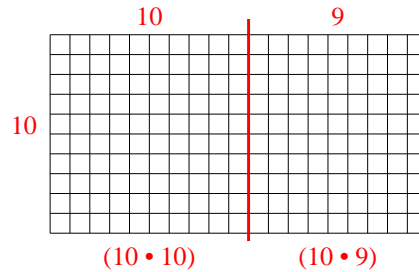
4) $10 \cdot 13 =$



5) $17 \cdot 10 =$



6) $10 \cdot 19 =$



Antworten

1. 110
2. 130
3. 150
4. 130
5. 170
6. 190