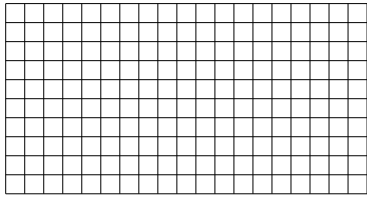


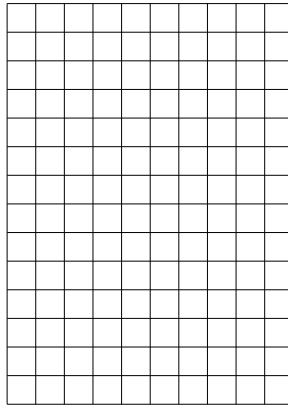


Benutze die vorgegebenen Anordnungen um jede Aufgabe zu lösen.


1) $10 \cdot 19 =$




2) $14 \cdot 10 =$




3) $10 \cdot 11 =$




4) $10 \cdot 17 =$



5) $10 \cdot 15 =$



6) $10 \cdot 12 =$



Antworten

1. _____

2. _____

3. _____

4. _____

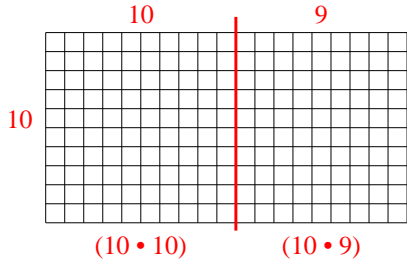
5. _____

6. _____

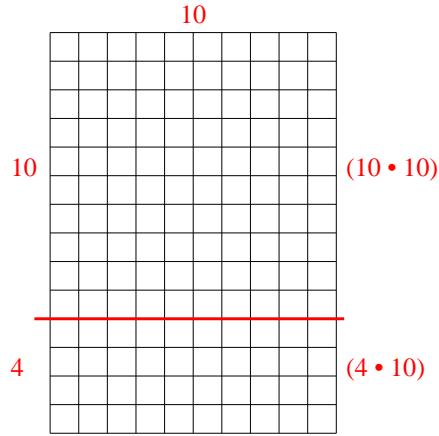


Benutze die vorgegebenen Anordnungen um jede Aufgabe zu lösen.

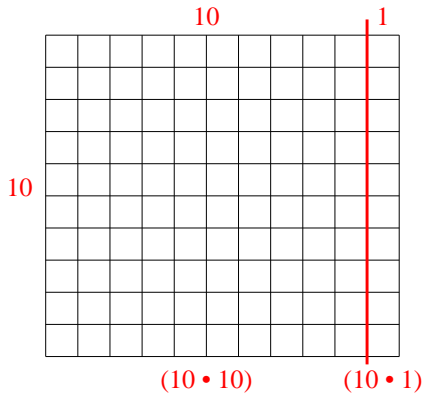
1) $10 \cdot 19 =$



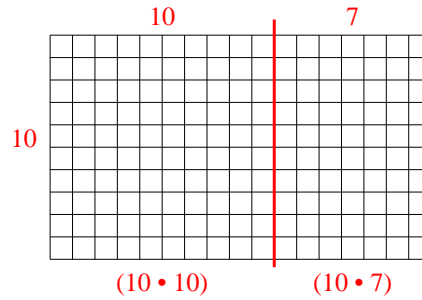
2) $14 \cdot 10 =$



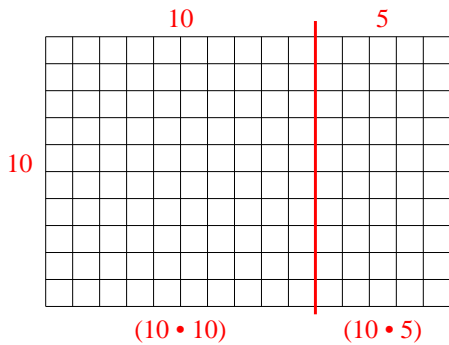
3) $10 \cdot 11 =$



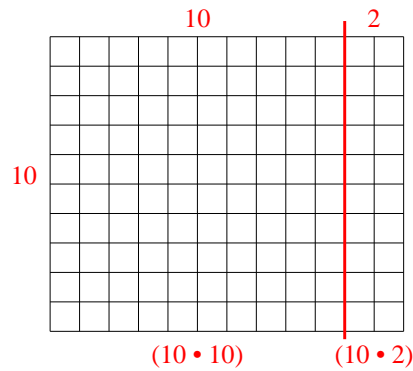
4) $10 \cdot 17 =$



5) $10 \cdot 15 =$



6) $10 \cdot 12 =$



Antworten

1. 190

2. 140

3. 110

4. 170

5. 150

6. 120