





Benutze die vorgegebenen Anordnungen um jede Aufgabe zu lösen.


1) $20 \cdot 23 =$




2) $12 \cdot 10 =$




3) $10 \cdot 15 =$




4) $10 \cdot 19 =$



5) $10 \cdot 13 =$



6) $10 \cdot 12 =$



Antworten

1. _____

2. _____

3. _____

4. _____

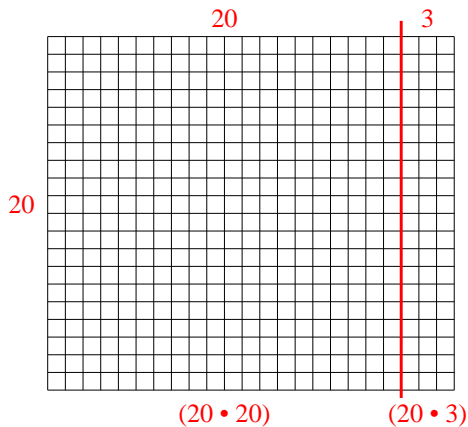
5. _____

6. _____

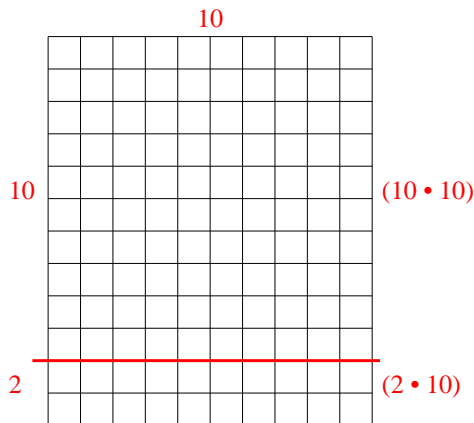


Benutze die vorgegebenen Anordnungen um jede Aufgabe zu lösen.

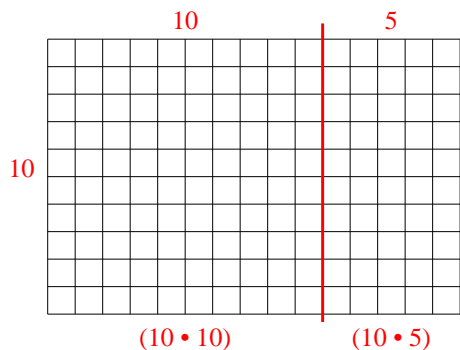
1) $20 \cdot 23 =$



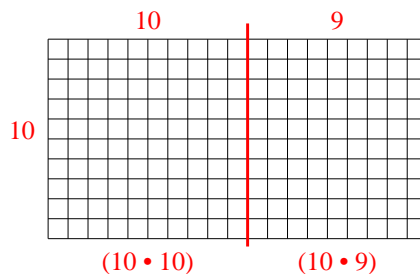
2) $12 \cdot 10 =$



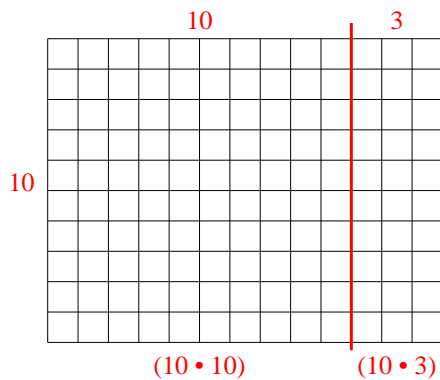
3) $10 \cdot 15 =$



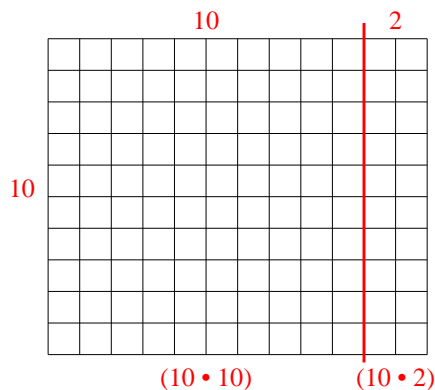
4) $10 \cdot 19 =$



5) $10 \cdot 13 =$



6) $10 \cdot 12 =$



Antworten

1. 460

2. 120

3. 150

4. 190

5. 130

6. 120