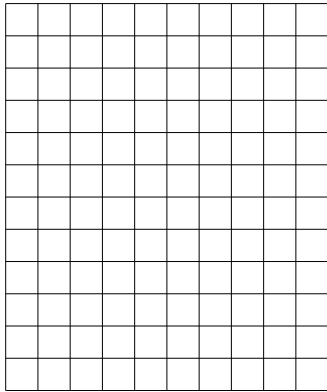


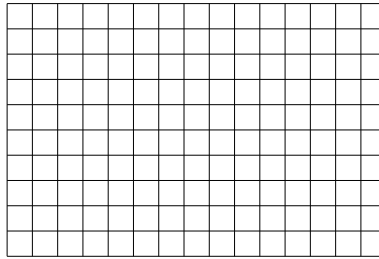


Benutze die vorgegebenen Anordnungen um jede Aufgabe zu lösen.


1)  $12 \cdot 10 =$




2)  $10 \cdot 15 =$




3)  $13 \cdot 10 =$



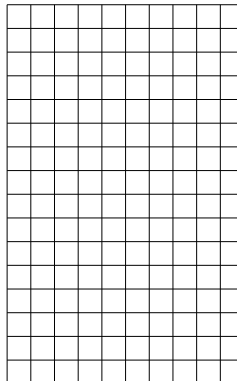
4)  $10 \cdot 18 =$



5)  $14 \cdot 10 =$



6)  $16 \cdot 10 =$



Antworten

1. \_\_\_\_\_

2. \_\_\_\_\_

3. \_\_\_\_\_

4. \_\_\_\_\_

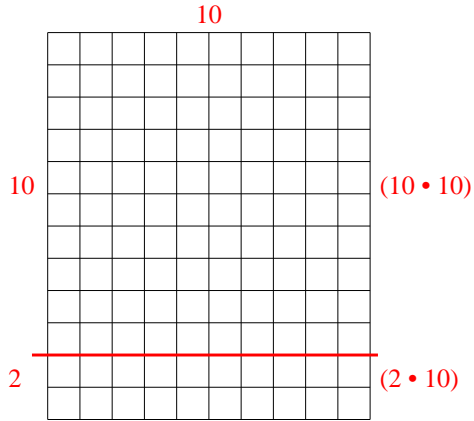
5. \_\_\_\_\_

6. \_\_\_\_\_

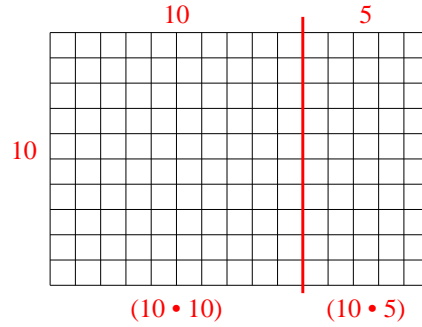


Benutze die vorgegebenen Anordnungen um jede Aufgabe zu lösen.

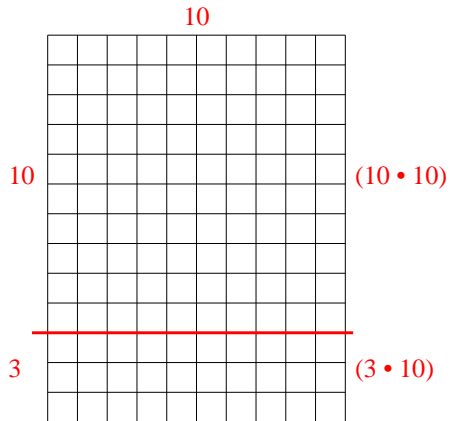
1)  $12 \cdot 10 =$



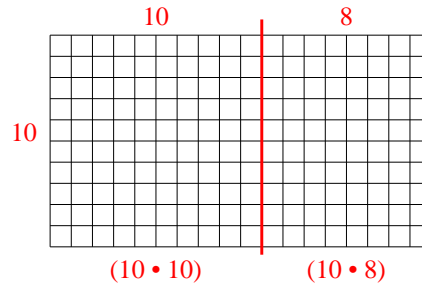
2)  $10 \cdot 15 =$



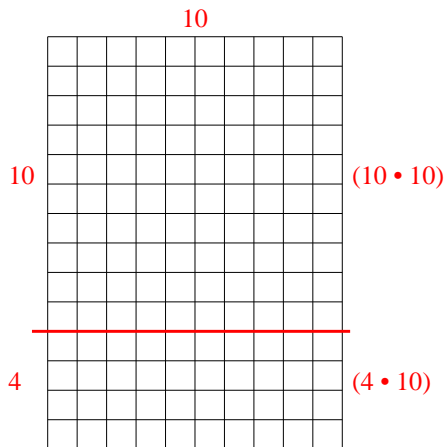
3)  $13 \cdot 10 =$



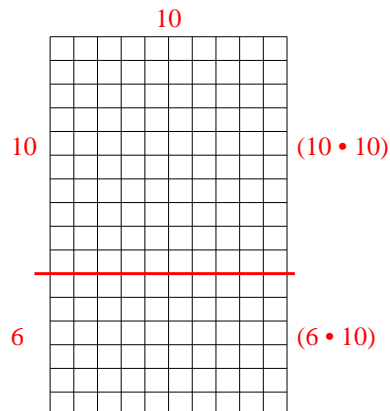
4)  $10 \cdot 18 =$



5)  $14 \cdot 10 =$



6)  $16 \cdot 10 =$



Antworten

1. 120

2. 150

3. 130

4. 180

5. 140

6. 160