

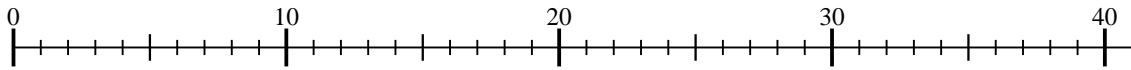


Benutze den Zahlenstrahl um jede Aufgabe zu beantworten.

Antworten

1) $4 \cdot 9 =$

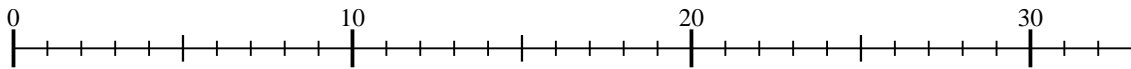
$9 \cdot 4 =$



1. _____

2) $4 \cdot 7 =$

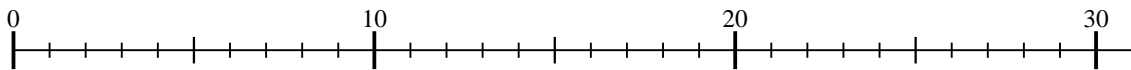
$7 \cdot 4 =$



2. _____

3) $3 \cdot 8 =$

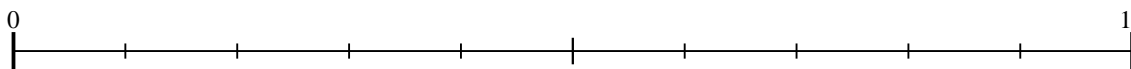
$8 \cdot 3 =$



3. _____

4) $2 \cdot 2 =$

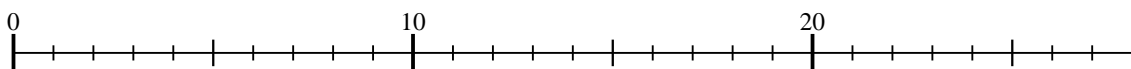
$2 \cdot 2 =$



4. _____

5) $3 \cdot 7 =$

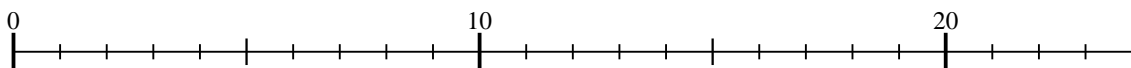
$7 \cdot 3 =$



5. _____

6) $4 \cdot 4 =$

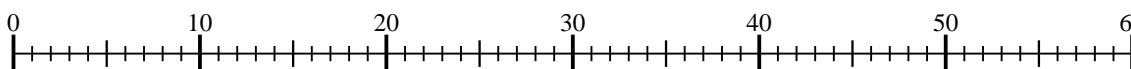
$4 \cdot 4 =$



6. _____

7) $5 \cdot 10 =$

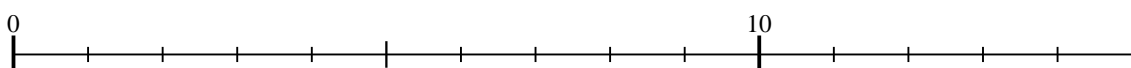
$10 \cdot 5 =$



7. _____

8) $2 \cdot 3 =$

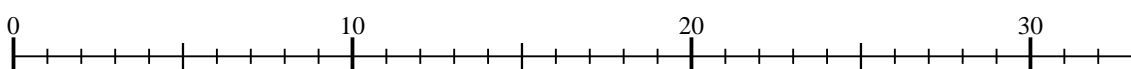
$3 \cdot 2 =$



8. _____

9) $3 \cdot 9 =$

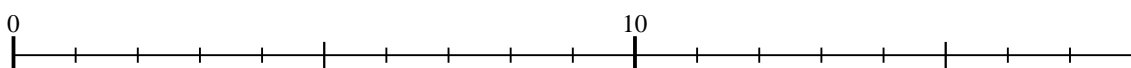
$9 \cdot 3 =$



9. _____

10) $3 \cdot 4 =$

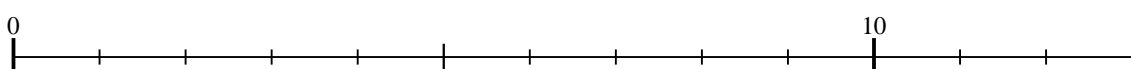
$4 \cdot 3 =$



10. _____

11) $4 \cdot 2 =$

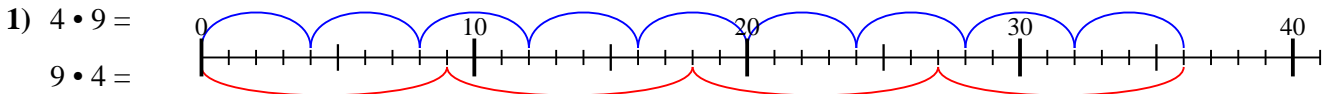
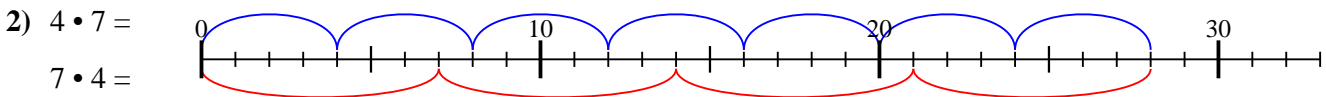
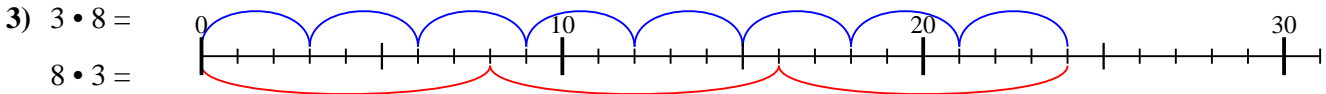
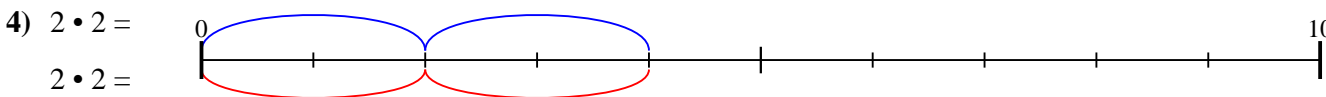
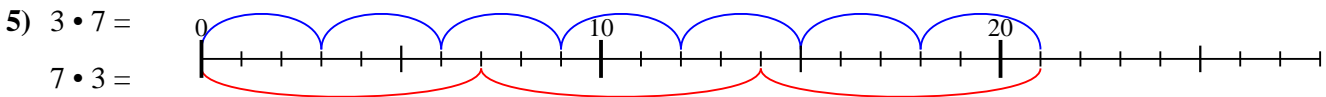
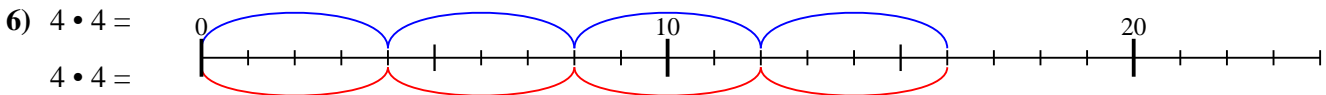
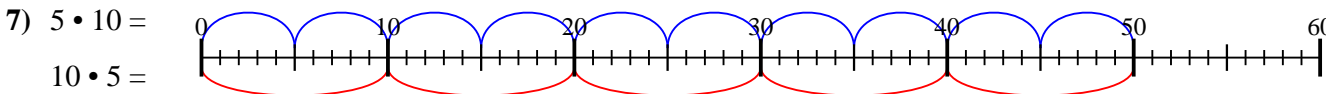
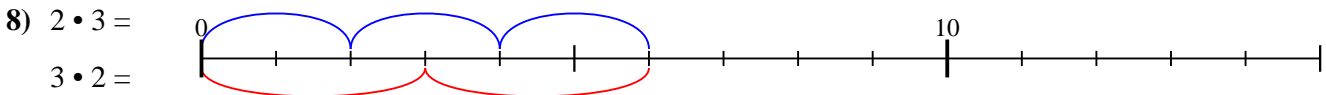
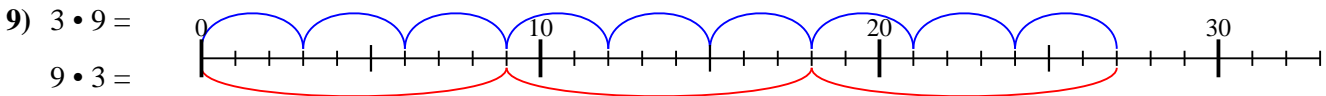
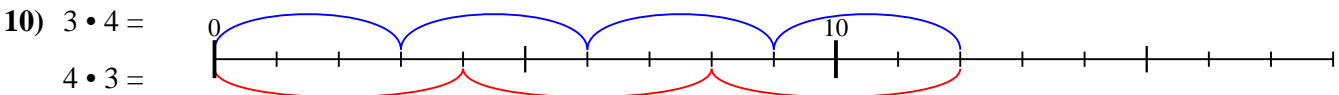
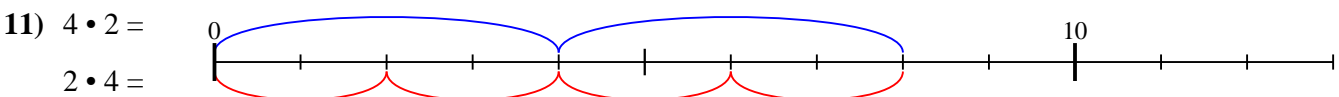
$2 \cdot 4 =$



11. _____



Benutze den Zahlenstrahl um jede Aufgabe zu beantworten.

Antworten1. 362. 283. 244. 45. 216. 167. 508. 69. 2710. 1211. 8