



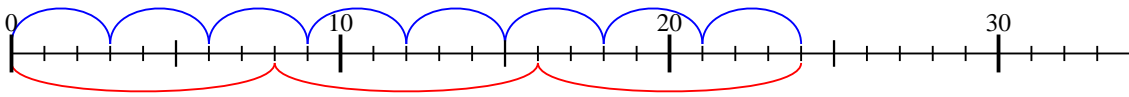


Benutze den Zahlenstrahl um jede Aufgabe zu beantworten.

**Antworten**

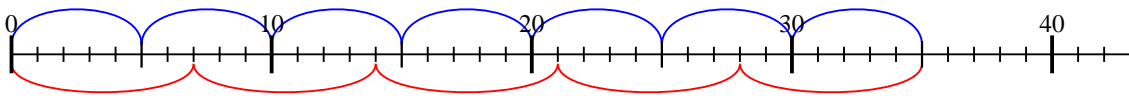
1)  $3 \cdot 8 =$

$8 \cdot 3 =$

1. 24

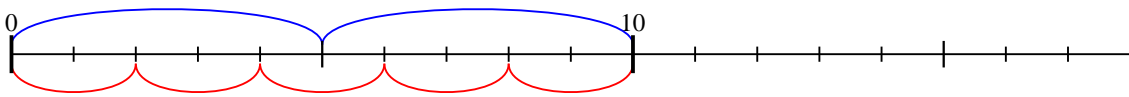
2)  $5 \cdot 7 =$

$7 \cdot 5 =$

2. 35

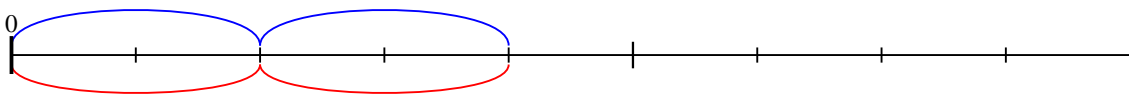
3)  $5 \cdot 2 =$

$2 \cdot 5 =$

4. 4

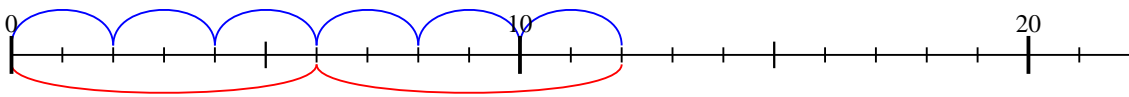
4)  $2 \cdot 2 =$

$2 \cdot 2 =$

6. 18

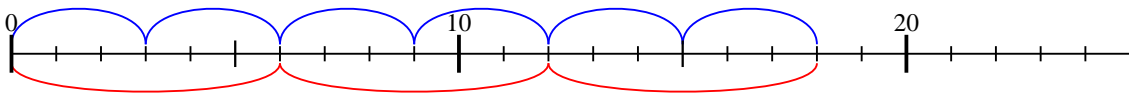
5)  $2 \cdot 6 =$

$6 \cdot 2 =$

7. 16

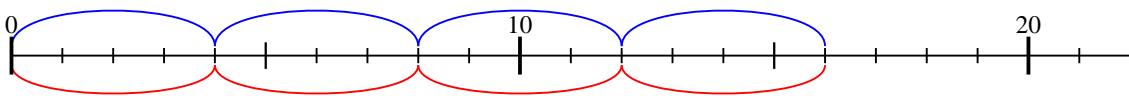
6)  $3 \cdot 6 =$

$6 \cdot 3 =$

8. 10

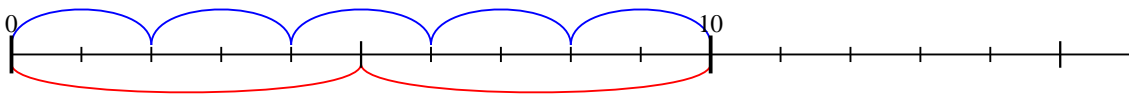
7)  $4 \cdot 4 =$

$4 \cdot 4 =$

9. 20

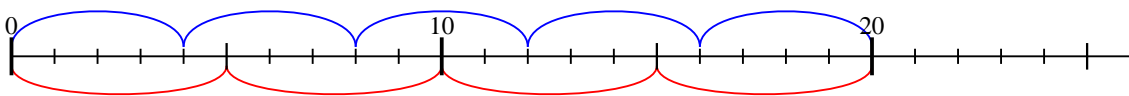
8)  $2 \cdot 5 =$

$5 \cdot 2 =$

10. 16

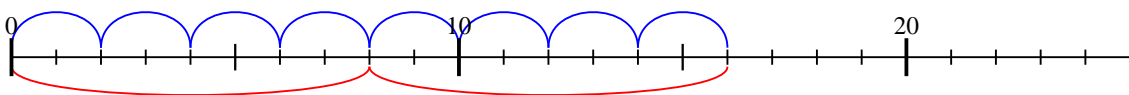
9)  $4 \cdot 5 =$

$5 \cdot 4 =$

11. 32

10)  $2 \cdot 8 =$

$8 \cdot 2 =$



11)  $4 \cdot 8 =$

$8 \cdot 4 =$

