
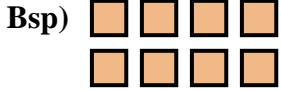




Schreibe eine Gleichung, die der Anordnung entspricht und finde die richtige Anzahl der Formen.



Antworten

Bsp. 2 • 4 = 8

1. _____

2. _____

3. _____

4. _____

5. _____

6. _____

7. _____

8. _____

9. _____

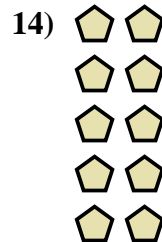

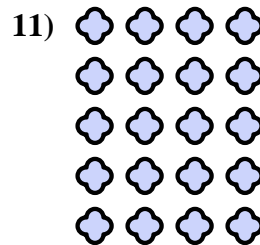
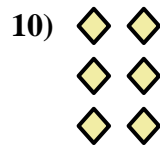

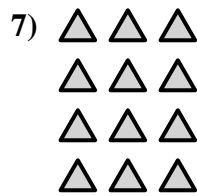


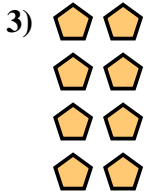
10. _____

11. _____

12. _____

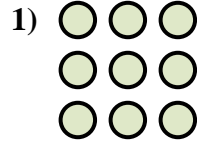
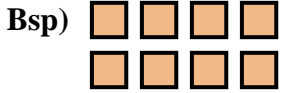
13. _____

14. _____





Schreibe eine Gleichung, die der Anordnung entspricht und finde die richtige Anzahl der Formen.



Antworten

Bsp. 2 • 4 = 8

1. 3 • 3 = 9

2. 5 • 3 = 15

3. 4 • 2 = 8

4. 4 • 4 = 16

5. 2 • 3 = 6

6. 3 • 4 = 12

7. 4 • 3 = 12

8. 3 • 5 = 15

9. 2 • 5 = 10

10. 3 • 2 = 6

11. 5 • 4 = 20

12. 2 • 2 = 4

13. 4 • 5 = 20

14. 5 • 2 = 10

