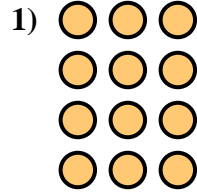
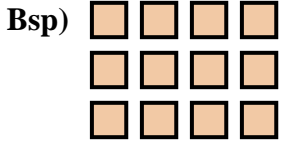




Schreibe eine Gleichung, die der Anordnung entspricht und finde die richtige Anzahl der Formen.



Antworten

Bsp. 3 • 4 = 12

1. _____

2. _____

3. _____

4. _____

5. _____

6. _____

7. _____

8. _____

9. _____



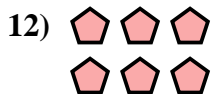


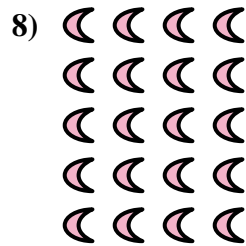

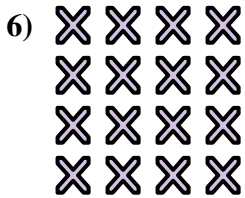

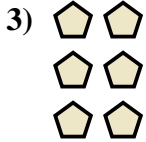
10. _____

11. _____

12. _____

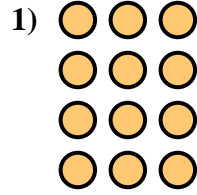
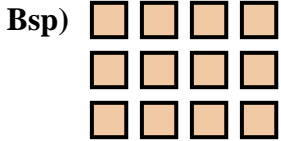
13. _____

14. _____





Schreibe eine Gleichung, die der Anordnung entspricht und finde die richtige Anzahl der Formen.



Antworten

Bsp. $3 \cdot 4 = 12$

1. $4 \cdot 3 = 12$

2. $5 \cdot 5 = 25$

3. $3 \cdot 2 = 6$

4. $2 \cdot 4 = 8$

5. $3 \cdot 5 = 15$

6. $4 \cdot 4 = 16$

7. $4 \cdot 5 = 20$

8. $5 \cdot 4 = 20$

9. $4 \cdot 2 = 8$

10. $2 \cdot 5 = 10$

11. $5 \cdot 3 = 15$

12. $2 \cdot 3 = 6$

13. $5 \cdot 2 = 10$

14. $3 \cdot 3 = 9$

