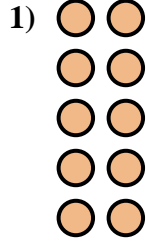
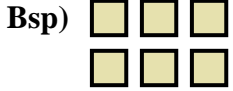




Schreibe eine Gleichung, die der Anordnung entspricht und finde die richtige Anzahl der Formen.



Antworten

Bsp. 2 • 3 = 6

1. _____

2. _____

3. _____

4. _____

5. _____

6. _____

7. _____

8. _____

9. _____



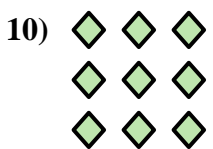




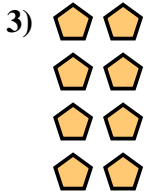
10. _____

11. _____

12. _____

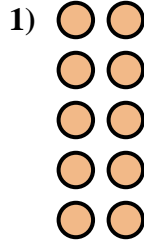
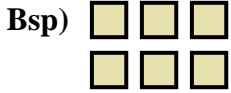
13. _____

14. _____





Schreibe eine Gleichung, die der Anordnung entspricht und finde die richtige Anzahl der Formen.



Antworten

Bsp. 2 • 3 = 6

1. 5 • 2 = 10

2. 2 • 5 = 10

3. 4 • 2 = 8

4. 4 • 5 = 20

5. 3 • 5 = 15

6. 2 • 2 = 4

7. 3 • 4 = 12

8. 3 • 2 = 6

9. 5 • 5 = 25

10. 3 • 3 = 9

11. 5 • 3 = 15

12. 5 • 4 = 20

13. 4 • 3 = 12

14. 2 • 4 = 8

