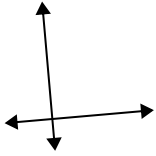




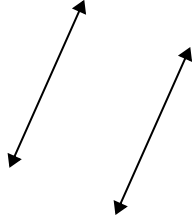
Benutze 'parallel', 'rechtwinklig'(rech) oder 'sich überschneidend'(über) um die Linien zu beschreiben.

Antworten

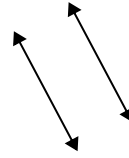
1)



2)



3)



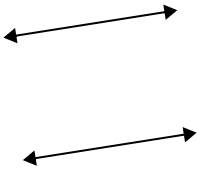
1. \_\_\_\_\_

2. \_\_\_\_\_

3. \_\_\_\_\_

4. \_\_\_\_\_

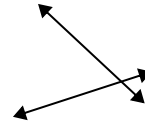
4)



5)



6)



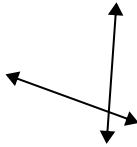
5. \_\_\_\_\_

6. \_\_\_\_\_

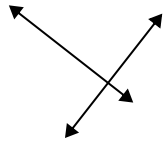
7. \_\_\_\_\_

8. \_\_\_\_\_

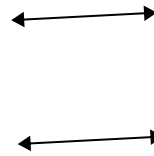
7)



8)



9)

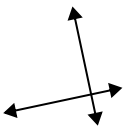


9. \_\_\_\_\_

10. \_\_\_\_\_

11. \_\_\_\_\_

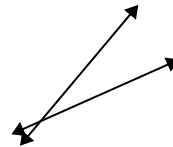
10)



11)



12)



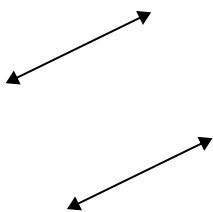
12. \_\_\_\_\_

13. \_\_\_\_\_

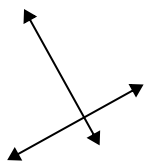
14. \_\_\_\_\_

15. \_\_\_\_\_

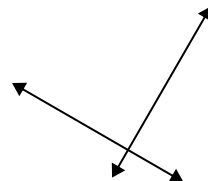
13)



14)



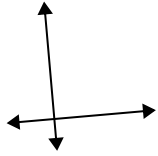
15)



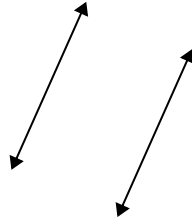


Benutze 'parallel', 'rechtwinklig'(rech) oder 'sich überschneidend'(über) um die Linien zu beschreiben.

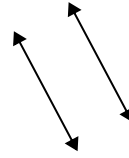
1)



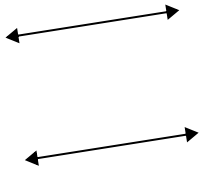
2)



3)



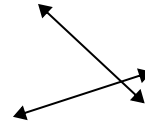
4)



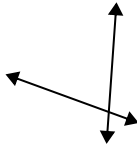
5)



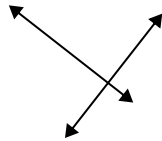
6)



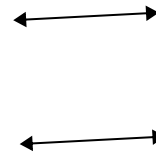
7)



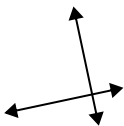
8)



9)



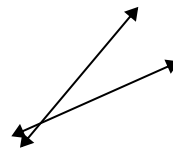
10)



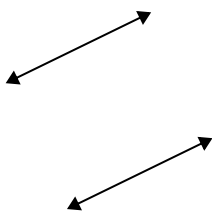
11)



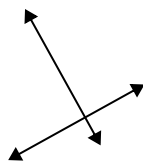
12)



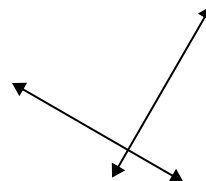
13)



14)



15)



Antworten

1. rech & über

2. parallel

3. parallel

4. parallel

5. über

6. über

7. über

8. rech & über

9. parallel

10. rech & über

11. über

12. über

13. parallel

14. rech & über

15. rech & über