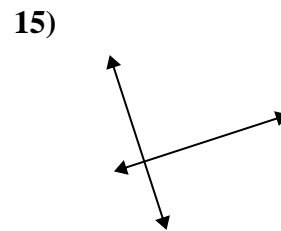
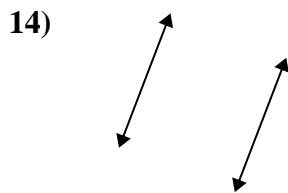
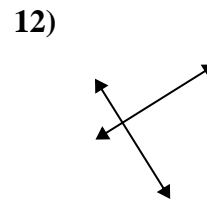
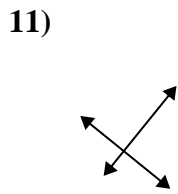
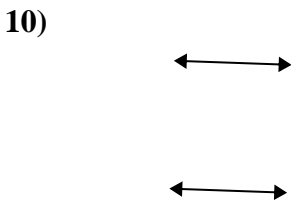
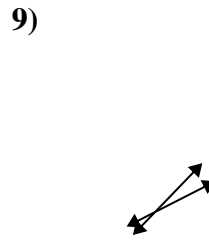
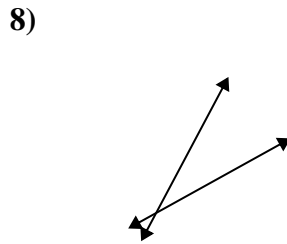
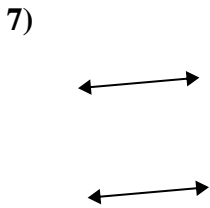
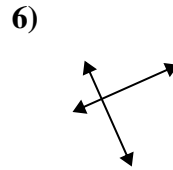
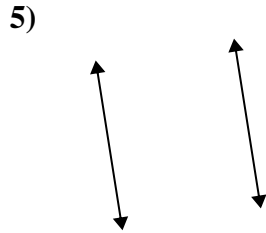
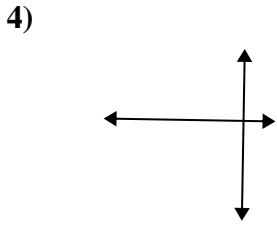
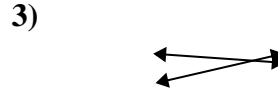
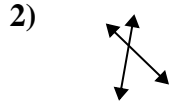
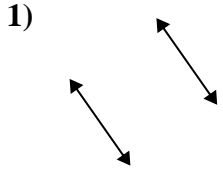




Benutze 'parallel', 'rechtwinklig'(rech) oder 'sich überschneidend'(über) um die Linien zu beschreiben.

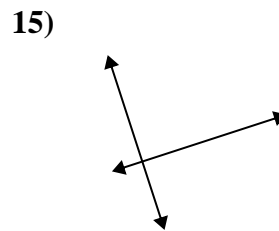
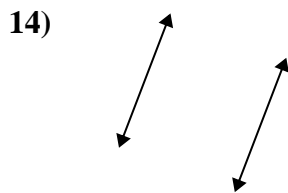
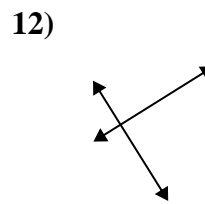
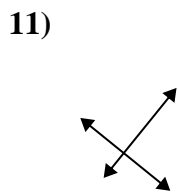
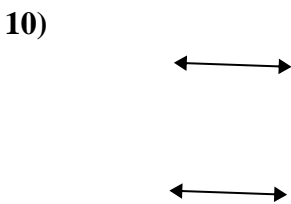
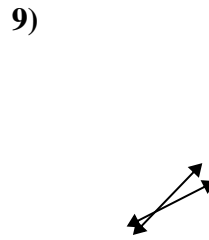
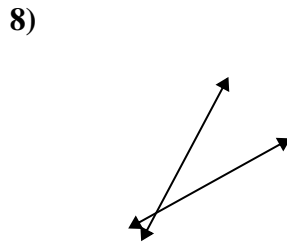
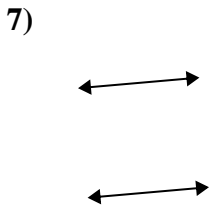
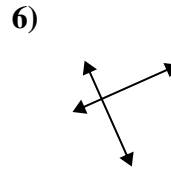
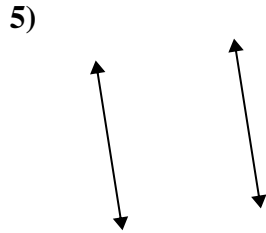
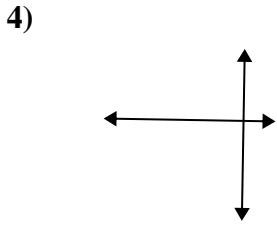
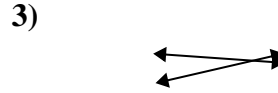
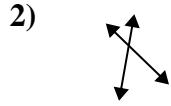
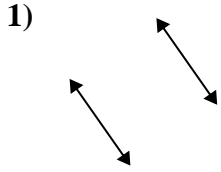
Antworten



- 1. _____
- 2. _____
- 3. _____
- 4. _____
- 5. _____
- 6. _____
- 7. _____
- 8. _____
- 9. _____
- 10. _____
- 11. _____
- 12. _____
- 13. _____
- 14. _____
- 15. _____



Benutze 'parallel', 'rechtwinklig'(rech) oder 'sich überschneidend'(über) um die Linien zu beschreiben.



Antworten

1. parallel

2. über

3. über

4. rech & über

5. parallel

6. rech & über

7. parallel

8. über

9. über

10. parallel

11. rech & über

12. rech & über

13. über

14. parallel

15. rech & über