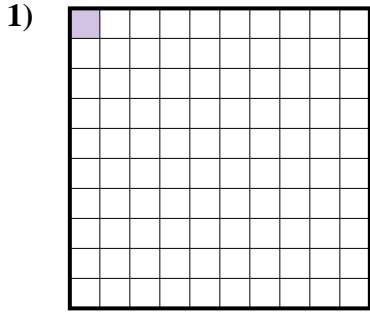
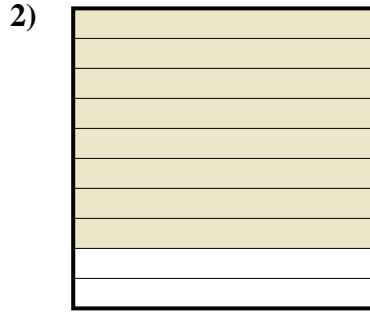




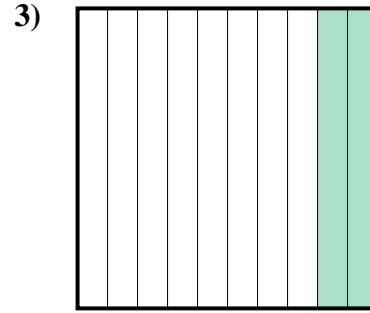
Stelle fest, welcher Buchstabe die schraffierte Fläche in Bezug auf das Ganze richtig darstellt.

Antworten

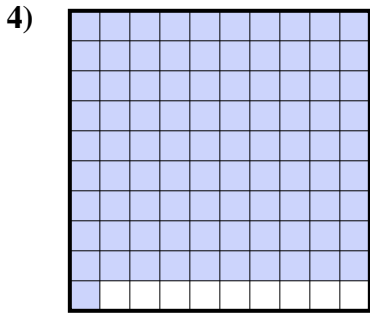
- A. 0,1
B. 10
C. 0,01
D. 0,001



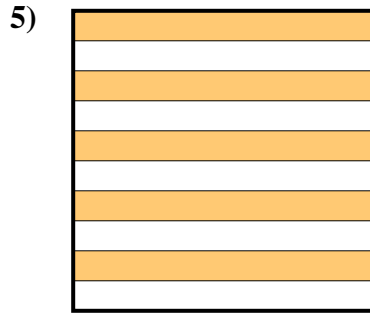
- A. 0,08
B. 800
C. 80
D. 0,8



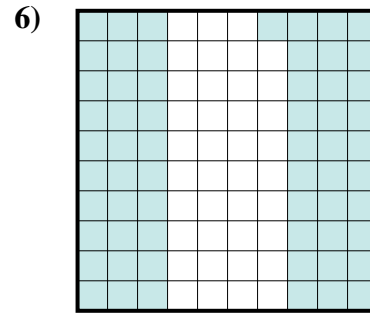
- A. 20
B. 0,2
C. 0,02
D. 200



- A. 0,91
B. 910
C. 0,091
D. 9,1




- A. 500
B. 50
C. 0,05
D. 0,5



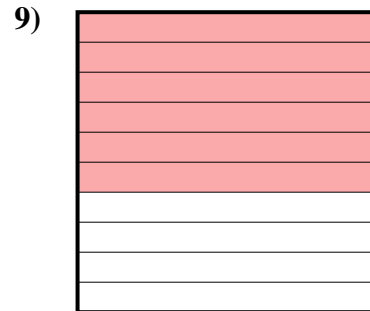
- A. 61
B. 610
C. 0,61
D. 6,1



- A. 0,4
B. 4
C. 40
D. 0,04



- A. 30
B. 0,03
C. 3
D. 0,3

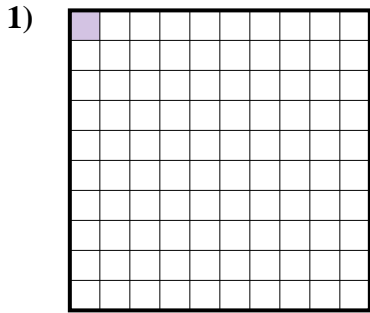


- A. 60
B. 600
C. 0,6
D. 6

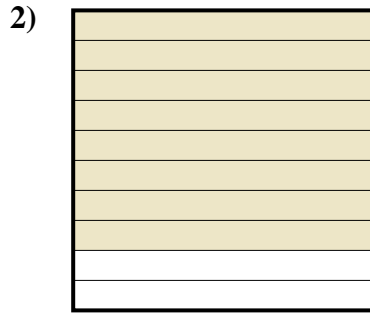
1. _____
2. _____
3. _____
4. _____
5. _____
6. _____
7. _____
8. _____
9. _____



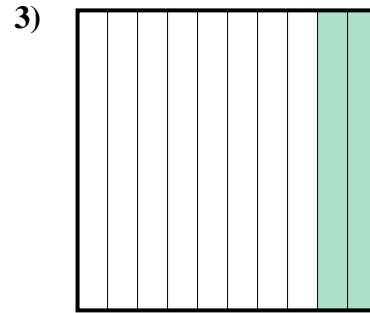
Stelle fest, welcher Buchstabe die schraffierte Fläche in Bezug auf das Ganze richtig darstellt.



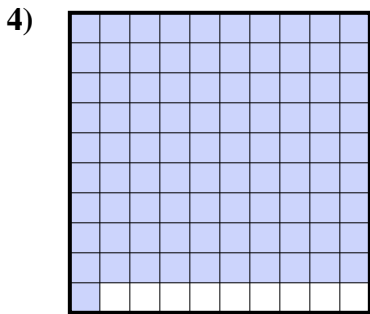
- A. 0,1
B. 10
C. 0,01
D. 0,001



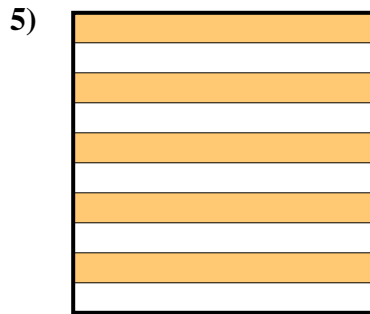
- A. 0,08
B. 800
C. 80
D. 0,8



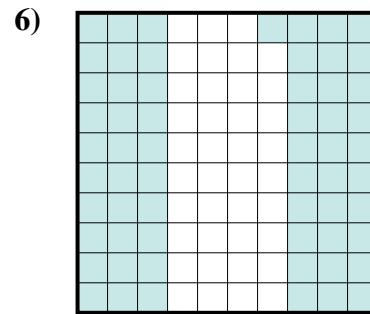
- A. 20
B. 0,2
C. 0,02
D. 200



- A. 0,91
B. 910
C. 0,091
D. 9,1




- A. 500
B. 50
C. 0,05
D. 0,5



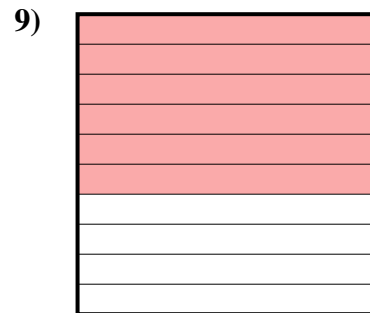
- A. 61
B. 610
C. 0,61
D. 6,1



- A. 0,4
B. 4
C. 40
D. 0,04



- A. 30
B. 0,03
C. 3
D. 0,3



- A. 60
B. 600
C. 0,6
D. 6

Antworten

1. **C**
2. **D**
3. **B**
4. **A**
5. **D**
6. **C**
7. **A**
8. **D**
9. **C**