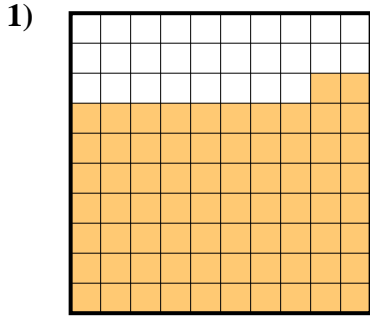
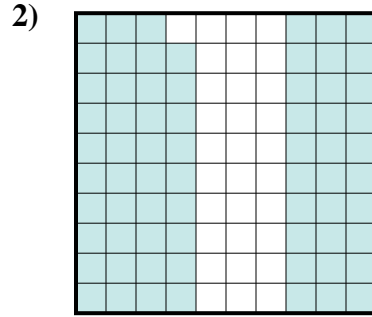




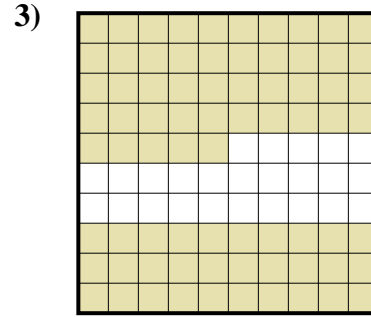
Stelle fest, welcher Buchstabe die schraffierte Fläche in Bezug auf das Ganze richtig darstellt.



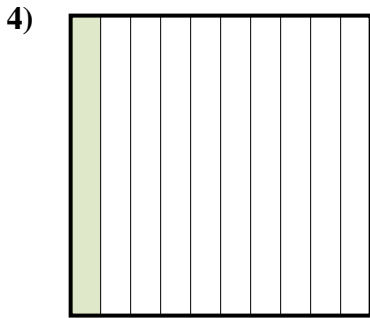
- A. 0,72
- B. 72
- C. 0,072
- D. 720




- A. 0,69
- B. 0,069
- C. 69
- D. 6,9




- A. 7,5
- B. 75
- C. 0,075
- D. 0,75



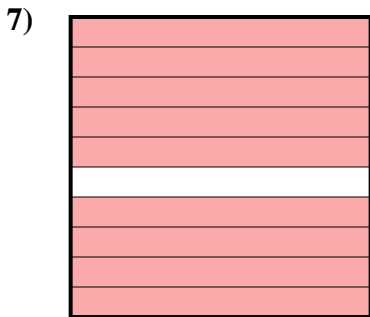
- A. 100
- B. 0,1
- C. 1
- D. 10



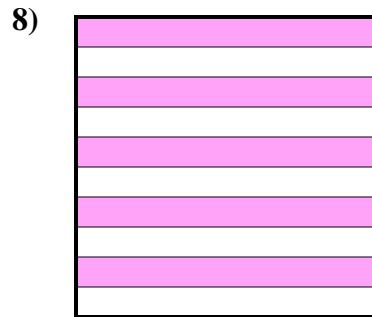
- A. 7
- B. 700
- C. 0,07
- D. 0,7



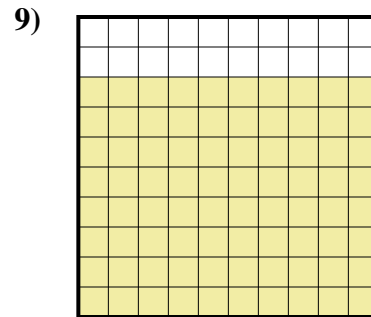
- A. 0,06
- B. 60
- C. 0,6
- D. 600



- A. 9
- B. 90
- C. 900
- D. 0,9



- A. 5
- B. 50
- C. 0,5
- D. 500



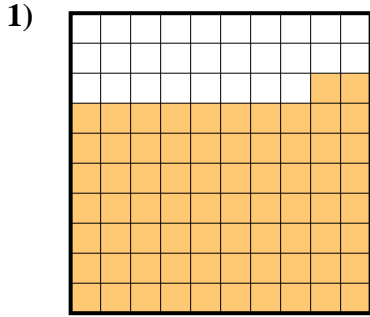
- A. 8
- B. 80
- C. 800
- D. 0,8

Antworten

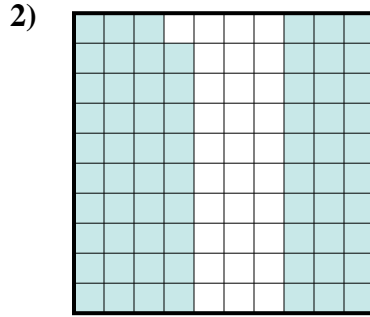
1. _____
2. _____
3. _____
4. _____
5. _____
6. _____
7. _____
8. _____
9. _____



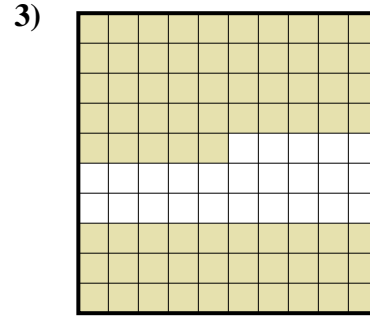
Stelle fest, welcher Buchstabe die schraffierte Fläche in Bezug auf das Ganze richtig darstellt.



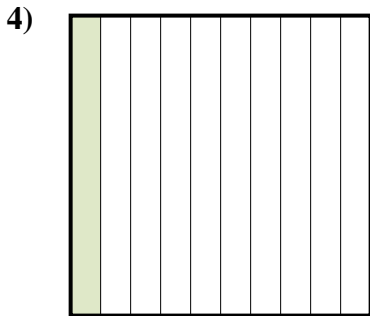
- A. 0,72
- B. 72
- C. 0,072
- D. 720




- A. 0,69
- B. 0,069
- C. 69
- D. 6,9




- A. 7,5
- B. 75
- C. 0,075
- D. 0,75




- A. 100
- B. 0,1
- C. 1
- D. 10



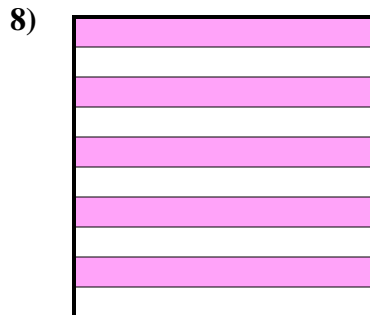
- A. 7
- B. 700
- C. 0,07
- D. 0,7



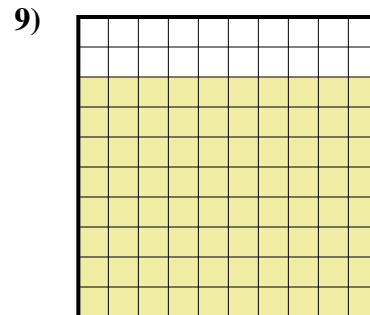
- A. 0,06
- B. 60
- C. 0,6
- D. 600



- A. 9
- B. 90
- C. 900
- D. 0,9



- A. 5
- B. 50
- C. 0,5
- D. 500



- A. 8
- B. 80
- C. 800
- D. 0,8

Antworten

1. **A**
2. **A**
3. **D**
4. **B**
5. **D**
6. **C**
7. **D**
8. **C**
9. **D**