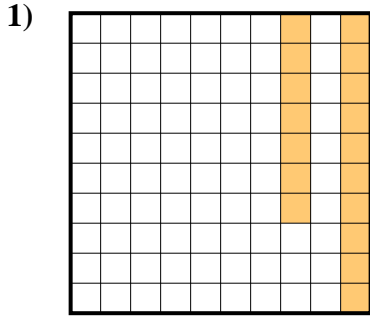
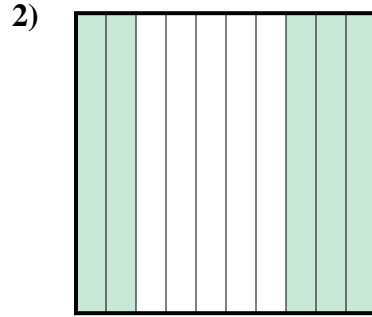




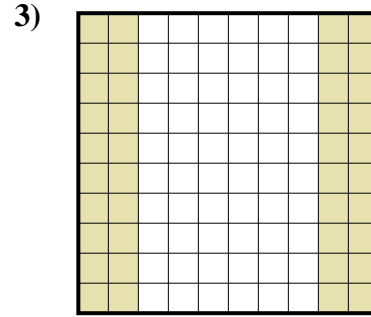
Stelle fest, welcher Buchstabe die schraffierte Fläche in Bezug auf das Ganze richtig darstellt.




- A. 1,7
B. 0,17
C. 0,017
D. 170



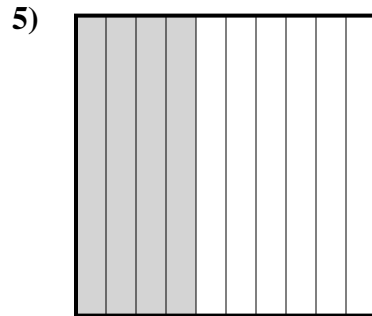
- A. 0,5
B. 500
C. 50
D. 0,05



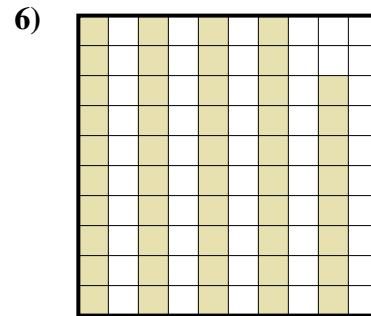
- A. 400
B. 0,04
C. 0,4
D. 40



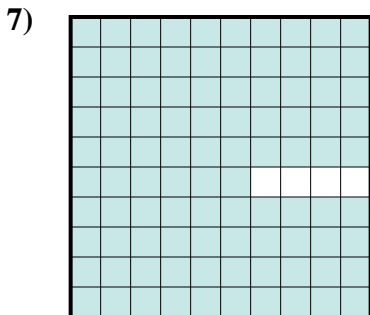
- A. 0,03
B. 30
C. 0,3
D. 300



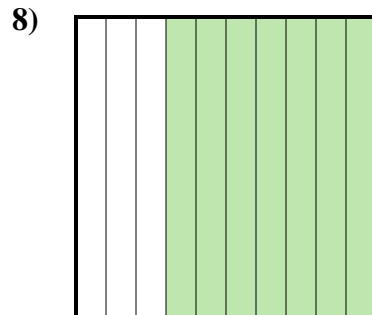
- A. 0,4
B. 400
C. 4
D. 0,04



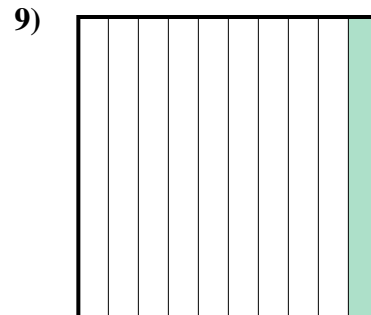
- A. 480
B. 4,8
C. 0,48
D. 48



- A. 0,96
B. 960
C. 96
D. 9,6



- A. 700
B. 0,7
C. 0,07
D. 7



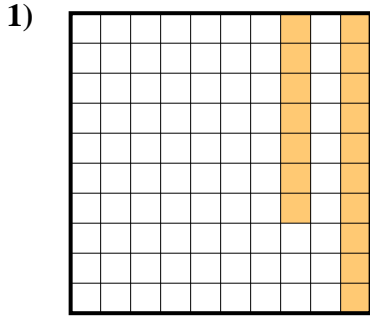
- A. 100
B. 0,1
C. 0,01
D. 1

Antworten

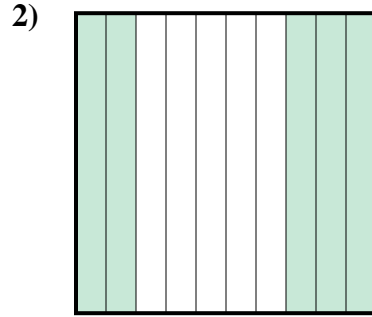
1. _____
2. _____
3. _____
4. _____
5. _____
6. _____
7. _____
8. _____
9. _____



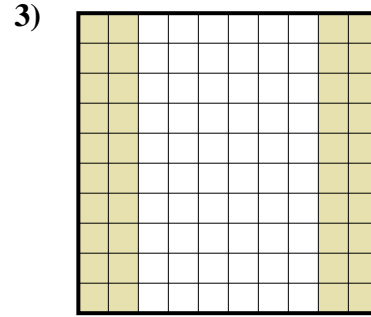
Stelle fest, welcher Buchstabe die schraffierte Fläche in Bezug auf das Ganze richtig darstellt.



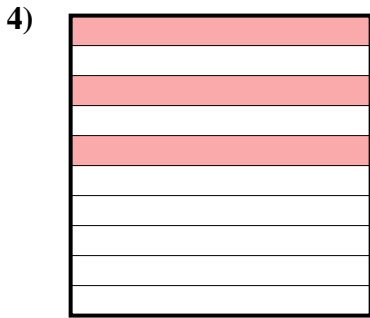
- A. 1,7
B. 0,17
C. 0,017
D. 170



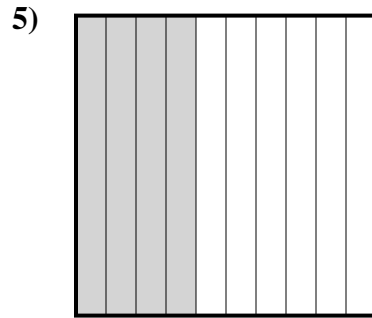
- A. 0,5
B. 500
C. 50
D. 0,05



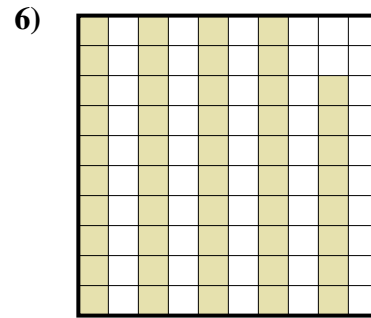
- A. 400
B. 0,04
C. 0,4
D. 40



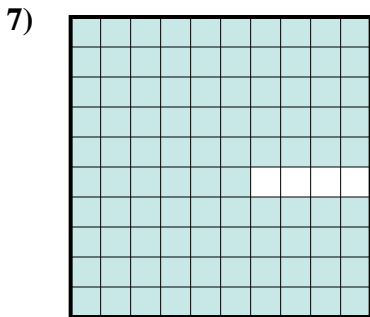
- A. 0,03
B. 30
C. 0,3
D. 300



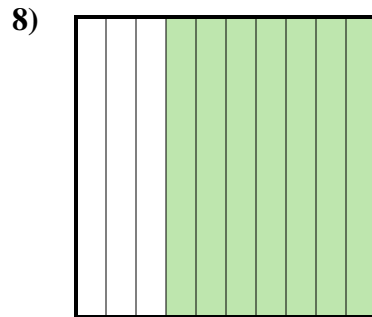
- A. 0,4
B. 400
C. 4
D. 0,04



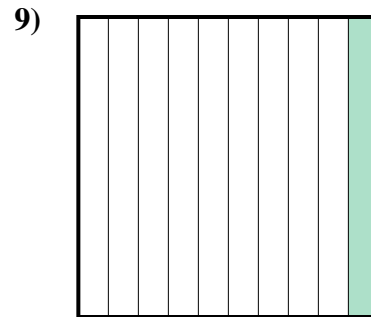
- A. 480
B. 4,8
C. 0,48
D. 48



- A. 0,96
B. 960
C. 96
D. 9,6



- A. 700
B. 0,7
C. 0,07
D. 7



- A. 100
B. 0,1
C. 0,01
D. 1

Antworten

1. **B**
2. **A**
3. **C**
4. **C**
5. **A**
6. **C**
7. **A**
8. **B**
9. **B**