

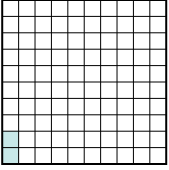
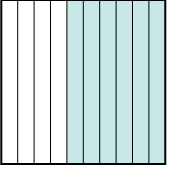




Ordne die folgenden Flächen der Größe nach (von der kleinsten Fläche zur größten) gemäß den Schattierungen.

Bsp) A  B  C  D 

klein 0,02 - C
0,5 - A
0,6 - D
 groß 0,9 - B

Antworten

Bsp. C,A,D,B

1. _____

2. _____

3. _____

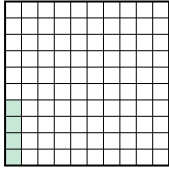

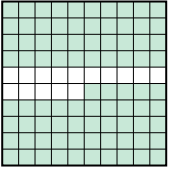
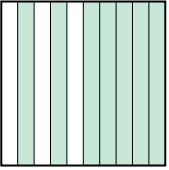
4. _____

5. _____

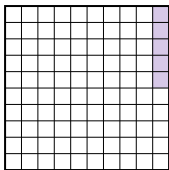

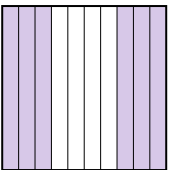
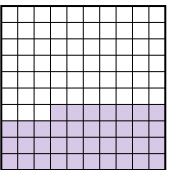
6. _____

7. _____

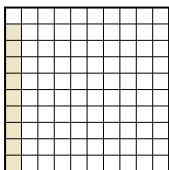
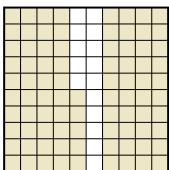
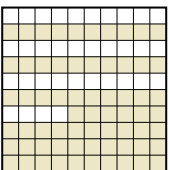

8. _____

1) A  B  C  D 


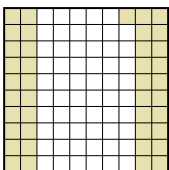
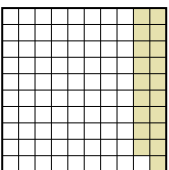
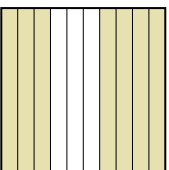
klein _____
 groß _____

2) A  B  C  D 

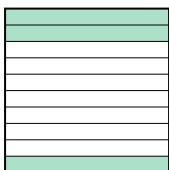

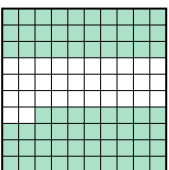
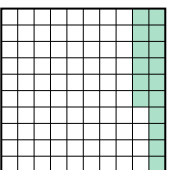
klein _____
 groß _____

3) A  B  C  D 


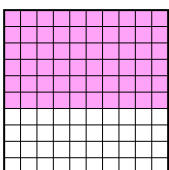

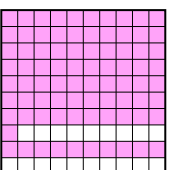
klein _____
 groß _____

4) A  B  C  D 

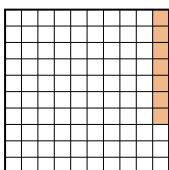
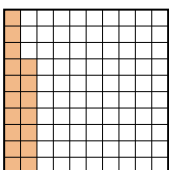
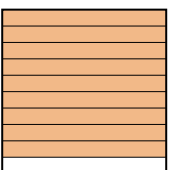
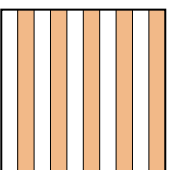
klein _____
 groß _____

5) A  B  C  D 


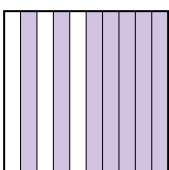

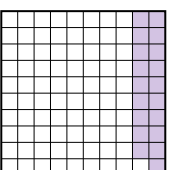
klein _____
 groß _____

6) A  B  C  D 

klein _____
 groß _____

7) A  B  C  D 



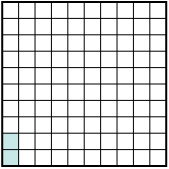
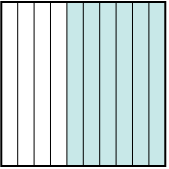
klein _____
 groß _____

8) A  B  C  D 

klein _____
 groß _____

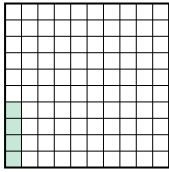

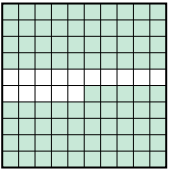
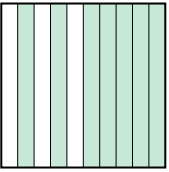


Ordne die folgenden Flächen der Größe nach (von der kleinsten Fläche zur größten) gemäß den Schattierungen.

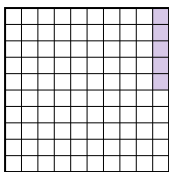

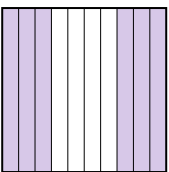
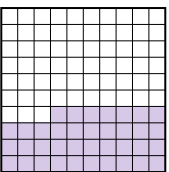
Bsp) A  B  C  D 

klein $\frac{0,02 - C}{0,5 - A}$
groß $\frac{0,6 - D}{0,9 - B}$

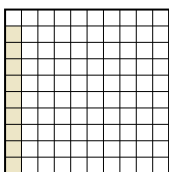
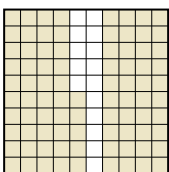
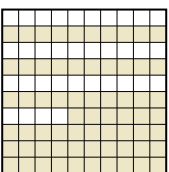

AntwortenBsp. C,A,D,B1. A,D,B,C2. A,D,C,B3. A,C,D,B4. C,A,B,D5. B,D,A,C6. A,B,C,D7. A,B,D,C8. D,C,A,B

1) A  B  C  D 


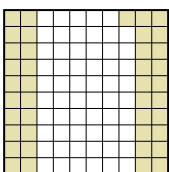
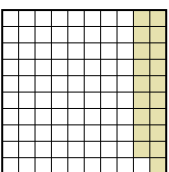
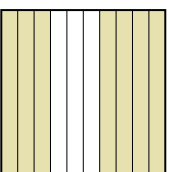
klein $\frac{0,04 - A}{0,7 - D}$
groß $\frac{0,8 - B}{0,85 - C}$

2) A  B  C  D 

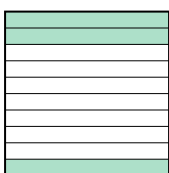

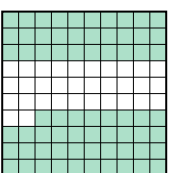
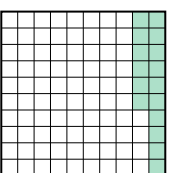
klein $\frac{0,05 - A}{0,37 - D}$
groß $\frac{0,6 - C}{0,95 - B}$

3) A  B  C  D 


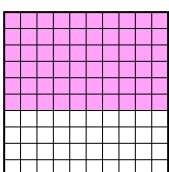

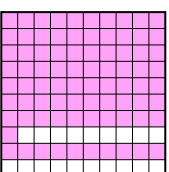
klein $\frac{0,09 - A}{0,66 - C}$
groß $\frac{0,8 - D}{0,85 - B}$

4) A  B  C  D 

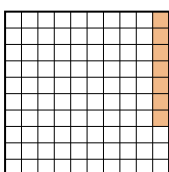
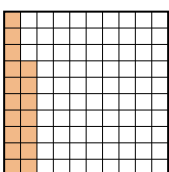
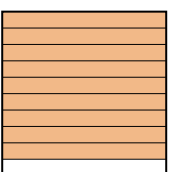
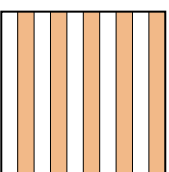
klein $\frac{0,19 - C}{0,4 - A}$
groß $\frac{0,41 - B}{0,7 - D}$

5) A  B  C  D 


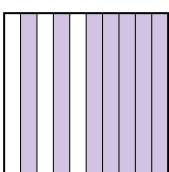
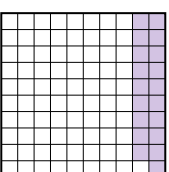
klein $\frac{0,1 - B}{0,16 - D}$
groß $\frac{0,3 - A}{0,68 - C}$

6) A  B  C  D 

klein $\frac{0,02 - A}{0,60 - B}$
groß $\frac{0,8 - C}{0,81 - D}$

7) A  B  C  D 

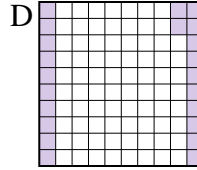
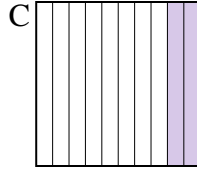
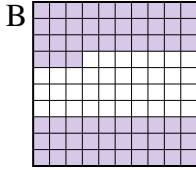
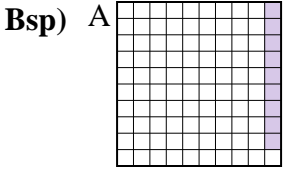
klein $\frac{0,07 - A}{0,17 - B}$
groß $\frac{0,5 - D}{0,9 - C}$

8) A  B  C  D 

klein $\frac{0,19 - D}{0,3 - C}$
groß $\frac{0,6 - A}{0,7 - B}$



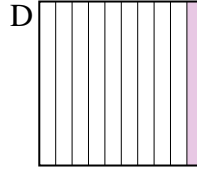
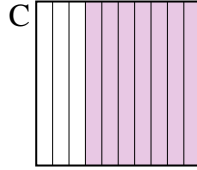
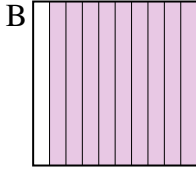
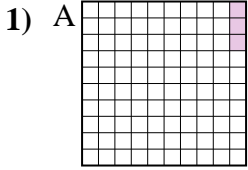
Ordne die folgenden Flächen der Größe nach (von der kleinsten Fläche zur größten) gemäß den Schattierungen.



klein 0,09 - A
0,2 - C
0,22 - D
groß 0,63 - B

Antworten

Bsp. A,C,D,B



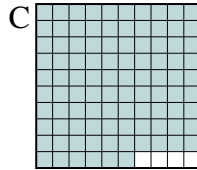
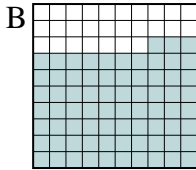
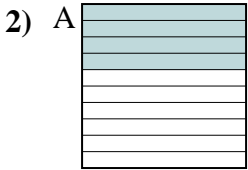
klein _____

groß _____

1. _____

2. _____

3. _____

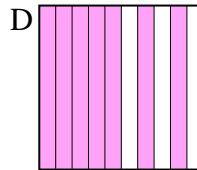
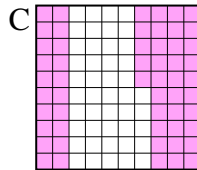
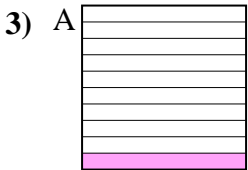


klein _____

groß _____

4. _____

5. _____



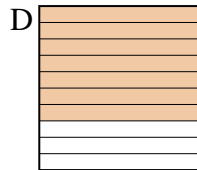

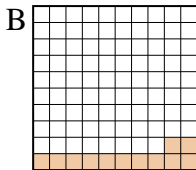
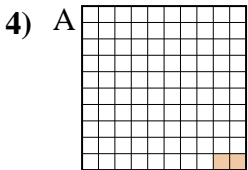
klein _____

groß _____

6. _____



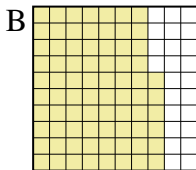
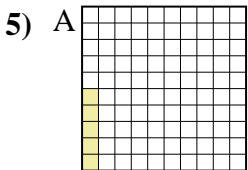
7. _____

8. _____



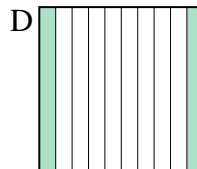
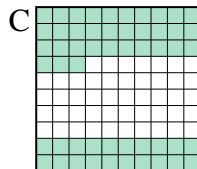
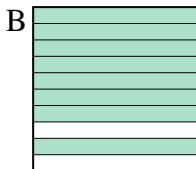
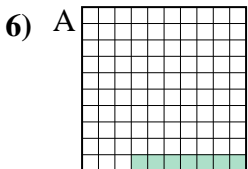
klein _____

groß _____



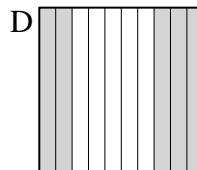
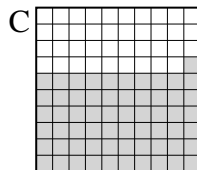
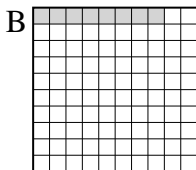
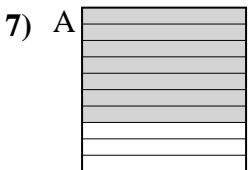
klein _____

groß _____



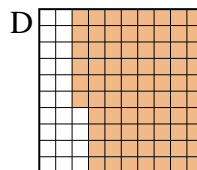
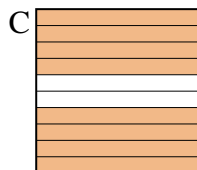
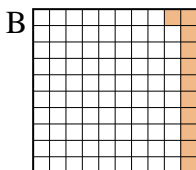
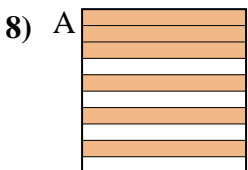
klein _____

groß _____



klein _____

groß _____

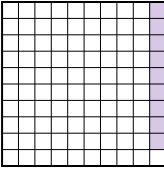
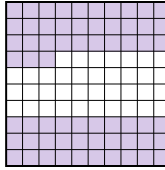

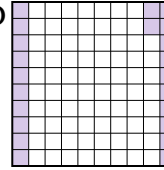


klein _____

groß _____

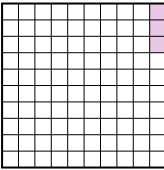
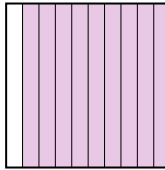
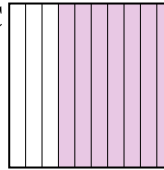
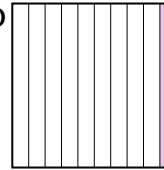


Ordne die folgenden Flächen der Größe nach (von der kleinsten Fläche zur größten) gemäß den Schattierungen.

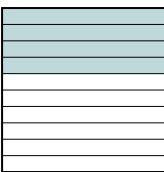
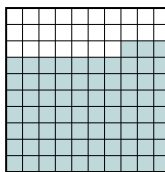


Bsp) A  B  C  D 

klein $\frac{0,09 - A}{0,2 - C}$
 $\frac{0,22 - D}{0,63 - B}$
 groß



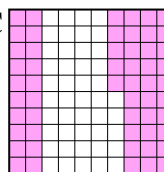
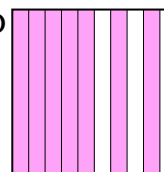
AntwortenBsp. A,C,D,B1. A,D,C,B2. A,D,B,C3. A,B,C,D4. A,B,C,D5. A,C,D,B6. A,D,C,B7. B,D,C,A8. B,A,D,C

1) A  B  C  D 

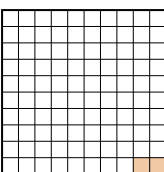
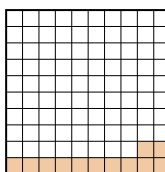

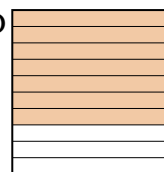
klein $\frac{0,03 - A}{0,1 - D}$
 $\frac{0,7 - C}{0,9 - B}$
 groß

2) A  B  C  D 

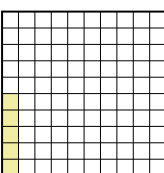
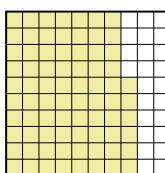
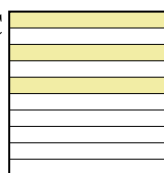

klein $\frac{0,4 - A}{0,6 - D}$
 $\frac{0,73 - B}{0,96 - C}$
 groß

3) A  B  C  D 



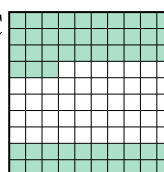
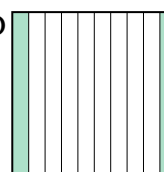
klein $\frac{0,1 - A}{0,3 - B}$
 $\frac{0,55 - C}{0,7 - D}$
 groß

4) A  B  C  D 




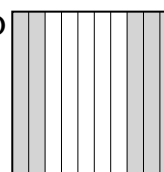
klein $\frac{0,02 - A}{0,12 - B}$
 $\frac{0,4 - C}{0,7 - D}$
 groß

5) A  B  C  D 


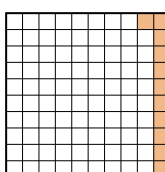
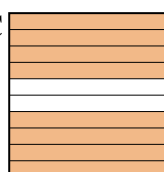
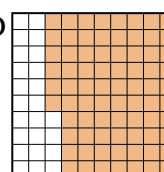
klein $\frac{0,05 - A}{0,3 - C}$
 $\frac{0,6 - D}{0,76 - B}$
 groß

6) A  B  C  D 

klein $\frac{0,07 - A}{0,2 - D}$
 $\frac{0,53 - C}{0,8 - B}$
 groß

7) A  B  C  D 

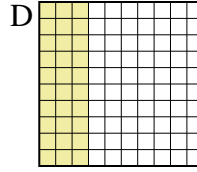
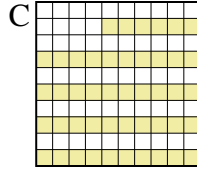
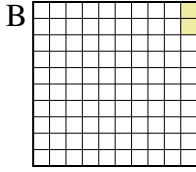
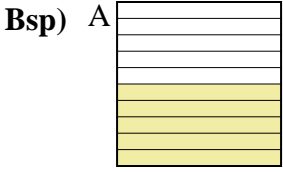
klein $\frac{0,08 - B}{0,5 - D}$
 $\frac{0,61 - C}{0,7 - A}$
 groß

8) A  B  C  D 

klein $\frac{0,11 - B}{0,6 - A}$
 $\frac{0,76 - D}{0,8 - C}$
 groß



Ordne die folgenden Flächen der Größe nach (von der kleinsten Fläche zur größten) gemäß den Schattierungen.

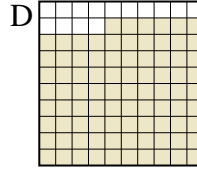
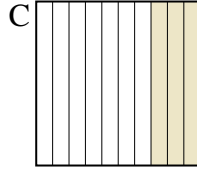
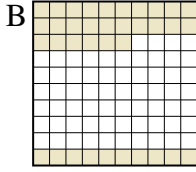
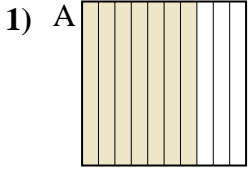


klein 0,02 - B
0,30 - D
0,46 - C
groß 0,5 - A

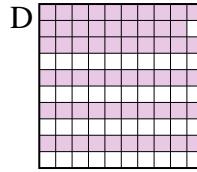
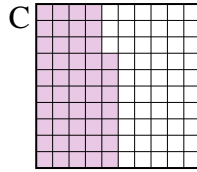
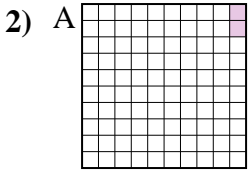
Antworten

Bsp. B,D,C,A

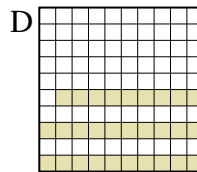

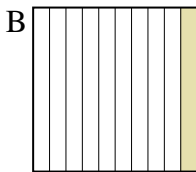
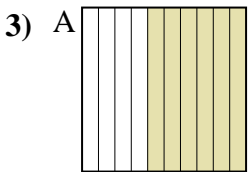
1. _____
2. _____
3. _____
4. _____
5. _____
6. _____
7. _____
8. _____



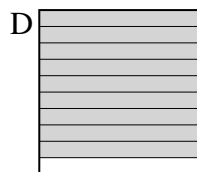
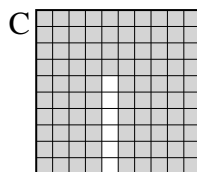

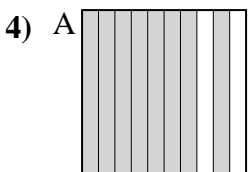
klein _____
groß _____




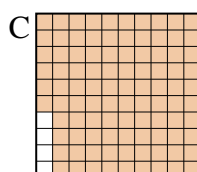
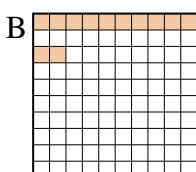
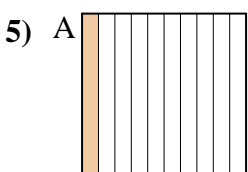
klein _____
groß _____



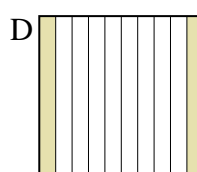
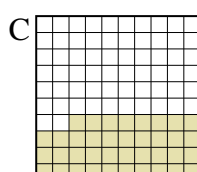
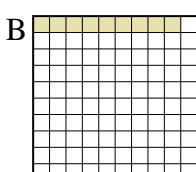
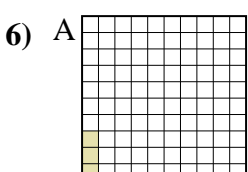
klein _____
groß _____



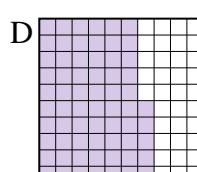
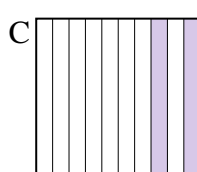
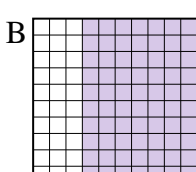
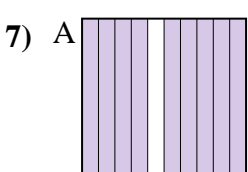
klein _____
groß _____



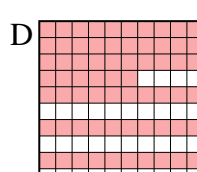

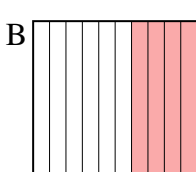
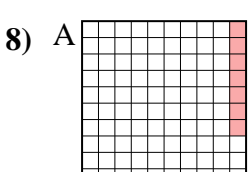
klein _____
groß _____



klein _____
groß _____




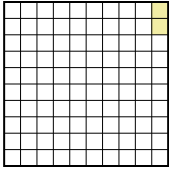
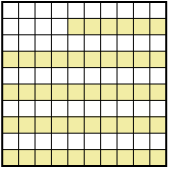
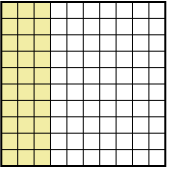
klein _____
groß _____

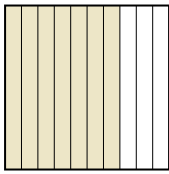
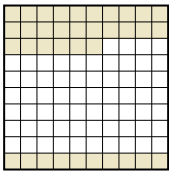
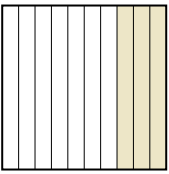
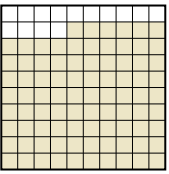


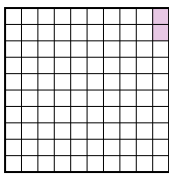

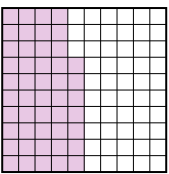
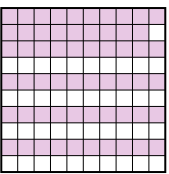
klein _____
groß _____

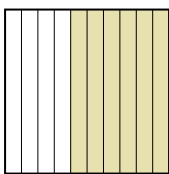


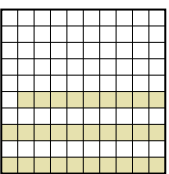


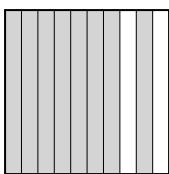



Ordne die folgenden Flächen der Größe nach (von der kleinsten Fläche zur größten) gemäß den Schattierungen.

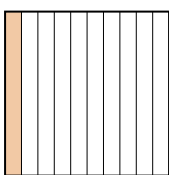
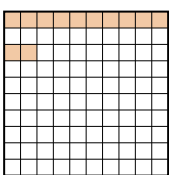
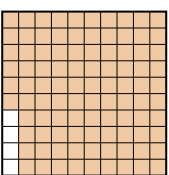

Bsp) A  B  C  D  klein $\frac{0,02 - B}{0,30 - D}$
groß $\frac{0,46 - C}{0,5 - A}$

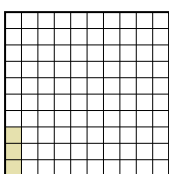
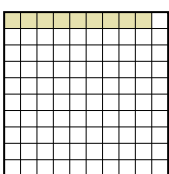
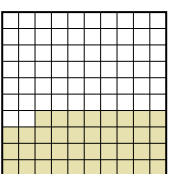
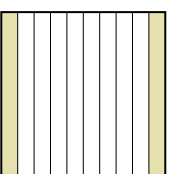
1) A  B  C  D  klein $\frac{0,3 - C}{0,36 - B}$
groß $\frac{0,7 - A}{0,86 - D}$

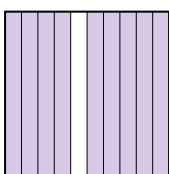
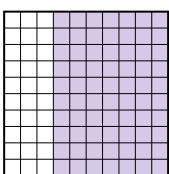
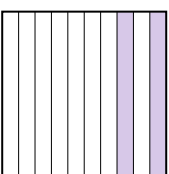
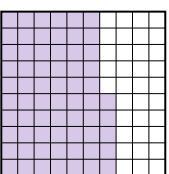
2) A  B  C  D  klein $\frac{0,02 - A}{0,47 - C}$
groß $\frac{0,59 - D}{0,6 - B}$

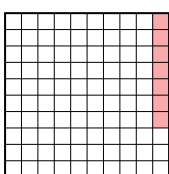
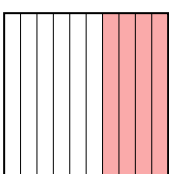

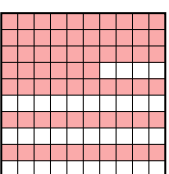
3) A  B  C  D  klein $\frac{0,1 - B}{0,29 - D}$
groß $\frac{0,6 - A}{0,8 - C}$

4) A  B  C  D  klein $\frac{0,8 - A}{0,9 - D}$
groß $\frac{0,90 - B}{0,94 - C}$

5) A  B  C  D  klein $\frac{0,1 - A}{0,12 - B}$
groß $\frac{0,2 - D}{0,96 - C}$

6) A  B  C  D  klein $\frac{0,03 - A}{0,09 - B}$
groß $\frac{0,2 - D}{0,38 - C}$


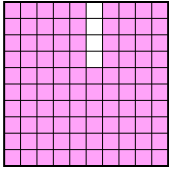
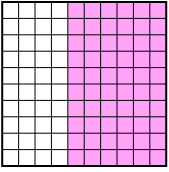

7) A  B  C  D  klein $\frac{0,2 - C}{0,65 - D}$
groß $\frac{0,70 - B}{0,9 - A}$

8) A  B  C  D  klein $\frac{0,07 - A}{0,1 - C}$
groß $\frac{0,4 - B}{0,66 - D}$

AntwortenBsp. B,D,C,A1. C,B,A,D2. A,C,D,B3. B,D,A,C4. A,D,B,C5. A,B,D,C6. A,B,D,C7. C,D,B,A8. A,C,B,D



Ordne die folgenden Flächen der Größe nach (von der kleinsten Fläche zur größten) gemäß den Schattierungen.

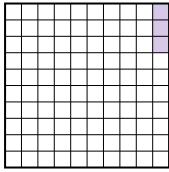
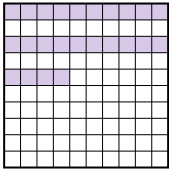

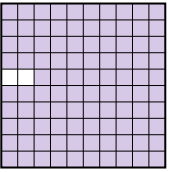
Bsp) A  B  C  D 

klein 0,2 - D
0,6 - A
0,60 - C
 groß 0,96 - B

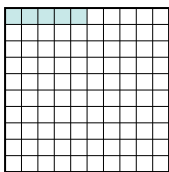
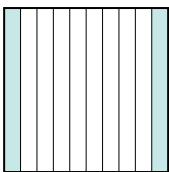

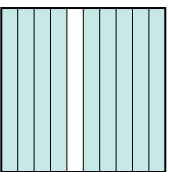
Antworten

Bsp. D,A,C,B



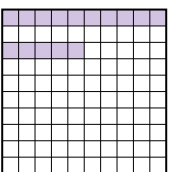
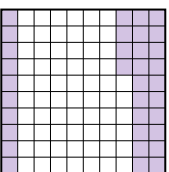
1. _____
2. _____
3. _____
4. _____
5. _____
6. _____
7. _____
8. _____

1) A  B  C  D 


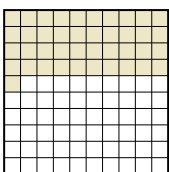
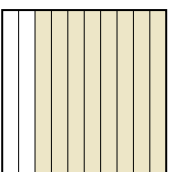
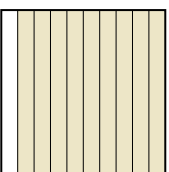
klein _____
 groß _____

2) A  B  C  D 

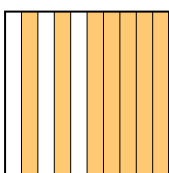
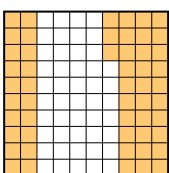
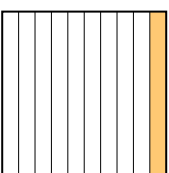
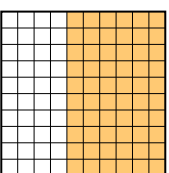
klein _____
 groß _____

3) A  B  C  D 

klein _____
 groß _____

4) A  B  C  D 

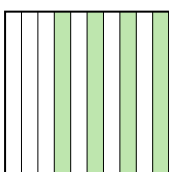
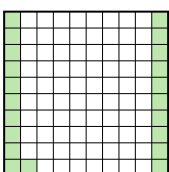
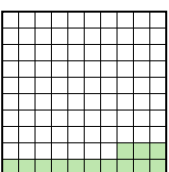
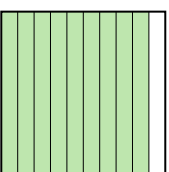
klein _____
 groß _____

5) A  B  C  D 

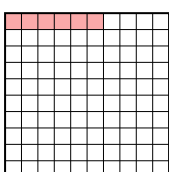
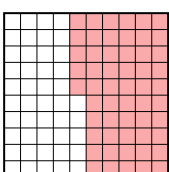
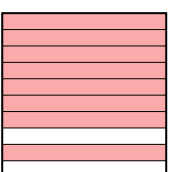
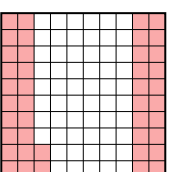
klein _____
 groß _____

6) A  B  C  D 

klein _____
 groß _____

7) A  B  C  D 


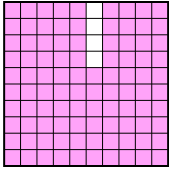
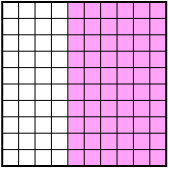

klein _____
 groß _____

8) A  B  C  D 

klein _____
 groß _____

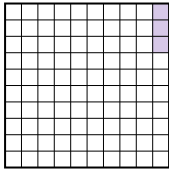
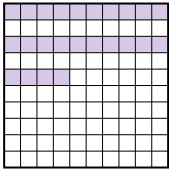

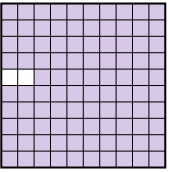


Ordne die folgenden Flächen der Größe nach (von der kleinsten Fläche zur größten) gemäß den Schattierungen.

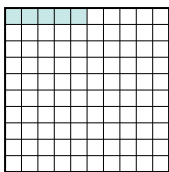
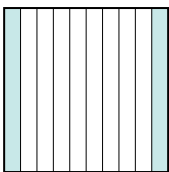
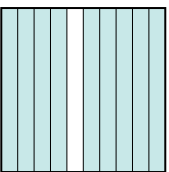
Bsp) A  B  C  D 

klein $\frac{0,2}{0,6} - D$
 $\frac{0,6}{0,60} - A$
 groß $\frac{0,60}{0,96} - C$



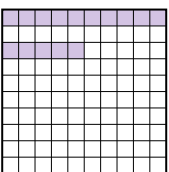
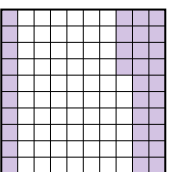
AntwortenBsp. D,A,C,B1. A,B,C,D2. A,B,C,D3. A,C,D,B4. A,B,C,D5. C,B,D,A6. B,A,C,D7. C,B,A,D8. A,D,B,C

1) A  B  C  D 


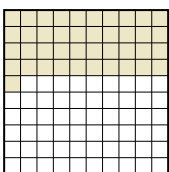
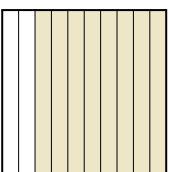
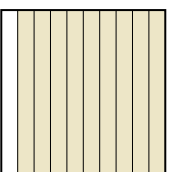
klein $\frac{0,03}{0,24} - A$
 $\frac{0,24}{0,4} - B$
 groß $\frac{0,4}{0,98} - D$

2) A  B  C  D 

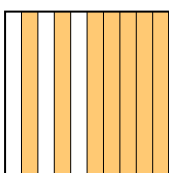
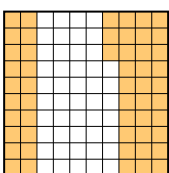
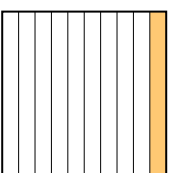
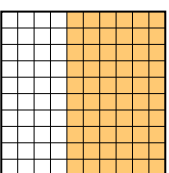
klein $\frac{0,05}{0,2} - A$
 $\frac{0,2}{0,7} - B$
 groß $\frac{0,7}{0,9} - D$

3) A  B  C  D 

klein $\frac{0,1}{0,15} - A$
 $\frac{0,15}{0,34} - C$
 groß $\frac{0,34}{0,7} - D$

4) A  B  C  D 

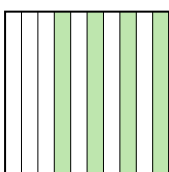
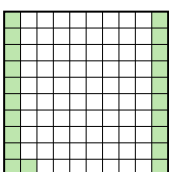
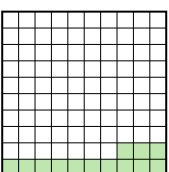
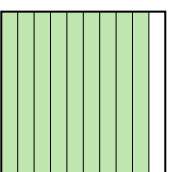
klein $\frac{0,2}{0,41} - A$
 $\frac{0,41}{0,8} - B$
 groß $\frac{0,8}{0,9} - D$

5) A  B  C  D 

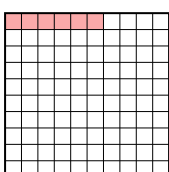
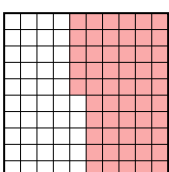
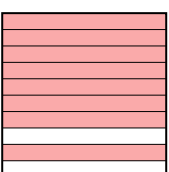
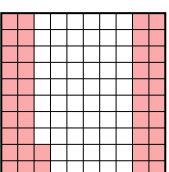
klein $\frac{0,1}{0,53} - C$
 $\frac{0,53}{0,60} - B$
 groß $\frac{0,60}{0,7} - A$

6) A  B  C  D 

klein $\frac{0,02}{0,07} - B$
 $\frac{0,07}{0,4} - A$
 groß $\frac{0,4}{0,9} - D$

7) A  B  C  D 

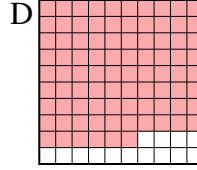
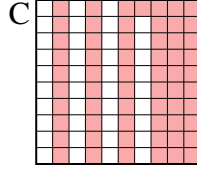

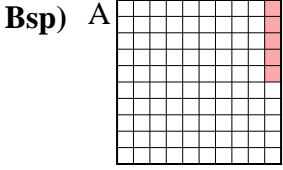
klein $\frac{0,13}{0,21} - C$
 $\frac{0,21}{0,4} - B$
 groß $\frac{0,4}{0,9} - D$

8) A  B  C  D 

klein $\frac{0,06}{0,42} - A$
 $\frac{0,42}{0,55} - D$
 groß $\frac{0,55}{0,8} - C$

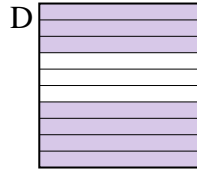
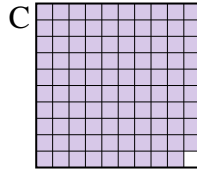
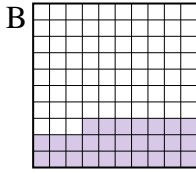
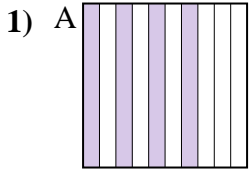


Ordne die folgenden Flächen der Größe nach (von der kleinsten Fläche zur größten) gemäß den Schattierungen.



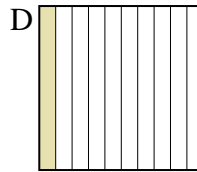
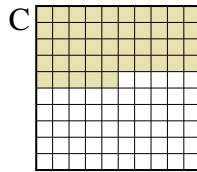
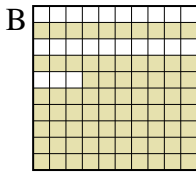
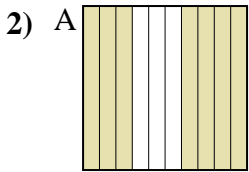
klein 0,05 - A
0,1 - B
0,61 - C
groß 0,86 - D

Antworten
Bsp. A,B,C,D



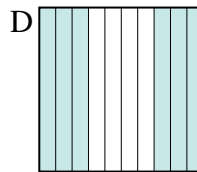
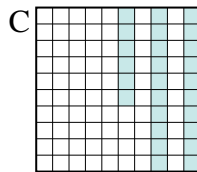
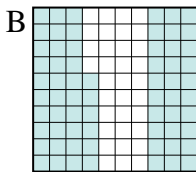
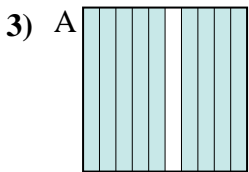
klein _____
groß _____

1. _____
2. _____



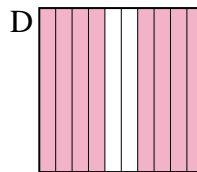
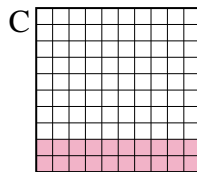
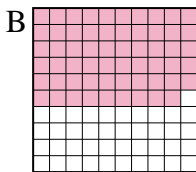
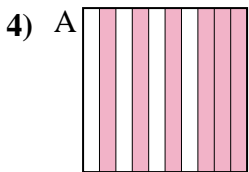
klein _____
groß _____

3. _____
4. _____




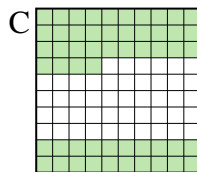
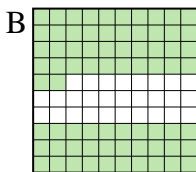
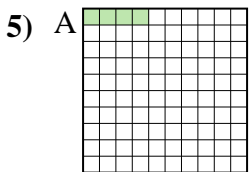
klein _____
groß _____

5. _____
6. _____

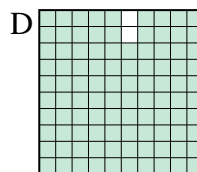
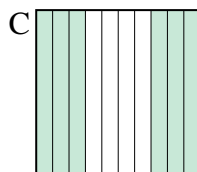

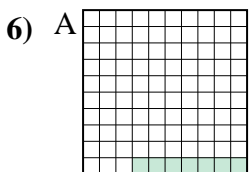


klein _____
groß _____

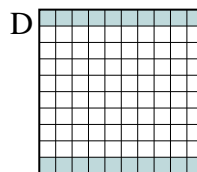
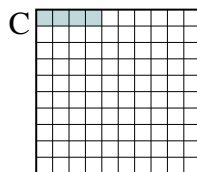

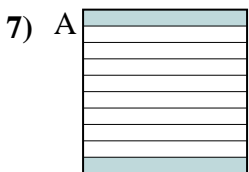
7. _____
8. _____




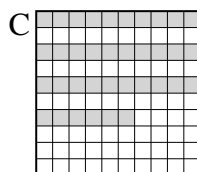
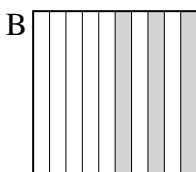
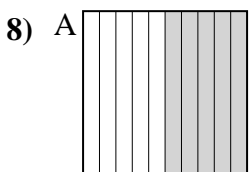
klein _____
groß _____



klein _____
groß _____



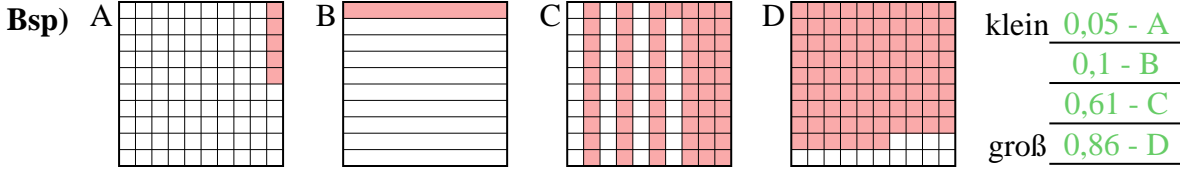
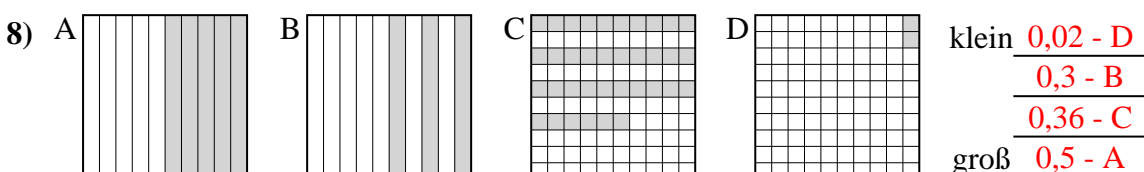
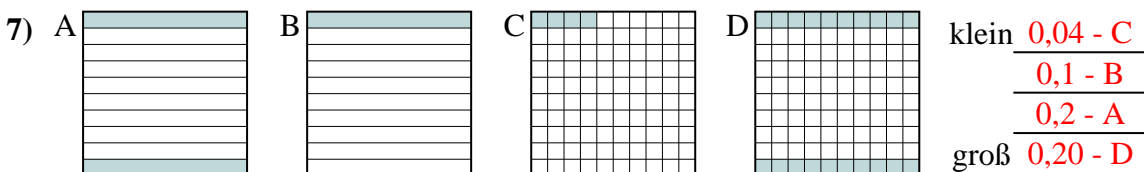
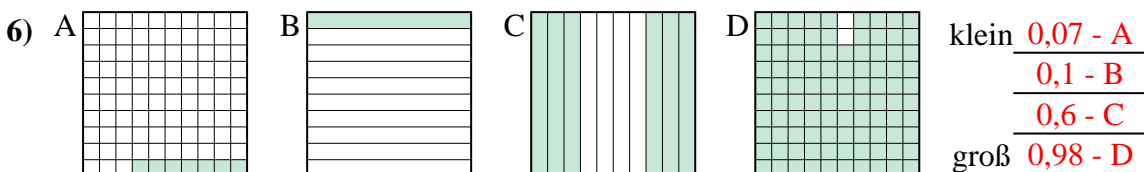
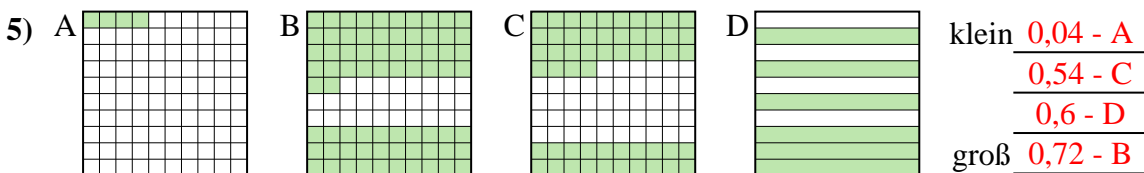
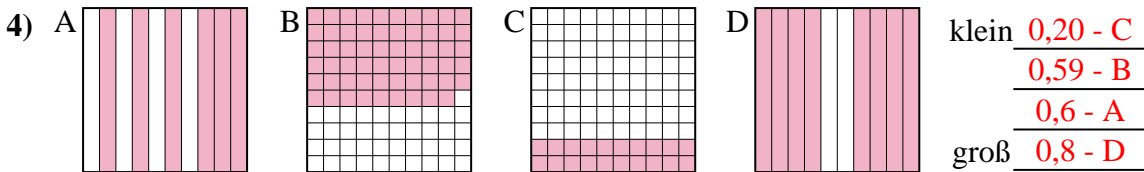
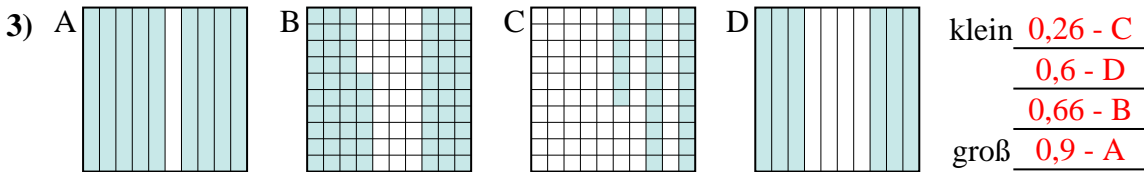
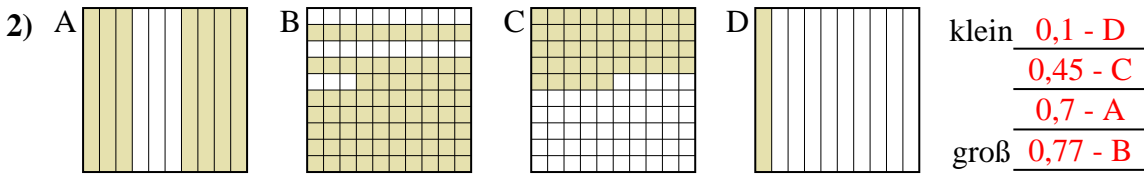
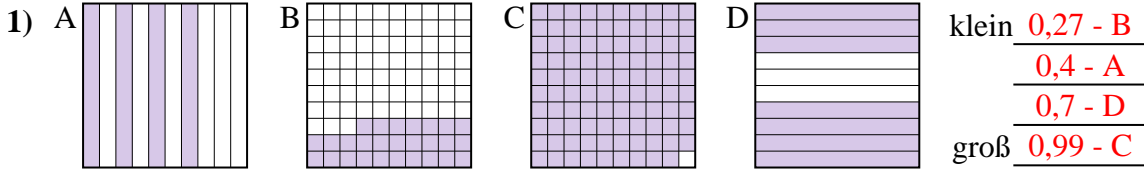
klein _____
groß _____



klein _____
groß _____



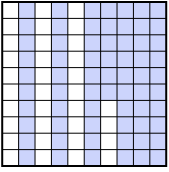
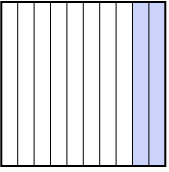


Ordne die folgenden Flächen der Größe nach (von der kleinsten Fläche zur größten) gemäß den Schattierungen.

**Antworten**Bsp. A,B,C,D1. B,A,D,C2. D,C,A,B3. C,D,B,A4. C,B,A,D5. A,C,D,B6. A,B,C,D7. C,B,A,D8. D,B,C,A



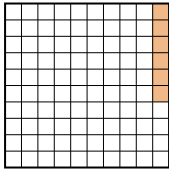
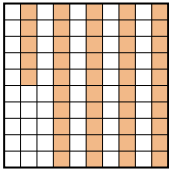
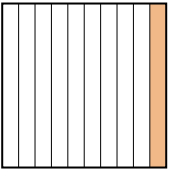
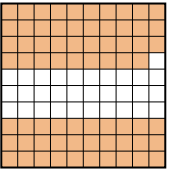
Ordne die folgenden Flächen der Größe nach (von der kleinsten Fläche zur größten) gemäß den Schattierungen.

Bsp) A  B  C  D 

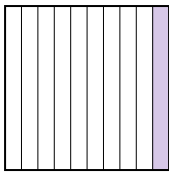
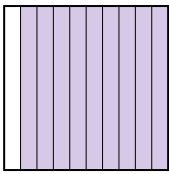
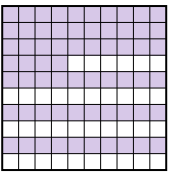
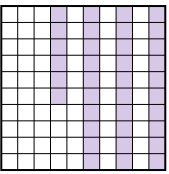
klein $0,2 - D$
 $0,5 - A$
 $0,66 - C$
 groß $0,7 - B$

Antworten



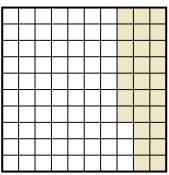
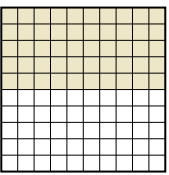
Bsp. D,A,C,B

1) A  B  C  D 

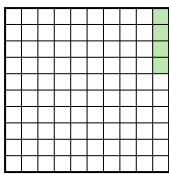
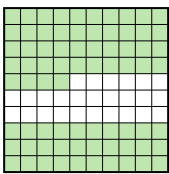

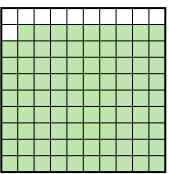
klein _____
 groß _____

2) A  B  C  D 


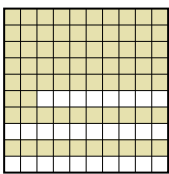
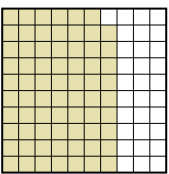
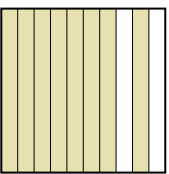
klein _____
 groß _____

3) A  B  C  D 

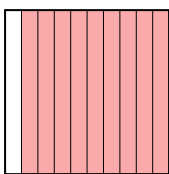

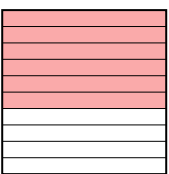
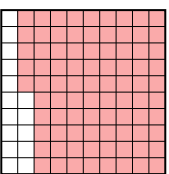
klein _____
 groß _____

4) A  B  C  D 

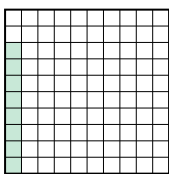
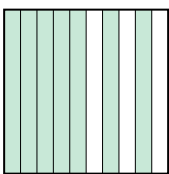
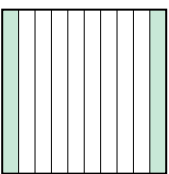
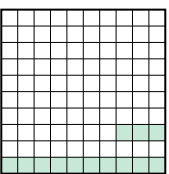
klein _____
 groß _____

5) A  B  C  D 

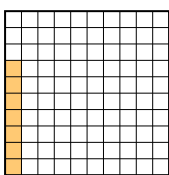
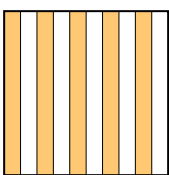
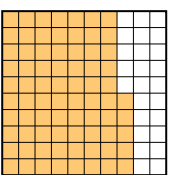
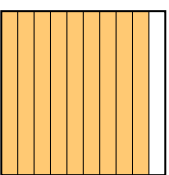
klein _____
 groß _____

6) A  B  C  D 

klein _____
 groß _____

7) A  B  C  D 

klein _____
 groß _____



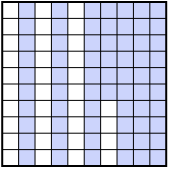
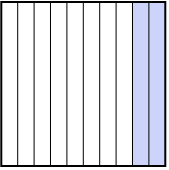
8) A  B  C  D 

klein _____
 groß _____

1. _____
2. _____
3. _____
4. _____
5. _____
6. _____
7. _____
8. _____

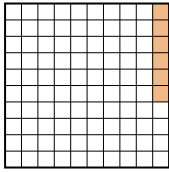
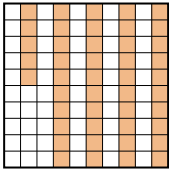
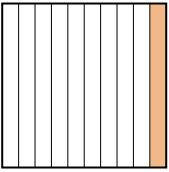
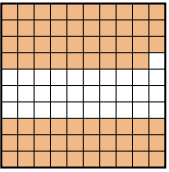


Ordne die folgenden Flächen der Größe nach (von der kleinsten Fläche zur größten) gemäß den Schattierungen.

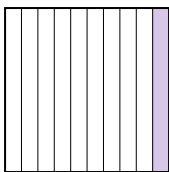

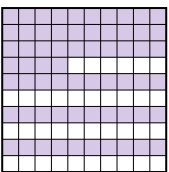
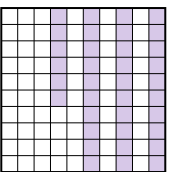
Bsp) A  B  C  D 

klein $\frac{0,2 - D}{0,5 - A}$
groß $\frac{0,66 - C}{0,7 - B}$



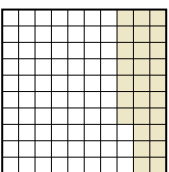
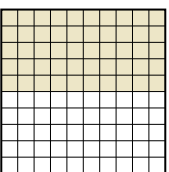
AntwortenBsp. D,A,C,B1. A,C,B,D2. A,D,C,B3. C,D,A,B4. A,C,B,D5. C,A,B,D6. B,C,D,A7. A,D,C,B8. A,B,C,D

1) A  B  C  D 

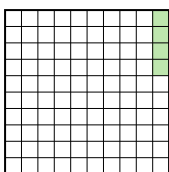
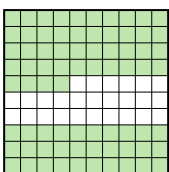

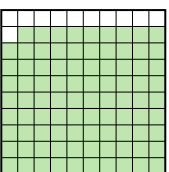
klein $\frac{0,06 - A}{0,1 - C}$
groß $\frac{0,45 - B}{0,69 - D}$

2) A  B  C  D 


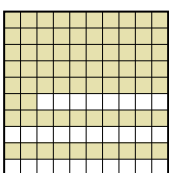
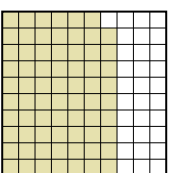
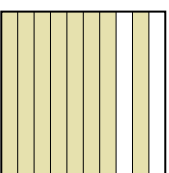
klein $\frac{0,1 - A}{0,36 - D}$
groß $\frac{0,64 - C}{0,9 - B}$

3) A  B  C  D 

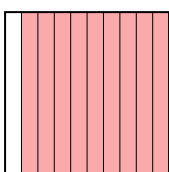

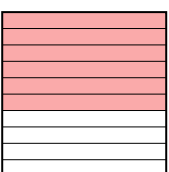
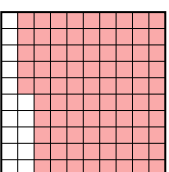
klein $\frac{0,27 - C}{0,50 - D}$
groß $\frac{0,6 - A}{0,9 - B}$

4) A  B  C  D 

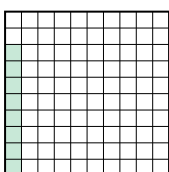
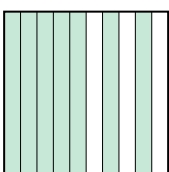
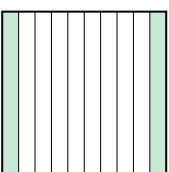
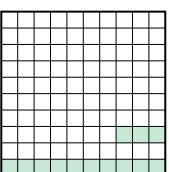
klein $\frac{0,04 - A}{0,6 - C}$
groß $\frac{0,74 - B}{0,89 - D}$

5) A  B  C  D 

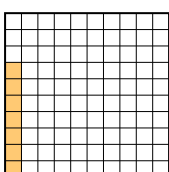
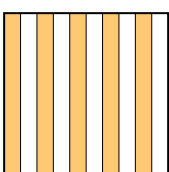
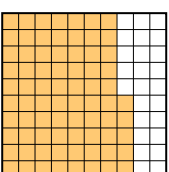
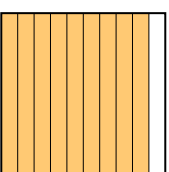
klein $\frac{0,69 - C}{0,7 - A}$
groß $\frac{0,72 - B}{0,8 - D}$

6) A  B  C  D 

klein $\frac{0,4 - B}{0,6 - C}$
groß $\frac{0,85 - D}{0,9 - A}$

7) A  B  C  D 

klein $\frac{0,08 - A}{0,13 - D}$
groß $\frac{0,2 - C}{0,7 - B}$

8) A  B  C  D 

klein $\frac{0,07 - A}{0,5 - B}$
groß $\frac{0,75 - C}{0,9 - D}$



Ordne die folgenden Flächen der Größe nach (von der kleinsten Fläche zur größten) gemäß den Schattierungen.

Bsp) A B C D

klein 0,5 - A
0,7 - B
0,8 - C
 groß 0,92 - D

Antworten

Bsp. A,B,C,D

1. _____

2. _____

3. _____

4. _____

5. _____

6. _____

7. _____

8. _____

1) A B C D

klein _____
 groß _____

2) A B C D

klein _____
 groß _____

3) A B C D

klein _____
 groß _____

4) A B C D

klein _____
 groß _____

5) A B C D

klein _____
 groß _____

6) A B C D

klein _____
 groß _____

7) A B C D

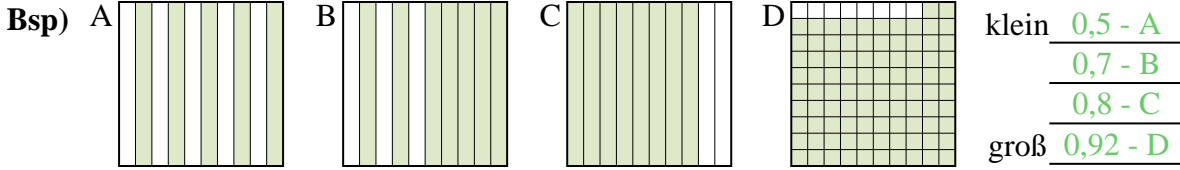
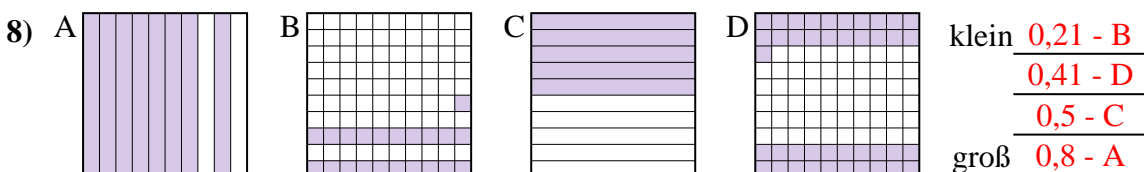
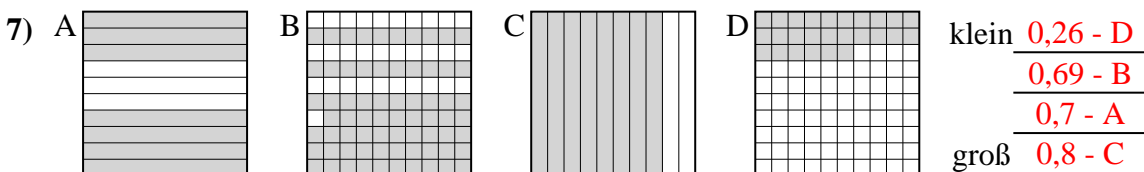
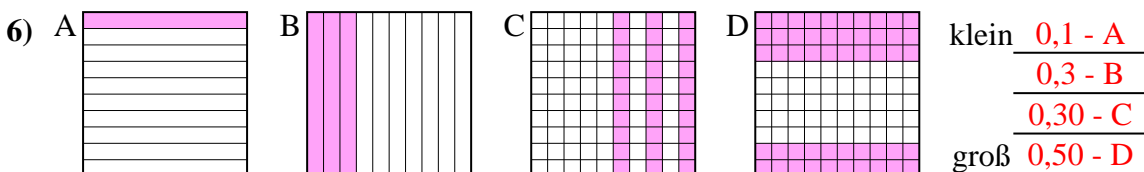
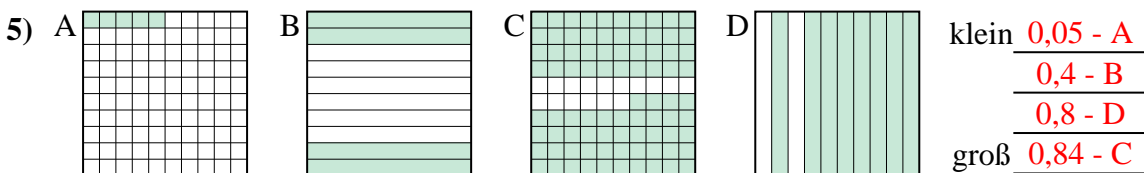
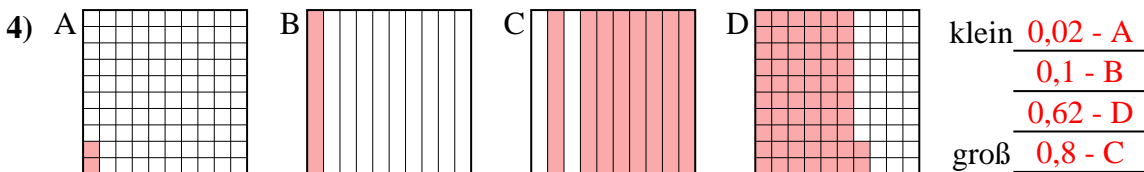
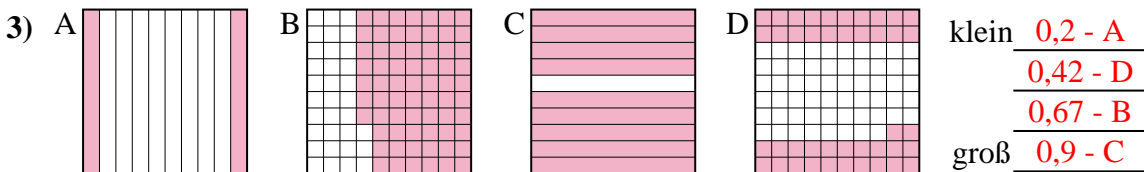
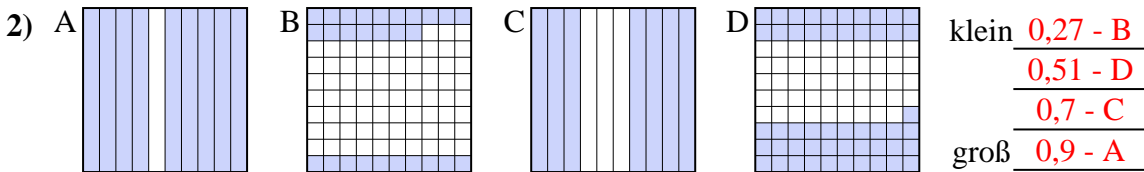
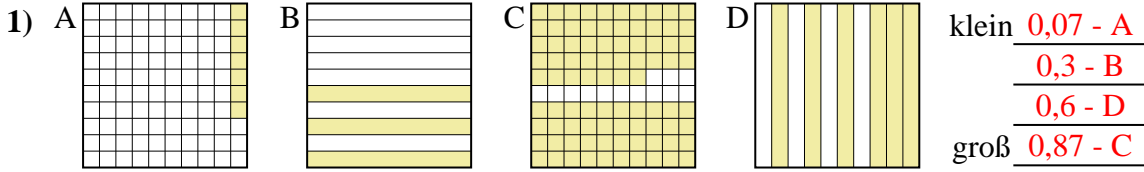
klein _____
 groß _____

8) A B C D

klein _____
 groß _____



Ordne die folgenden Flächen der Größe nach (von der kleinsten Fläche zur größten) gemäß den Schattierungen.

**Antworten**Bsp. A,B,C,D1. A,B,D,C2. B,D,C,A3. A,D,B,C4. A,B,D,C5. A,B,D,C6. A,B,C,D7. D,B,A,C8. B,D,C,A



Ordne die folgenden Flächen der Größe nach (von der kleinsten Fläche zur größten) gemäß den Schattierungen.

Bsp) A B C D

klein 0,05 - A
0,4 - D
0,9 - C
 groß 0,94 - B

Antworten

Bsp. A,D,C,B

1. _____
2. _____
3. _____
4. _____
5. _____
6. _____
7. _____
8. _____

1) A B C D

klein _____
 groß _____

2) A B C D

klein _____
 groß _____

3) A B C D

klein _____
 groß _____

4) A B C D

klein _____
 groß _____

5) A B C D

klein _____
 groß _____

6) A B C D

klein _____
 groß _____

7) A B C D

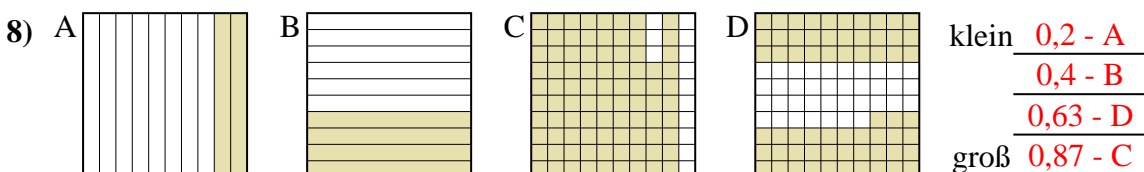
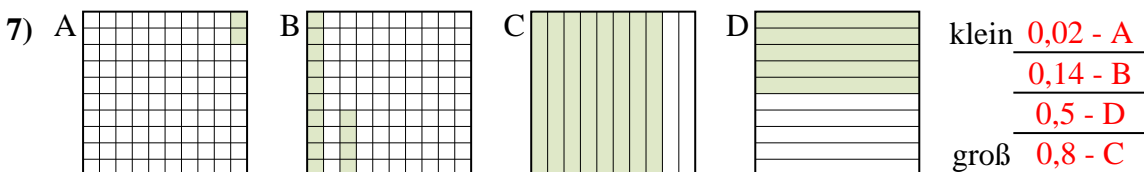
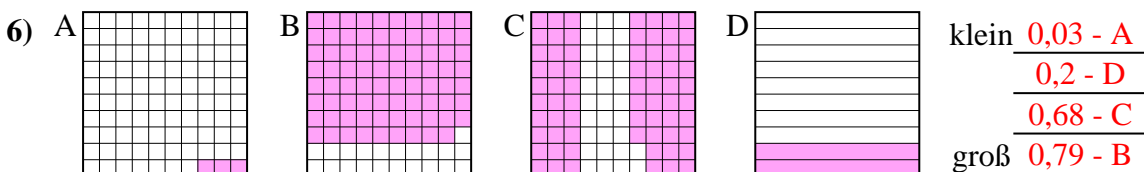
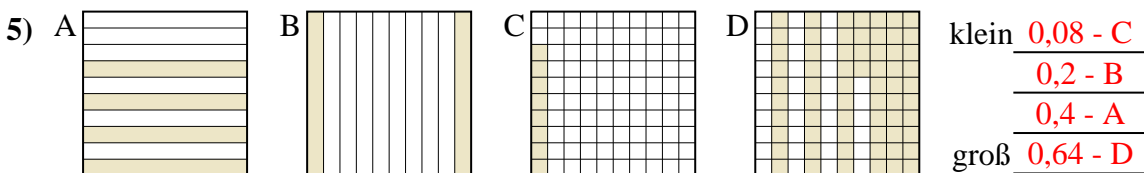
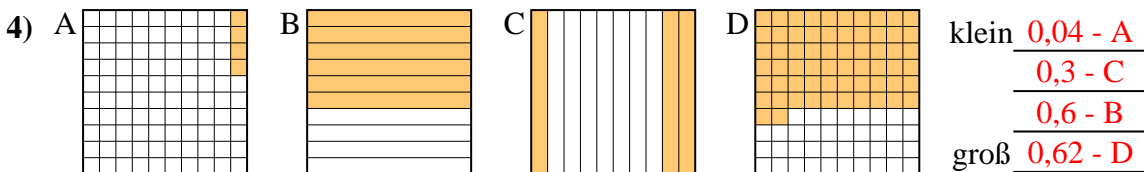
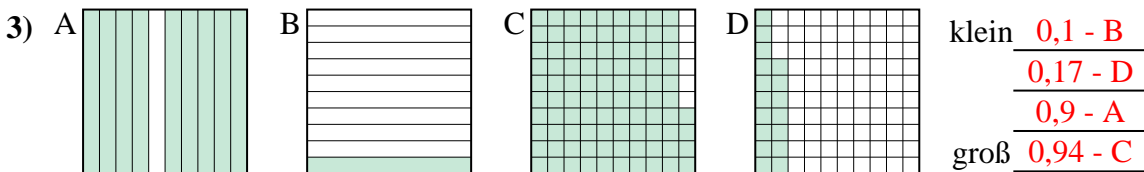
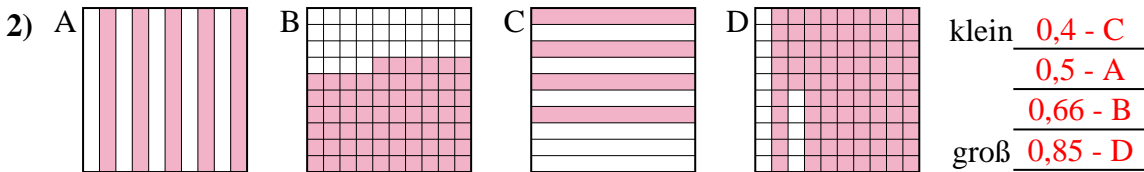
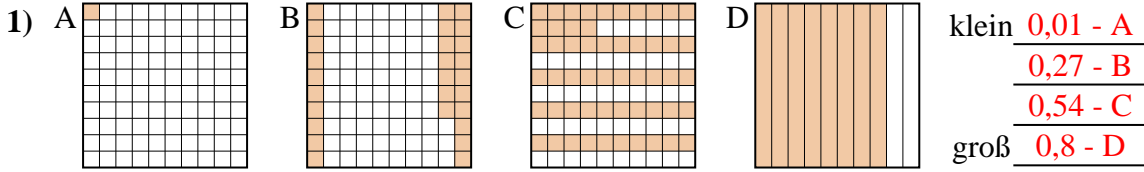
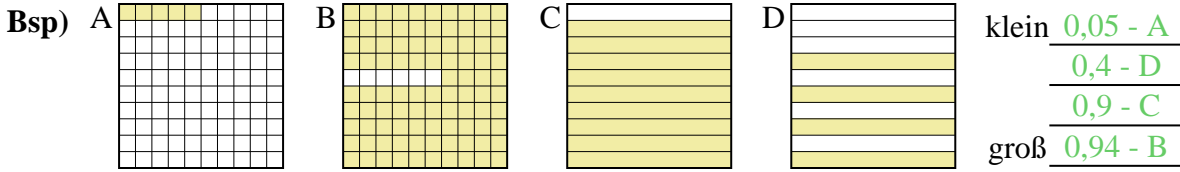
klein _____
 groß _____

8) A B C D

klein _____
 groß _____


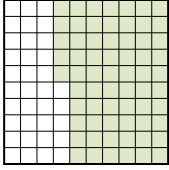

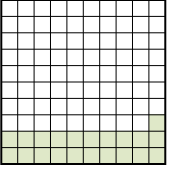


Ordne die folgenden Flächen der Größe nach (von der kleinsten Fläche zur größten) gemäß den Schattierungen.

**Antworten**Bsp. A,D,C,B1. A,B,C,D2. C,A,B,D3. B,D,A,C4. A,C,B,D5. C,B,A,D6. A,D,C,B7. A,B,D,C8. A,B,D,C



Ordne die folgenden Flächen der Größe nach (von der kleinsten Fläche zur größten) gemäß den Schattierungen.

Bsp) A  B  C  D 

klein 0,21 - D
0,65 - B
0,8 - A
 groß 0,9 - C

Antworten

Bsp. D,B,A,C

1. _____

2. _____

3. _____

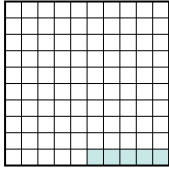
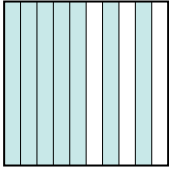
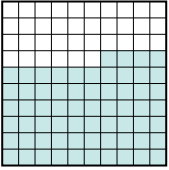

4. _____

5. _____

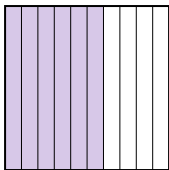
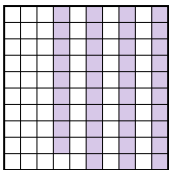
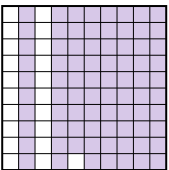

6. _____

7. _____

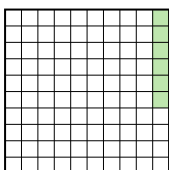
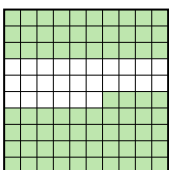
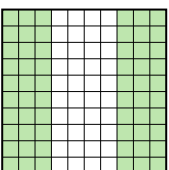

8. _____

1) A  B  C  D 

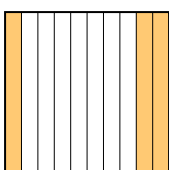
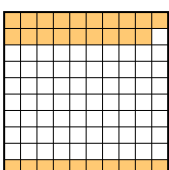
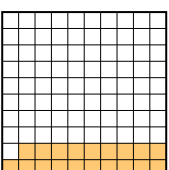

klein _____
 groß _____

2) A  B  C  D 

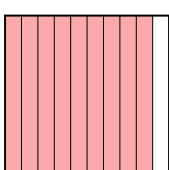
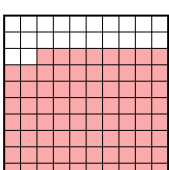
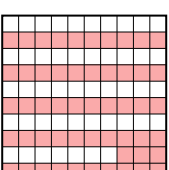

klein _____
 groß _____

3) A  B  C  D 

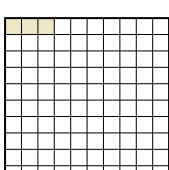


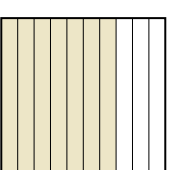
klein _____
 groß _____

4) A  B  C  D 

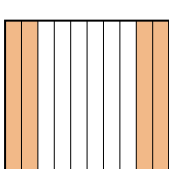

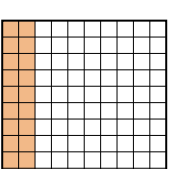
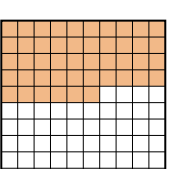
klein _____
 groß _____

5) A  B  C  D 

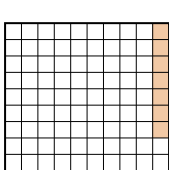
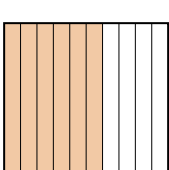
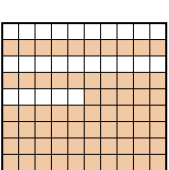
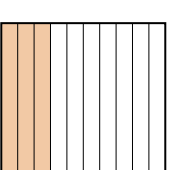
klein _____
 groß _____

6) A  B  C  D 

klein _____
 groß _____

7) A  B  C  D 

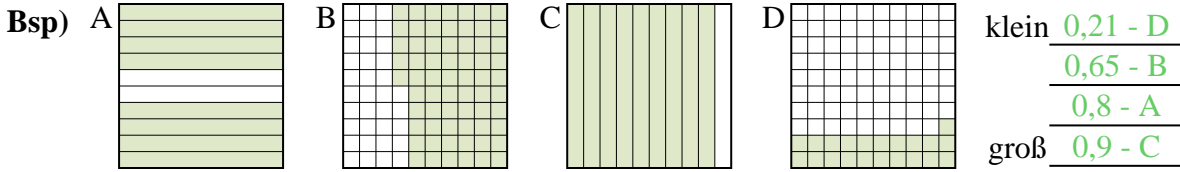
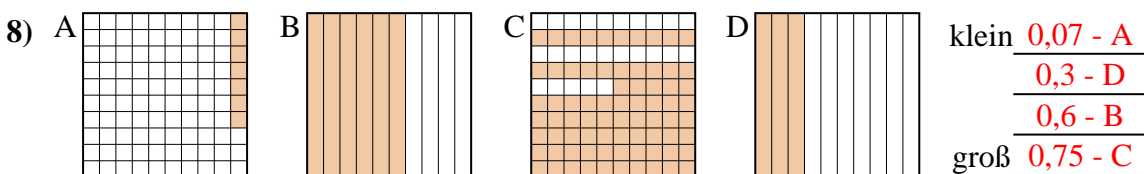
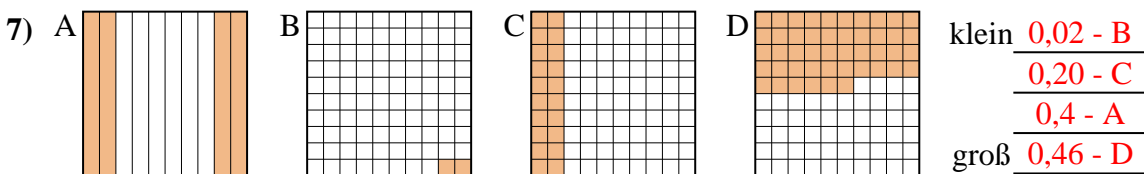

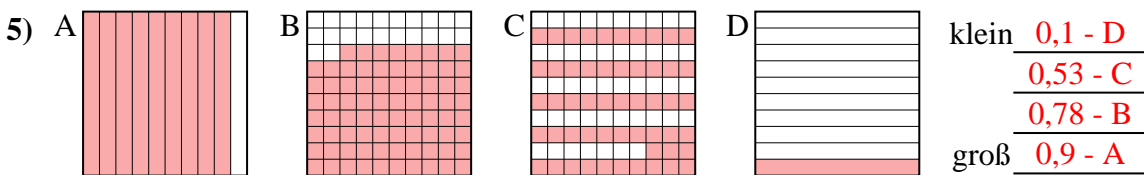
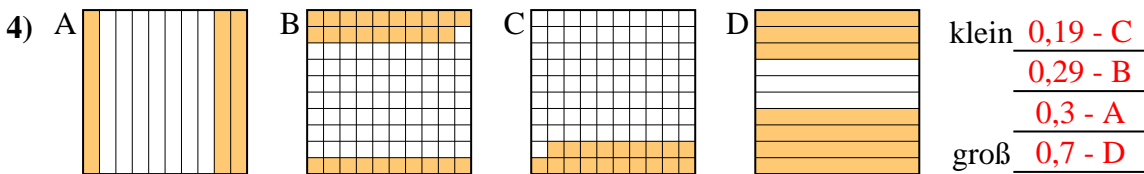
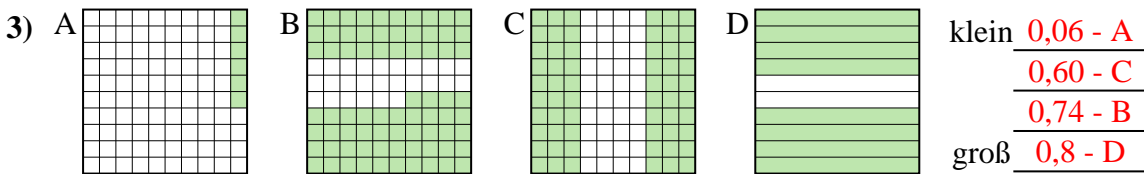
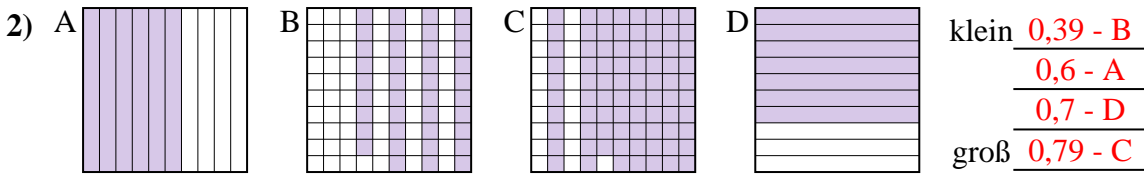
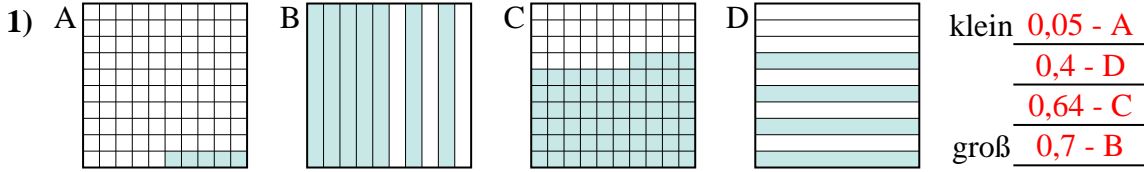
klein _____
 groß _____

8) A  B  C  D 

klein _____
 groß _____

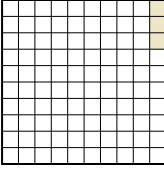

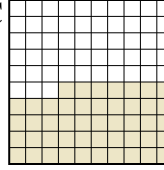



Ordne die folgenden Flächen der Größe nach (von der kleinsten Fläche zur größten) gemäß den Schattierungen.

**Antworten**Bsp. D,B,A,C1. A,D,C,B2. B,A,D,C3. A,C,B,D4. C,B,A,D5. D,C,B,A6. A,B,D,C7. B,C,A,D8. A,D,B,C



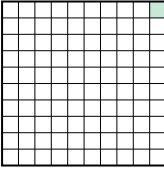


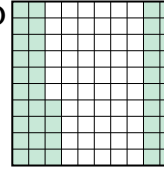
Ordne die folgenden Flächen der Größe nach (von der kleinsten Fläche zur größten) gemäß den Schattierungen.

Bsp) A  B  C  D 

klein 0,03 - A
0,47 - C
0,6 - D
 groß 0,7 - B

Antworten

Bsp. A,C,D,B

1) A  B  C  D 

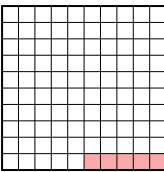
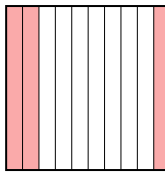

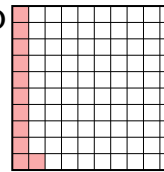
klein _____

 groß _____

1. _____

2. _____

3. _____

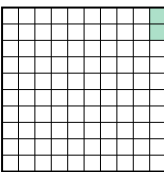


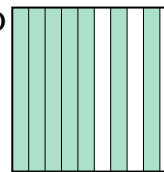
2) A  B  C  D 

klein _____

 groß _____

4. _____

5. _____

3) A  B  C  D 

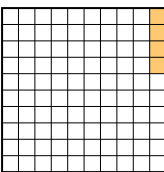
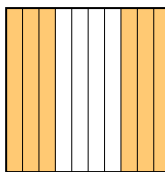
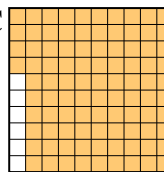

klein _____

 groß _____

6. _____

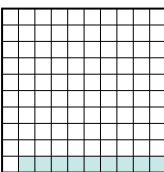
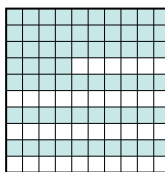

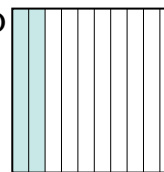
7. _____

8. _____

4) A  B  C  D 

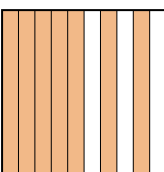
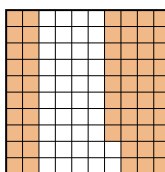
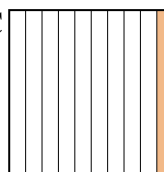
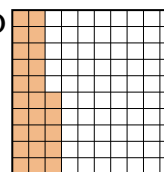
klein _____

 groß _____

5) A  B  C  D 

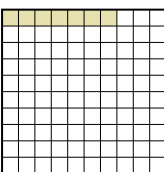

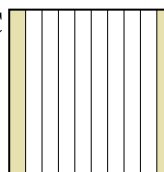
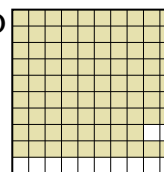
klein _____

 groß _____

6) A  B  C  D 


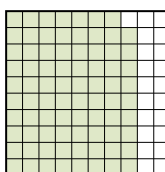
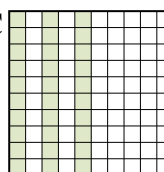

klein _____

 groß _____

7) A  B  C  D 

klein _____

 groß _____

8) A  B  C  D 

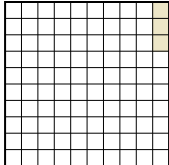

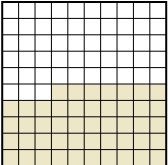

klein _____

 groß _____

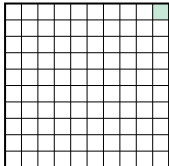
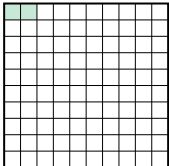

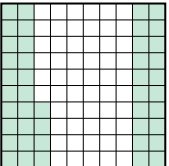


Ordne die folgenden Flächen der Größe nach (von der kleinsten Fläche zur größten)

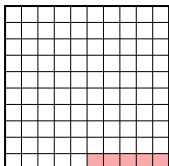
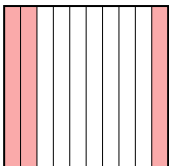

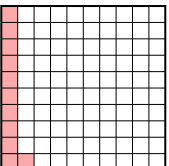
gemäß den Schattierungen.

Bsp) A  B  C  D 





klein $\frac{0,03 - A}{0,47 - C}$
groß $\frac{0,6 - D}{0,7 - B}$

1) A  B  C  D 

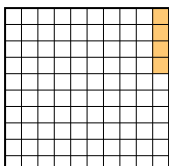
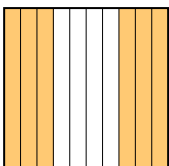
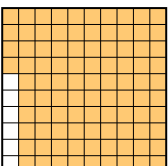

klein $\frac{0,01 - A}{0,02 - B}$
groß $\frac{0,44 - D}{0,5 - C}$

2) A  B  C  D 


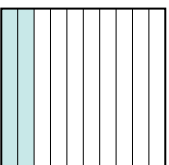
klein $\frac{0,05 - A}{0,11 - D}$
groß $\frac{0,3 - B}{0,4 - C}$

3) A  B  C  D 

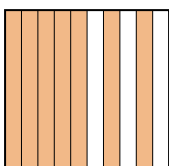
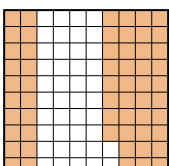
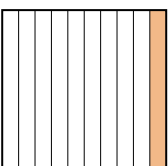
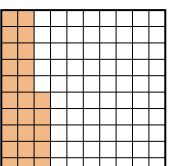
klein $\frac{0,02 - A}{0,3 - B}$
groß $\frac{0,7 - D}{0,9 - C}$

4) A  B  C  D 

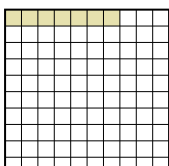

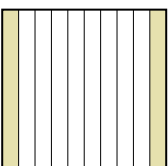
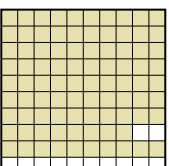
klein $\frac{0,04 - A}{0,6 - B}$
groß $\frac{0,7 - D}{0,94 - C}$

5) A  B  C  D 


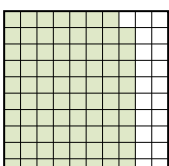
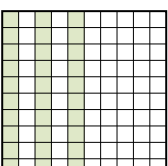
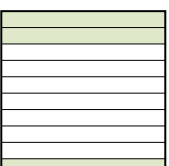
klein $\frac{0,09 - A}{0,2 - D}$
groß $\frac{0,64 - B}{0,8 - C}$

6) A  B  C  D 

klein $\frac{0,1 - C}{0,25 - D}$
groß $\frac{0,58 - B}{0,7 - A}$

7) A  B  C  D 

klein $\frac{0,07 - A}{0,2 - C}$
groß $\frac{0,5 - B}{0,88 - D}$

8) A  B  C  D 

klein $\frac{0,3 - D}{0,30 - C}$
groß $\frac{0,5 - A}{0,79 - B}$

AntwortenBsp. A,C,D,B1. A,B,D,C2. A,D,B,C3. A,B,D,C4. A,B,D,C5. A,D,B,C6. C,D,B,A7. A,C,B,D8. D,C,A,B