
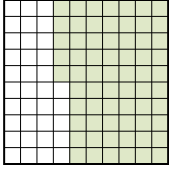

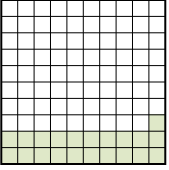




Ordne die folgenden Flächen der Größe nach (von der kleinsten Fläche zur größten) gemäß den Schattierungen.

Bsp) A  B  C  D 

klein 0,21 - D  
0,65 - B  
0,8 - A  
 groß 0,9 - C

**Antworten**

Bsp. D,B,A,C

1. \_\_\_\_\_

2. \_\_\_\_\_

3. \_\_\_\_\_

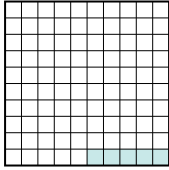
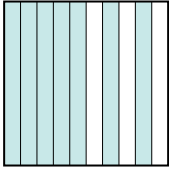
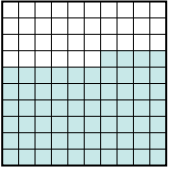

4. \_\_\_\_\_

5. \_\_\_\_\_

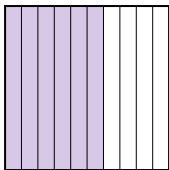
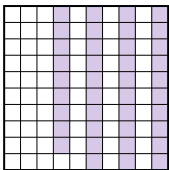
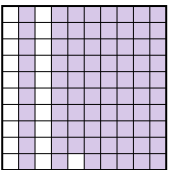

6. \_\_\_\_\_

7. \_\_\_\_\_

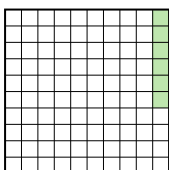
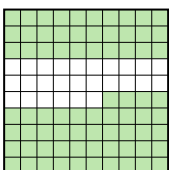
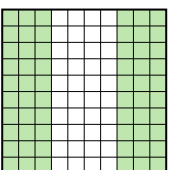

8. \_\_\_\_\_

1) A  B  C  D 

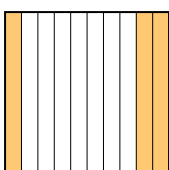
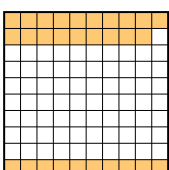
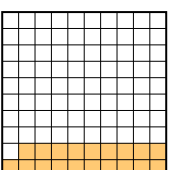

klein \_\_\_\_\_  
 groß \_\_\_\_\_

2) A  B  C  D 

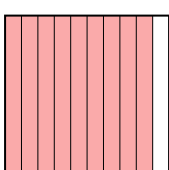
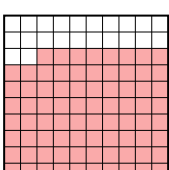
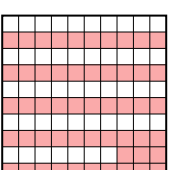

klein \_\_\_\_\_  
 groß \_\_\_\_\_

3) A  B  C  D 

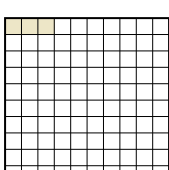


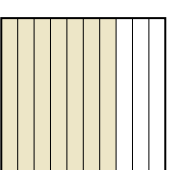
klein \_\_\_\_\_  
 groß \_\_\_\_\_

4) A  B  C  D 

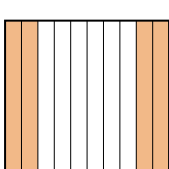

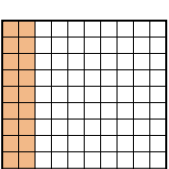
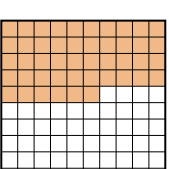
klein \_\_\_\_\_  
 groß \_\_\_\_\_

5) A  B  C  D 

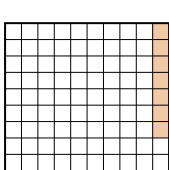
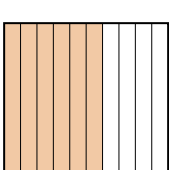
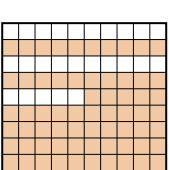
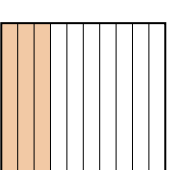
klein \_\_\_\_\_  
 groß \_\_\_\_\_

6) A  B  C  D 

klein \_\_\_\_\_  
 groß \_\_\_\_\_

7) A  B  C  D 

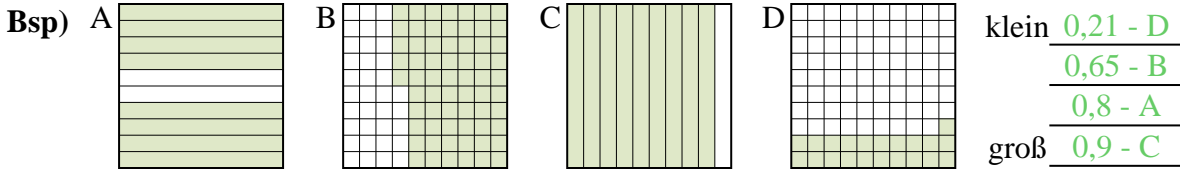
klein \_\_\_\_\_  
 groß \_\_\_\_\_

8) A  B  C  D 

klein \_\_\_\_\_  
 groß \_\_\_\_\_



Ordne die folgenden Flächen der Größe nach (von der kleinsten Fläche zur größten) gemäß den Schattierungen.

**Antworten**Bsp. D,B,A,C1. A,D,C,B2. B,A,D,C3. A,C,B,D4. C,B,A,D5. D,C,B,A6. A,B,D,C7. B,C,A,D8. A,D,B,C