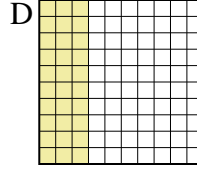
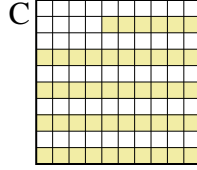
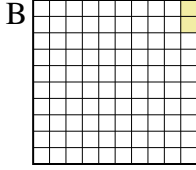
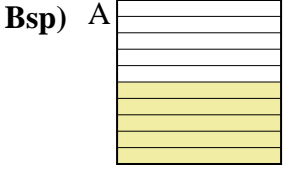




Ordne die folgenden Flächen der Größe nach (von der kleinsten Fläche zur größten) gemäß den Schattierungen.

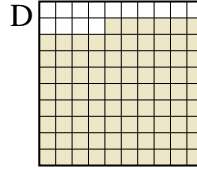
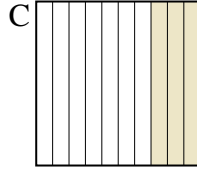
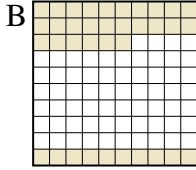
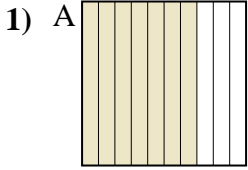


klein 0,02 - B
0,30 - D
0,46 - C
groß 0,5 - A

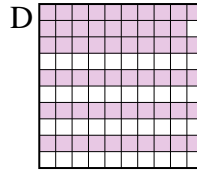
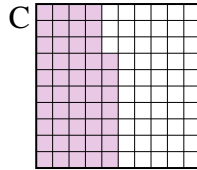
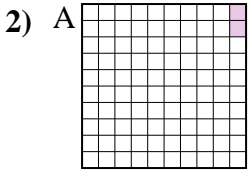
Antworten

Bsp. B,D,C,A

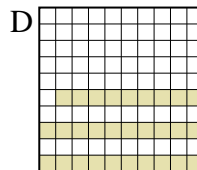

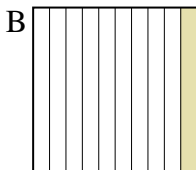
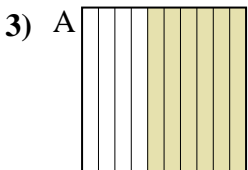
- 1. _____
- 2. _____
- 3. _____
- 4. _____
- 5. _____
- 6. _____
- 7. _____
- 8. _____



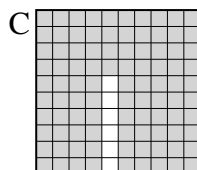

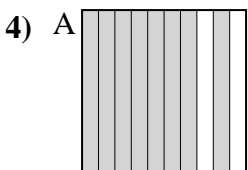
klein _____
groß _____



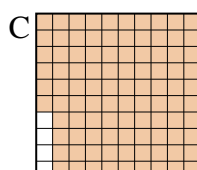
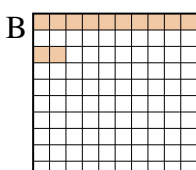
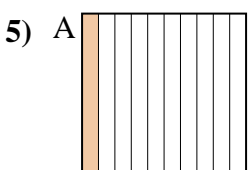
klein _____
groß _____



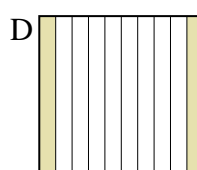
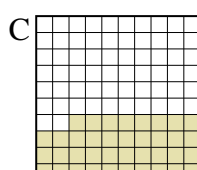
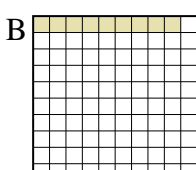
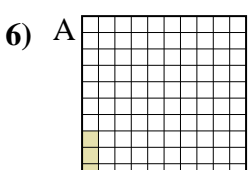
klein _____
groß _____



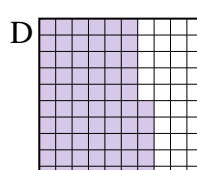
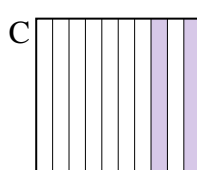
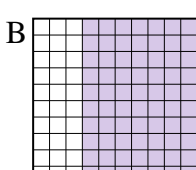
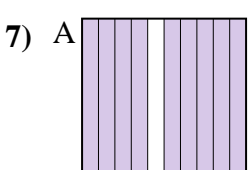
klein _____
groß _____



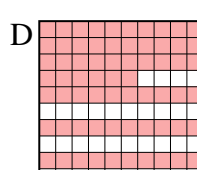

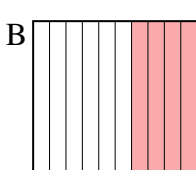
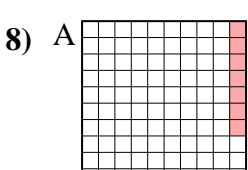
klein _____
groß _____



klein _____
groß _____



klein _____
groß _____



klein _____
groß _____



Ordne die folgenden Flächen der Größe nach (von der kleinsten Fläche zur größten) gemäß den Schattierungen.

Bsp) A B C D klein $\frac{0,02 - B}{0,30 - D}$
groß $\frac{0,46 - C}{0,5 - A}$

1) A B C D klein $\frac{0,3 - C}{0,36 - B}$
groß $\frac{0,7 - A}{0,86 - D}$

2) A B C D klein $\frac{0,02 - A}{0,47 - C}$
groß $\frac{0,59 - D}{0,6 - B}$

3) A B C D klein $\frac{0,1 - B}{0,29 - D}$
groß $\frac{0,6 - A}{0,8 - C}$

4) A B C D klein $\frac{0,8 - A}{0,9 - D}$
groß $\frac{0,90 - B}{0,94 - C}$

5) A B C D klein $\frac{0,1 - A}{0,12 - B}$
groß $\frac{0,2 - D}{0,96 - C}$

6) A B C D klein $\frac{0,03 - A}{0,09 - B}$
groß $\frac{0,2 - D}{0,38 - C}$

7) A B C D klein $\frac{0,2 - C}{0,65 - D}$
groß $\frac{0,70 - B}{0,9 - A}$

8) A B C D klein $\frac{0,07 - A}{0,1 - C}$
groß $\frac{0,4 - B}{0,66 - D}$

AntwortenBsp. B,D,C,A1. C,B,A,D2. A,C,D,B3. B,D,A,C4. A,D,B,C5. A,B,D,C6. A,B,D,C7. C,D,B,A8. A,C,B,D