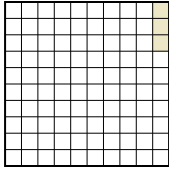

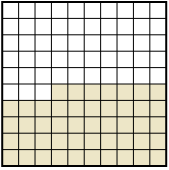





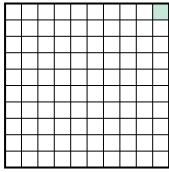
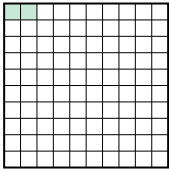

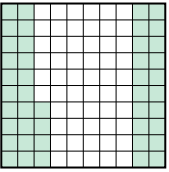
Ordne die folgenden Flächen der Größe nach (von der kleinsten Fläche zur größten) gemäß den Schattierungen.

Bsp) A  B  C  D 

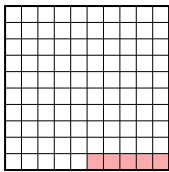
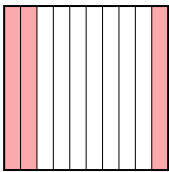

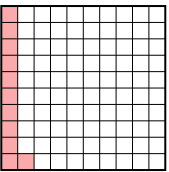
klein 0,03 - A
0,47 - C
0,6 - D
 groß 0,7 - B

Antworten




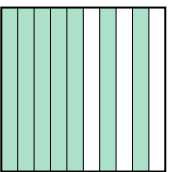
Bsp. A,C,D,B

1) A  B  C  D 

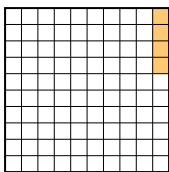
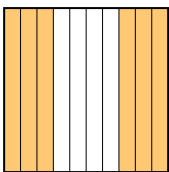
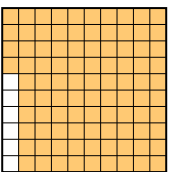

klein _____
 groß _____

2) A  B  C  D 

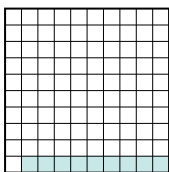
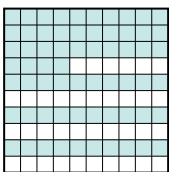

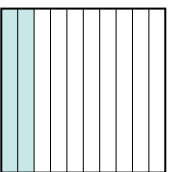
klein _____
 groß _____

3) A  B  C  D 

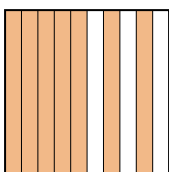
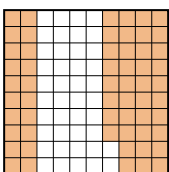
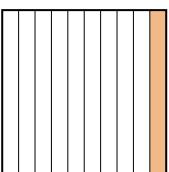
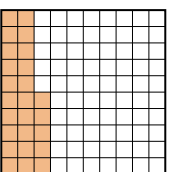
klein _____
 groß _____

4) A  B  C  D 

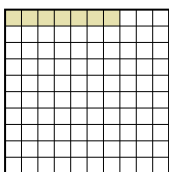

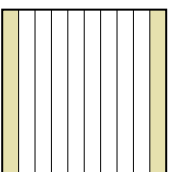
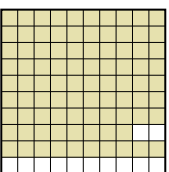
klein _____
 groß _____

5) A  B  C  D 


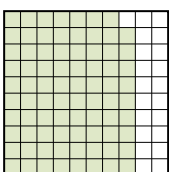
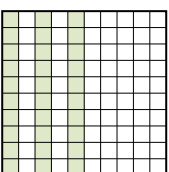
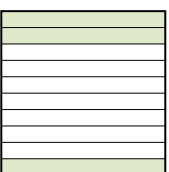
klein _____
 groß _____

6) A  B  C  D 

klein _____
 groß _____

7) A  B  C  D 

klein _____
 groß _____

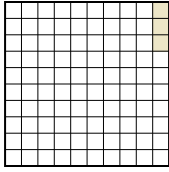

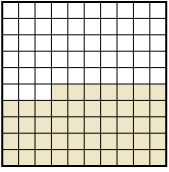

8) A  B  C  D 

klein _____
 groß _____

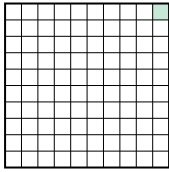
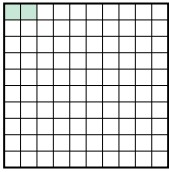

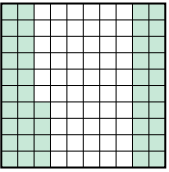
1. _____
2. _____
3. _____
4. _____
5. _____
6. _____
7. _____
8. _____



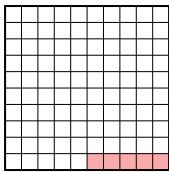
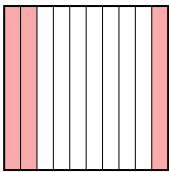

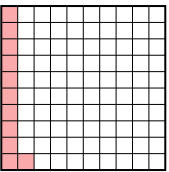
Ordne die folgenden Flächen der Größe nach (von der kleinsten Fläche zur größten) gemäß den Schattierungen.

Bsp) A  B  C  D 




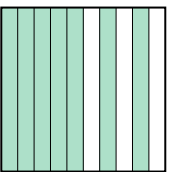
klein $\frac{0,03 - A}{0,47 - C}$
groß $\frac{0,6 - D}{0,7 - B}$

1) A  B  C  D 

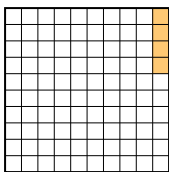
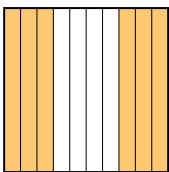
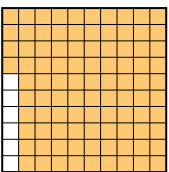

klein $\frac{0,01 - A}{0,02 - B}$
groß $\frac{0,44 - D}{0,5 - C}$

2) A  B  C  D 

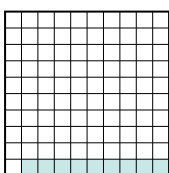
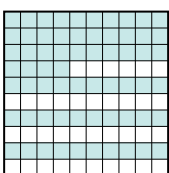

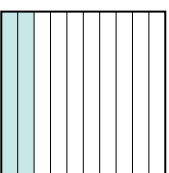
klein $\frac{0,05 - A}{0,11 - D}$
groß $\frac{0,3 - B}{0,4 - C}$

3) A  B  C  D 

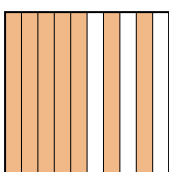
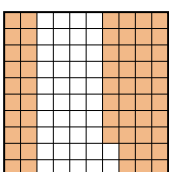
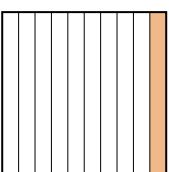
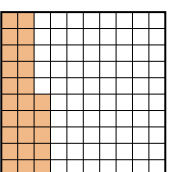
klein $\frac{0,02 - A}{0,3 - B}$
groß $\frac{0,7 - D}{0,9 - C}$

4) A  B  C  D 

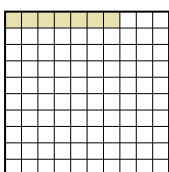

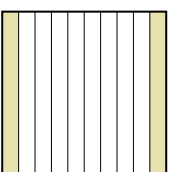
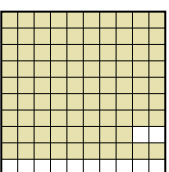
klein $\frac{0,04 - A}{0,6 - B}$
groß $\frac{0,7 - D}{0,94 - C}$

5) A  B  C  D 


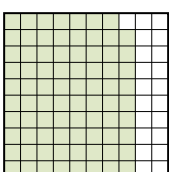
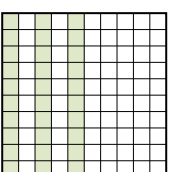

klein $\frac{0,09 - A}{0,2 - D}$
groß $\frac{0,64 - B}{0,8 - C}$

6) A  B  C  D 

klein $\frac{0,1 - C}{0,25 - D}$
groß $\frac{0,58 - B}{0,7 - A}$

7) A  B  C  D 

klein $\frac{0,07 - A}{0,2 - C}$
groß $\frac{0,5 - B}{0,88 - D}$

8) A  B  C  D 

klein $\frac{0,3 - D}{0,30 - C}$
groß $\frac{0,5 - A}{0,79 - B}$

AntwortenBsp. A,C,D,B1. A,B,D,C2. A,D,B,C3. A,B,D,C4. A,B,D,C5. A,D,B,C6. C,D,B,A7. A,C,B,D8. D,C,A,B