

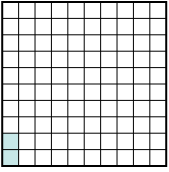
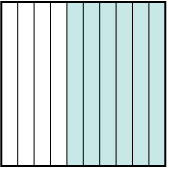




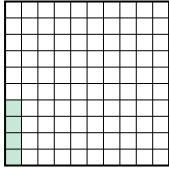

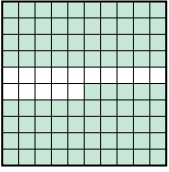
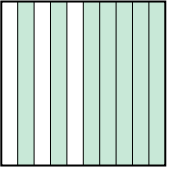
Ordne die folgenden Flächen der Größe nach (von der kleinsten Fläche zur größten) gemäß den Schattierungen.

Bsp) A  B  C  D 

klein  $\frac{0,02 - C}{0,5 - A}$   
 groß  $\frac{0,6 - D}{0,9 - B}$

Antworten

Bsp. C,A,D,B

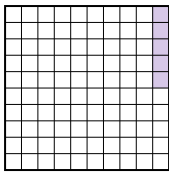

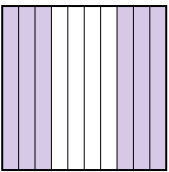
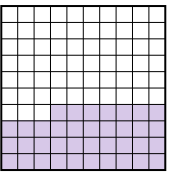
1) A  B  C  D 

klein \_\_\_\_\_  
 groß \_\_\_\_\_

1. \_\_\_\_\_

2. \_\_\_\_\_

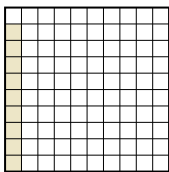
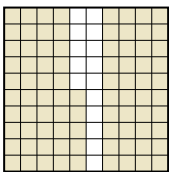
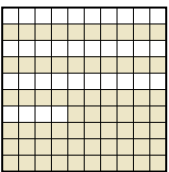

3. \_\_\_\_\_

2) A  B  C  D 

klein \_\_\_\_\_  
 groß \_\_\_\_\_

4. \_\_\_\_\_

5. \_\_\_\_\_


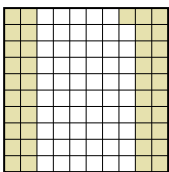
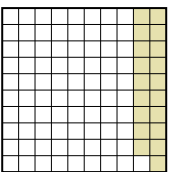
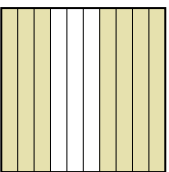
3) A  B  C  D 

klein \_\_\_\_\_  
 groß \_\_\_\_\_

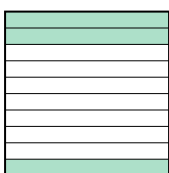

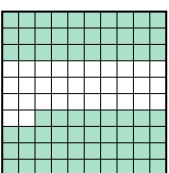
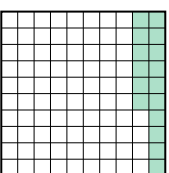
6. \_\_\_\_\_

7. \_\_\_\_\_


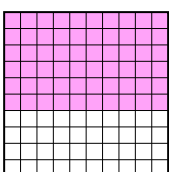

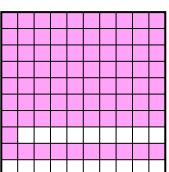
8. \_\_\_\_\_

4) A  B  C  D 

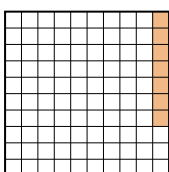
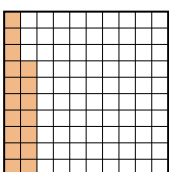
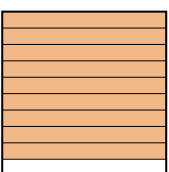
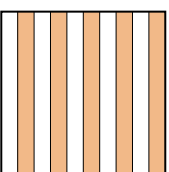
klein \_\_\_\_\_  
 groß \_\_\_\_\_

5) A  B  C  D 


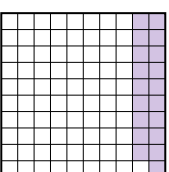
klein \_\_\_\_\_  
 groß \_\_\_\_\_

6) A  B  C  D 

klein \_\_\_\_\_  
 groß \_\_\_\_\_

7) A  B  C  D 



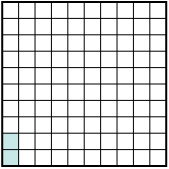
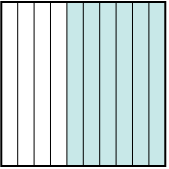
klein \_\_\_\_\_  
 groß \_\_\_\_\_

8) A  B  C  D 

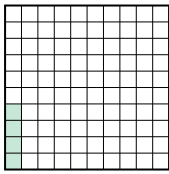

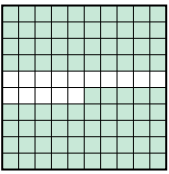
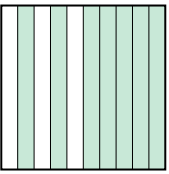
klein \_\_\_\_\_  
 groß \_\_\_\_\_



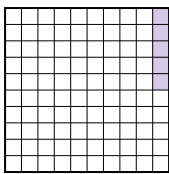

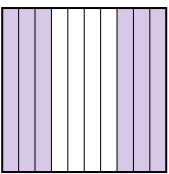
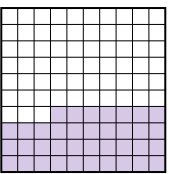
Ordne die folgenden Flächen der Größe nach (von der kleinsten Fläche zur größten) gemäß den Schattierungen.

Bsp) A  B  C  D 

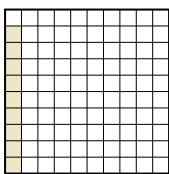
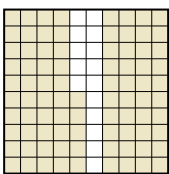
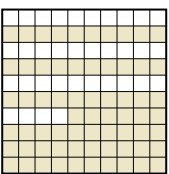

klein  $\frac{0,02 - C}{0,5 - A}$   
groß  $\frac{0,6 - D}{0,9 - B}$

1) A  B  C  D 


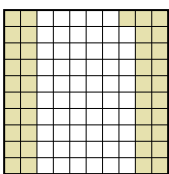
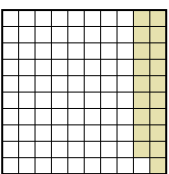
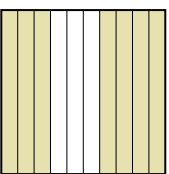
klein  $\frac{0,04 - A}{0,7 - D}$   
groß  $\frac{0,8 - B}{0,85 - C}$

2) A  B  C  D 

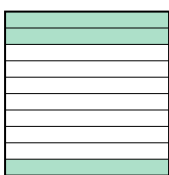

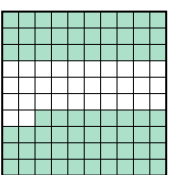
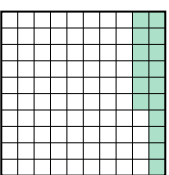
klein  $\frac{0,05 - A}{0,37 - D}$   
groß  $\frac{0,6 - C}{0,95 - B}$

3) A  B  C  D 


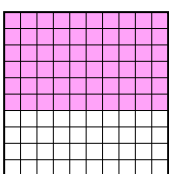

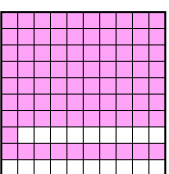
klein  $\frac{0,09 - A}{0,66 - C}$   
groß  $\frac{0,8 - D}{0,85 - B}$

4) A  B  C  D 

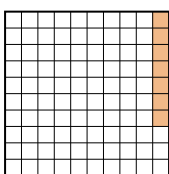
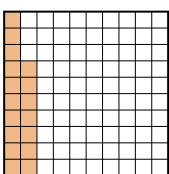
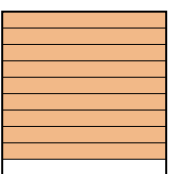
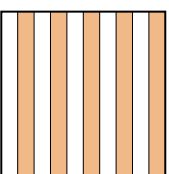
klein  $\frac{0,19 - C}{0,4 - A}$   
groß  $\frac{0,41 - B}{0,7 - D}$

5) A  B  C  D 


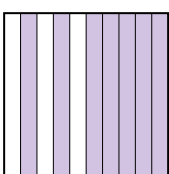

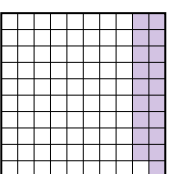
klein  $\frac{0,1 - B}{0,16 - D}$   
groß  $\frac{0,3 - A}{0,68 - C}$

6) A  B  C  D 

klein  $\frac{0,02 - A}{0,60 - B}$   
groß  $\frac{0,8 - C}{0,81 - D}$

7) A  B  C  D 

klein  $\frac{0,07 - A}{0,17 - B}$   
groß  $\frac{0,5 - D}{0,9 - C}$

8) A  B  C  D 

klein  $\frac{0,19 - D}{0,3 - C}$   
groß  $\frac{0,6 - A}{0,7 - B}$

**Antworten**Bsp. C,A,D,B1. A,D,B,C2. A,D,C,B3. A,C,D,B4. C,A,B,D5. B,D,A,C6. A,B,C,D7. A,B,D,C8. D,C,A,B