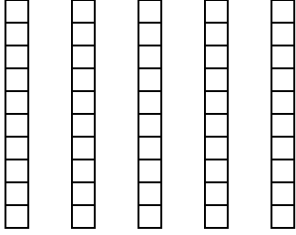


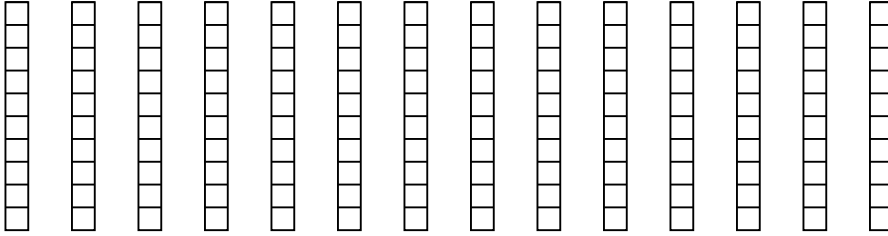


Wende die visuelle Methode an um jede Aufgabe zu lösen.

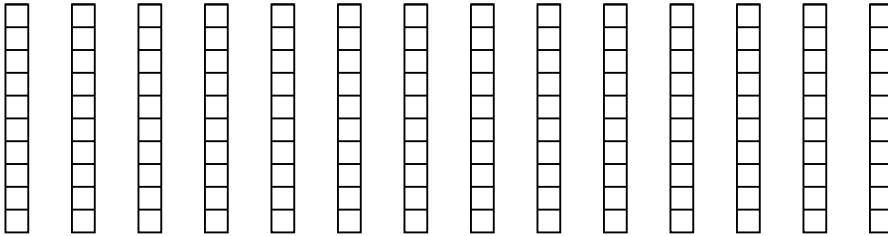
1) $5 \cdot 0,5 =$



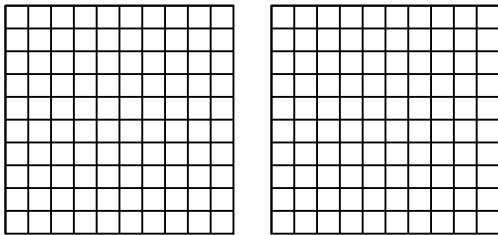
2) $14 \cdot 0,6 =$



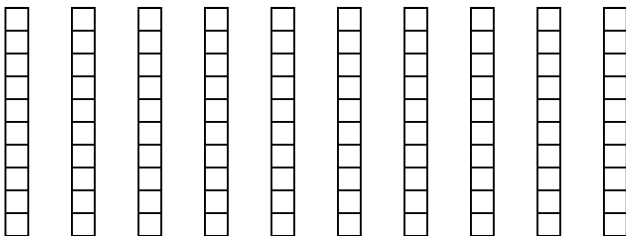
3) $14 \cdot 0,2 =$




4) $2 \cdot 0,78 =$



5) $10 \cdot 0,7 =$



6) $3 \cdot 0,48 =$



Antworten

1. _____

2. _____

3. _____

4. _____

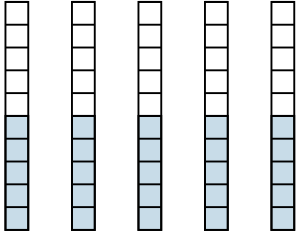
5. _____

6. _____

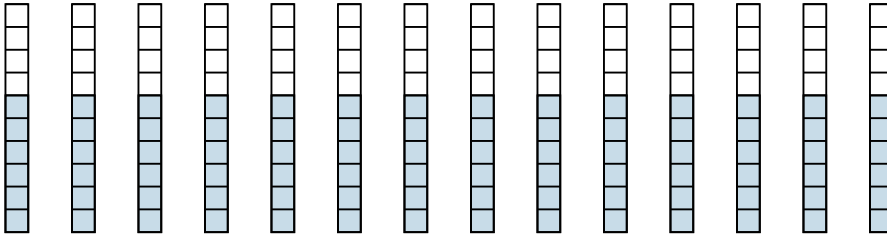


Wende die visuelle Methode an um jede Aufgabe zu lösen.

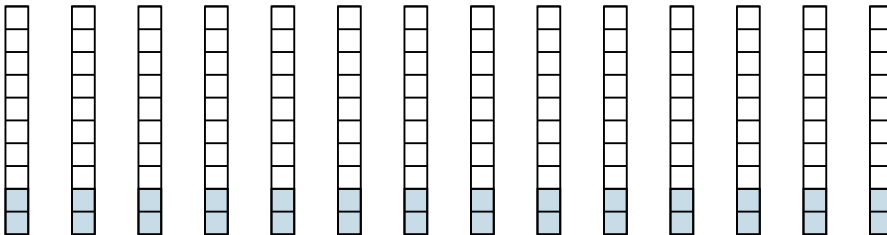
1) $5 \cdot 0,5 =$



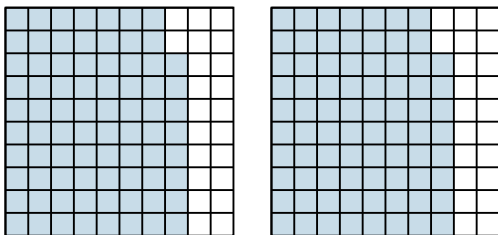
2) $14 \cdot 0,6 =$



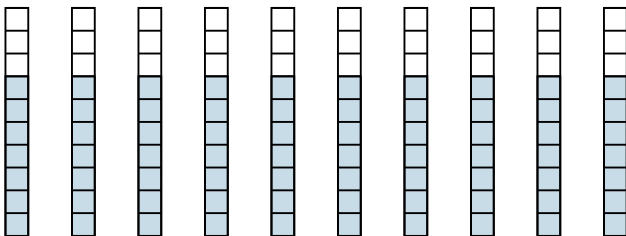
3) $14 \cdot 0,2 =$



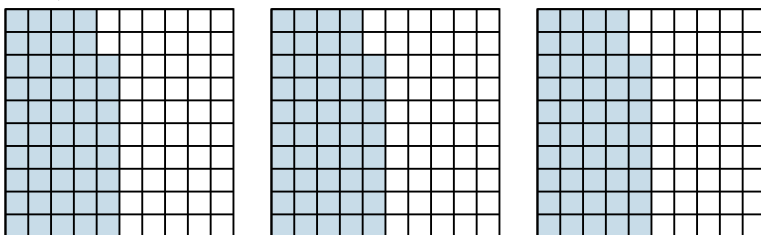
4) $2 \cdot 0,78 =$



5) $10 \cdot 0,7 =$



6) $3 \cdot 0,48 =$

**Antworten**

1. $\frac{25}{10} = 2,5$

2. $\frac{84}{10} = 8,4$

3. $\frac{28}{10} = 2,8$

4. $\frac{156}{100} = 1,56$

5. $\frac{70}{10} = 7$

6. $\frac{144}{100} = 1,44$