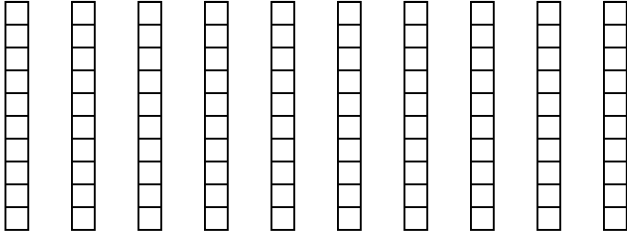


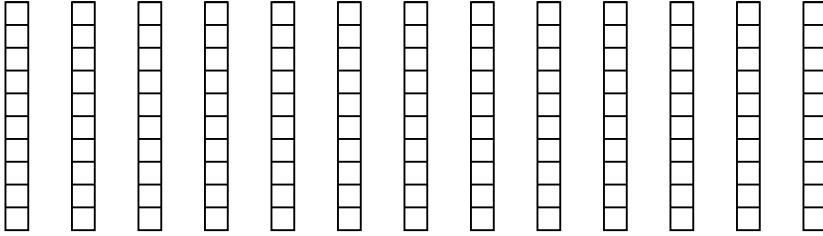


Wende die visuelle Methode an um jede Aufgabe zu lösen.


1)  $10 \cdot 0,1 =$



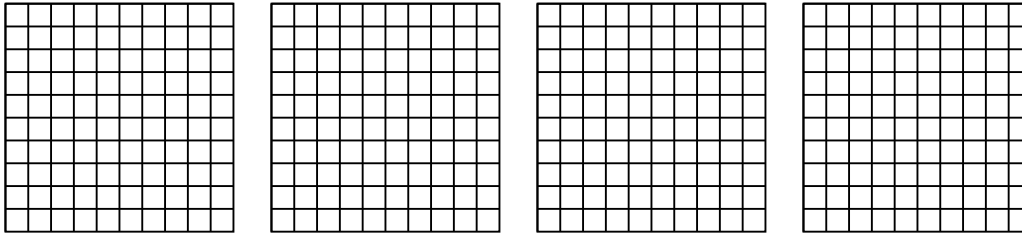
2)  $13 \cdot 0,3 =$



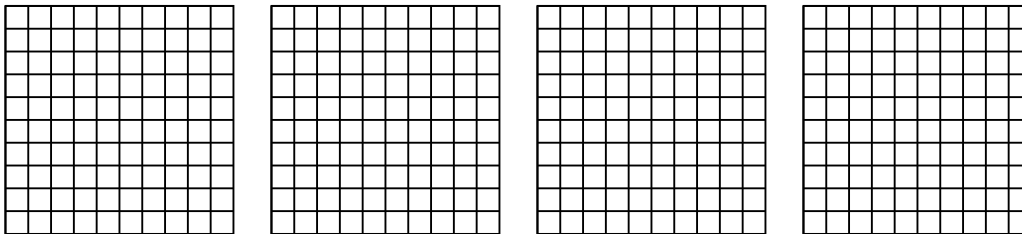
3)  $3 \cdot 0,16 =$



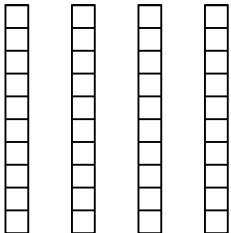
4)  $4 \cdot 0,97 =$



5)  $4 \cdot 0,53 =$



6)  $4 \cdot 0,7 =$



Antworten

1. \_\_\_\_\_

2. \_\_\_\_\_

3. \_\_\_\_\_

4. \_\_\_\_\_

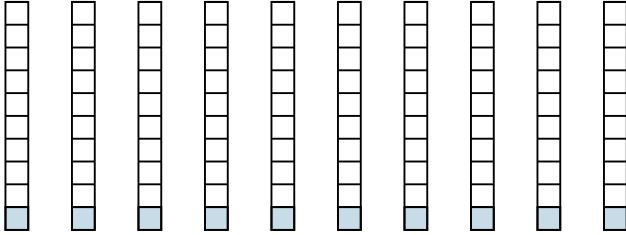
5. \_\_\_\_\_

6. \_\_\_\_\_

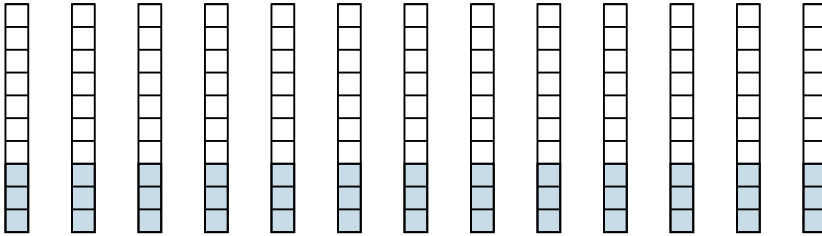


Wende die visuelle Methode an um jede Aufgabe zu lösen.


1)  $10 \cdot 0,1 =$



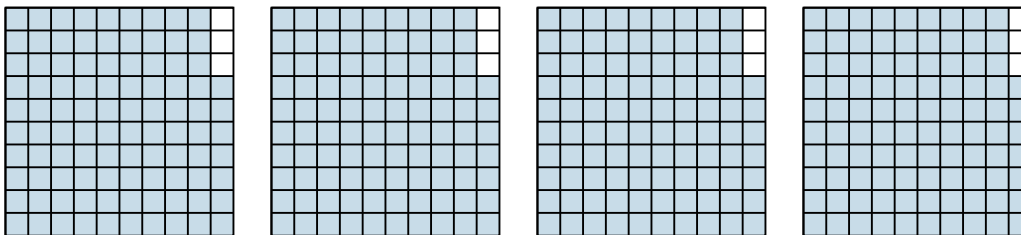
2)  $13 \cdot 0,3 =$



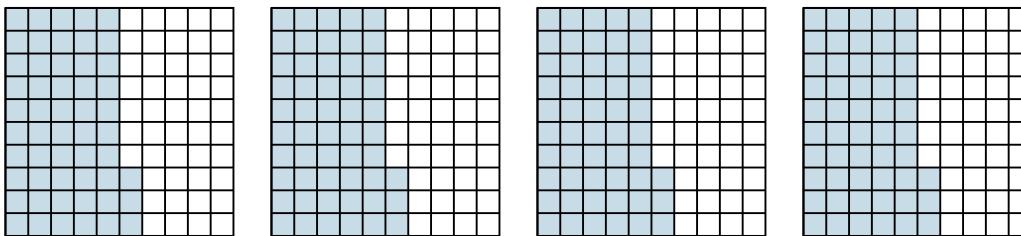
3)  $3 \cdot 0,16 =$




4)  $4 \cdot 0,97 =$



5)  $4 \cdot 0,53 =$



6)  $4 \cdot 0,7 =$

**Antworten**

1.  $\frac{10}{10} = 1$

2.  $\frac{39}{10} = 3,9$

3.  $\frac{48}{100} = 0,48$

4.  $\frac{388}{100} = 3,88$

5.  $\frac{212}{100} = 2,12$

6.  $\frac{28}{10} = 2,8$