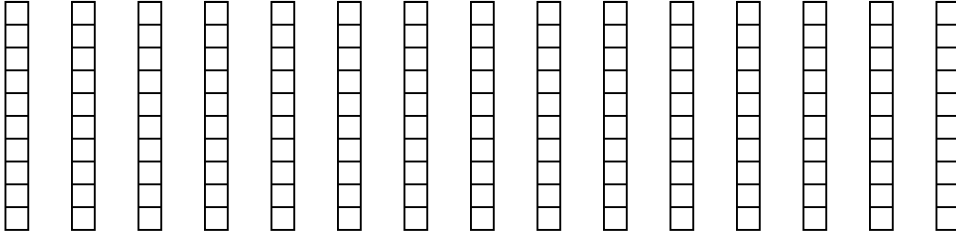


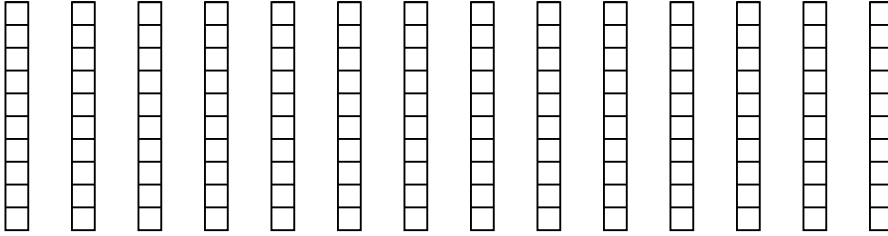


Wende die visuelle Methode an um jede Aufgabe zu lösen.

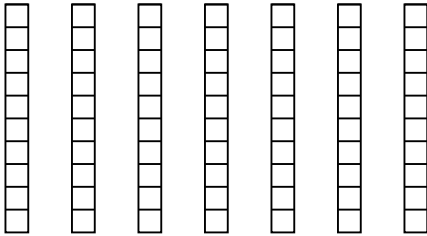
1)  $15 \cdot 0,7 =$



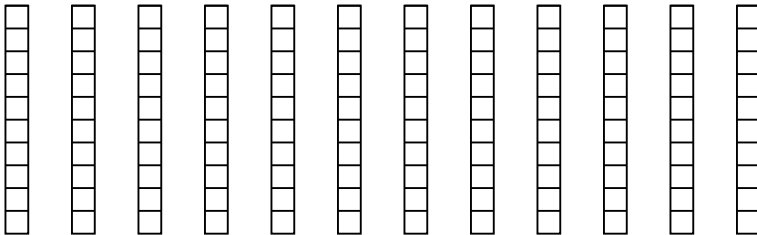
2)  $14 \cdot 0,5 =$




3)  $7 \cdot 0,6 =$



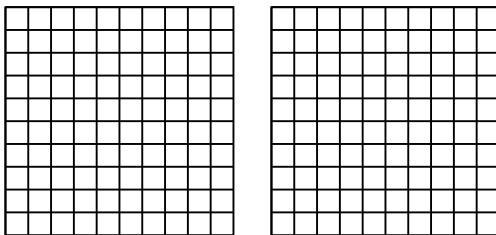
4)  $12 \cdot 0,5 =$



5)  $3 \cdot 0,73 =$



6)  $2 \cdot 0,58 =$



Antworten

1. \_\_\_\_\_

2. \_\_\_\_\_

3. \_\_\_\_\_

4. \_\_\_\_\_

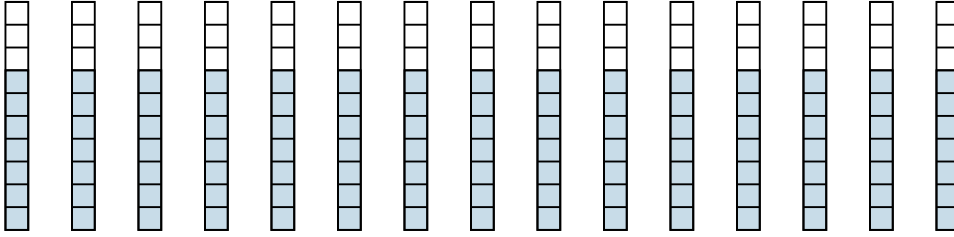
5. \_\_\_\_\_

6. \_\_\_\_\_

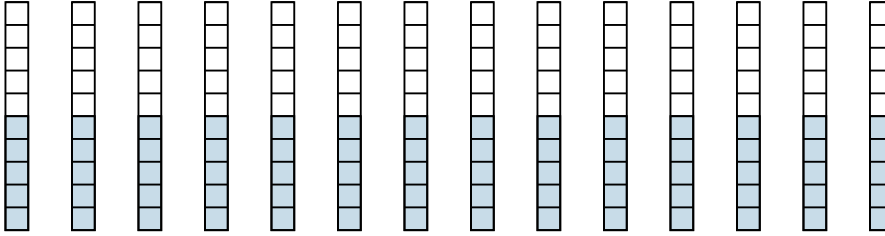


Wende die visuelle Methode an um jede Aufgabe zu lösen.

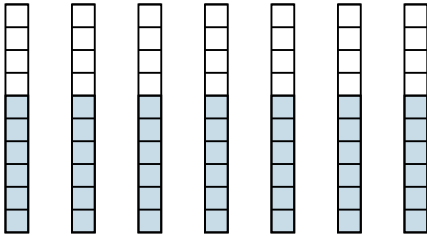
1)  $15 \cdot 0,7 =$



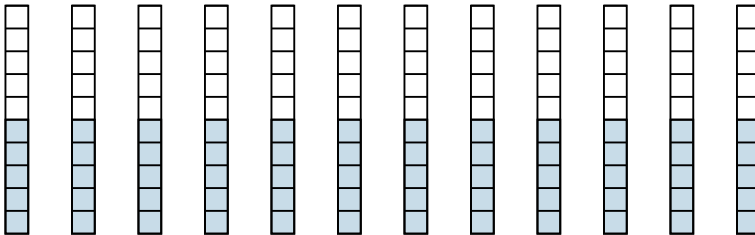
2)  $14 \cdot 0,5 =$



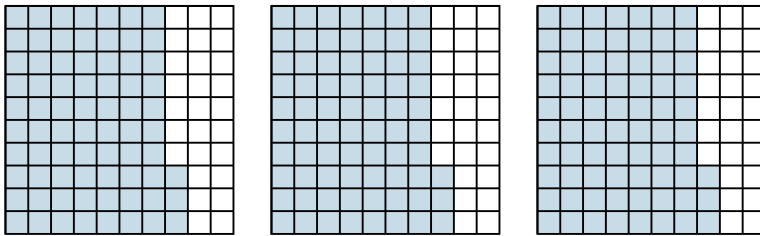
3)  $7 \cdot 0,6 =$



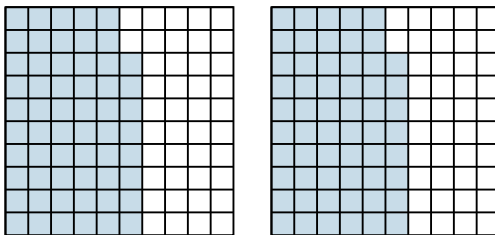
4)  $12 \cdot 0,5 =$



5)  $3 \cdot 0,73 =$



6)  $2 \cdot 0,58 =$

**Antworten**

1.  $\frac{105}{10} = 10,5$

2.  $\frac{70}{10} = 7$

3.  $\frac{42}{10} = 4,2$

4.  $\frac{60}{10} = 6$

5.  $\frac{219}{100} = 2,19$

6.  $\frac{116}{100} = 1,16$