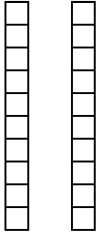


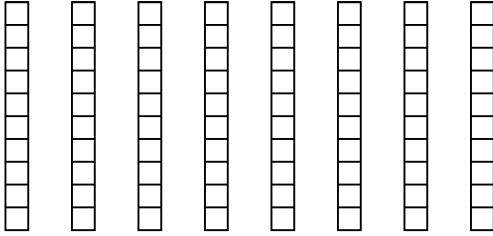


Wende die visuelle Methode an um jede Aufgabe zu lösen.

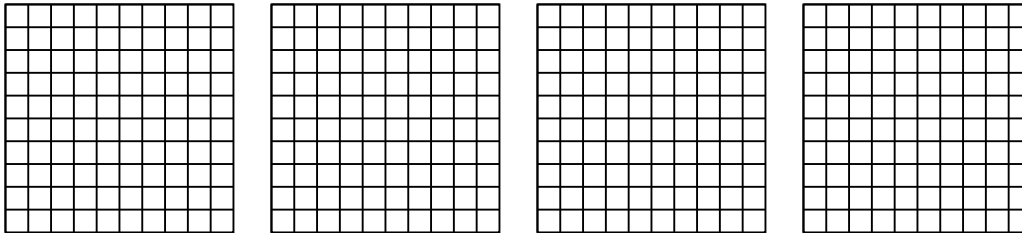
1)  $2 \cdot 0,2 =$



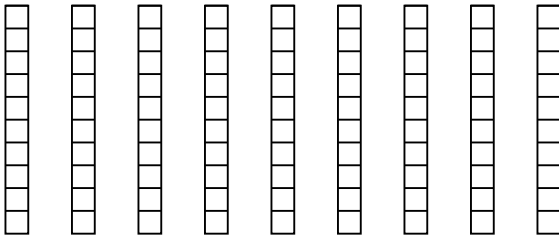
2)  $8 \cdot 0,3 =$



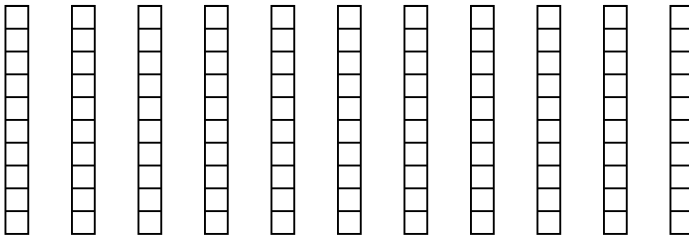
3)  $4 \cdot 0,47 =$




4)  $9 \cdot 0,3 =$



5)  $11 \cdot 0,7 =$



6)  $3 \cdot 0,71 =$



Antworten

1. \_\_\_\_\_

2. \_\_\_\_\_

3. \_\_\_\_\_

4. \_\_\_\_\_

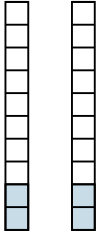
5. \_\_\_\_\_

6. \_\_\_\_\_

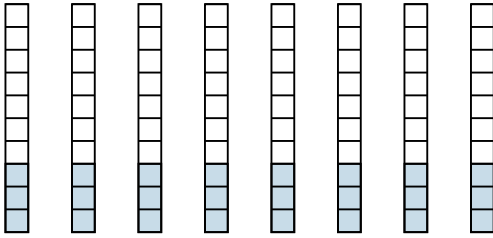


Wende die visuelle Methode an um jede Aufgabe zu lösen.

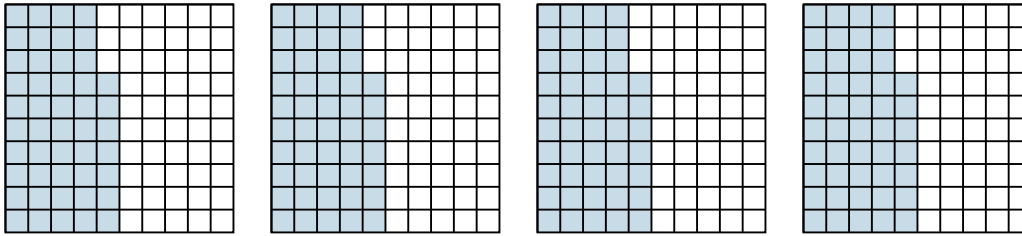
1)  $2 \cdot 0,2 =$



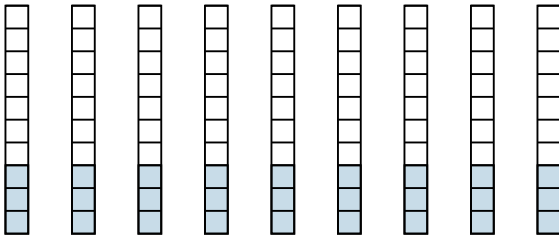
2)  $8 \cdot 0,3 =$



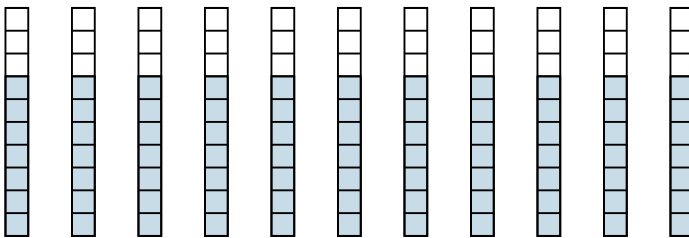
3)  $4 \cdot 0,47 =$



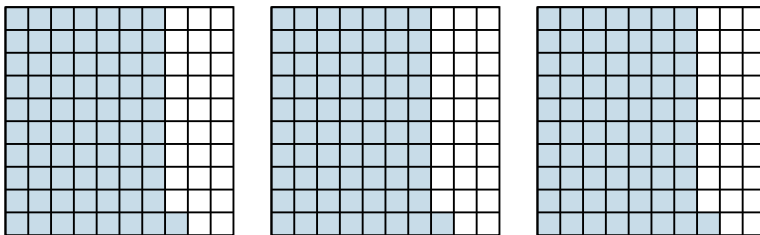
4)  $9 \cdot 0,3 =$



5)  $11 \cdot 0,7 =$



6)  $3 \cdot 0,71 =$

**Antworten**

1.  $\frac{4}{10} = 0,4$

2.  $\frac{24}{10} = 2,4$

3.  $\frac{188}{100} = 1,88$

4.  $\frac{27}{10} = 2,7$

5.  $\frac{77}{10} = 7,7$

6.  $\frac{213}{100} = 2,13$