





Wende die visuelle Methode an um jede Aufgabe zu lösen.


1) $0,8 \cdot 0,3 =$




2) $0,7 \cdot 0,7 =$




3) $0,3 \cdot 0,2 =$




4) $0,6 \cdot 0,2 =$




5) $0,5 \cdot 0,6 =$




6) $0,7 \cdot 0,2 =$




7) $0,9 \cdot 0,4 =$




8) $0,3 \cdot 0,2 =$




9) $0,3 \cdot 0,7 =$




10) $0,7 \cdot 0,1 =$




11) $0,1 \cdot 0,2 =$




12) $0,3 \cdot 0,4 =$




13) $0,9 \cdot 0,2 =$



14) $0,5 \cdot 0,1 =$



15) $0,3 \cdot 0,3 =$

**Antworten**

1. _____

2. _____

3. _____

4. _____

5. _____

6. _____

7. _____

8. _____

9. _____

10. _____

11. _____

12. _____

13. _____

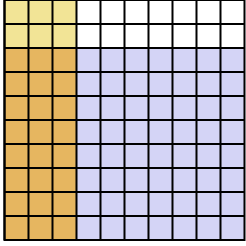
14. _____

15. _____

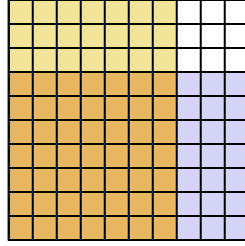


Wende die visuelle Methode an um jede Aufgabe zu lösen.

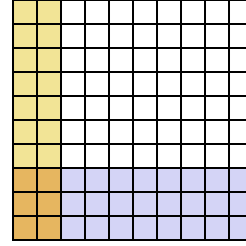
1) $0,8 \cdot 0,3 =$



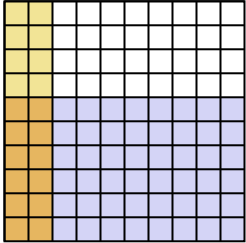
2) $0,7 \cdot 0,7 =$



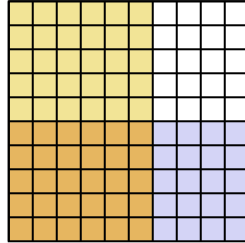
3) $0,3 \cdot 0,2 =$



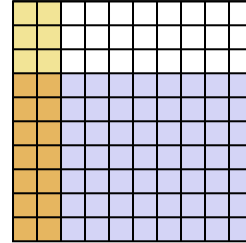
4) $0,6 \cdot 0,2 =$



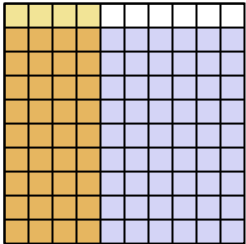
5) $0,5 \cdot 0,6 =$



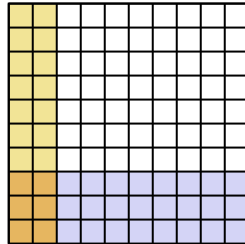
6) $0,7 \cdot 0,2 =$



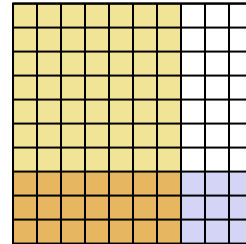
7) $0,9 \cdot 0,4 =$



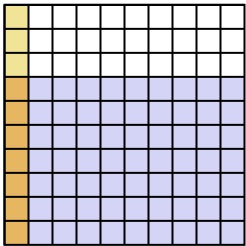
8) $0,3 \cdot 0,2 =$



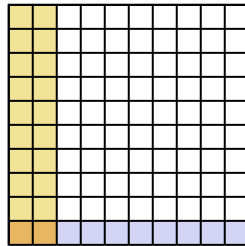
9) $0,3 \cdot 0,7 =$



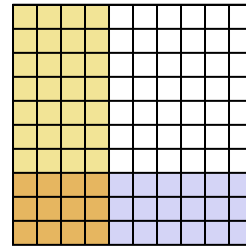
10) $0,7 \cdot 0,1 =$



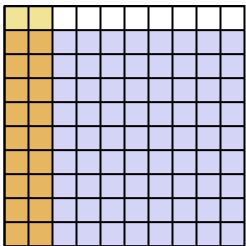
11) $0,1 \cdot 0,2 =$



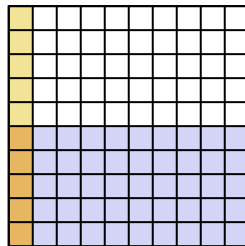
12) $0,3 \cdot 0,4 =$



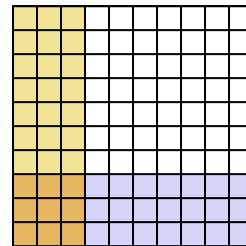
13) $0,9 \cdot 0,2 =$



14) $0,5 \cdot 0,1 =$



15) $0,3 \cdot 0,3 =$

**Antworten**

1. $\frac{24}{100} = 0,24$

2. $\frac{49}{100} = 0,49$

3. $\frac{6}{100} = 0,06$

4. $\frac{12}{100} = 0,12$

5. $\frac{30}{100} = 0,3$

6. $\frac{14}{100} = 0,14$

7. $\frac{36}{100} = 0,36$

8. $\frac{6}{100} = 0,06$

9. $\frac{21}{100} = 0,21$

10. $\frac{7}{100} = 0,07$

11. $\frac{2}{100} = 0,02$

12. $\frac{12}{100} = 0,12$

13. $\frac{18}{100} = 0,18$

14. $\frac{5}{100} = 0,05$

15. $\frac{9}{100} = 0,09$