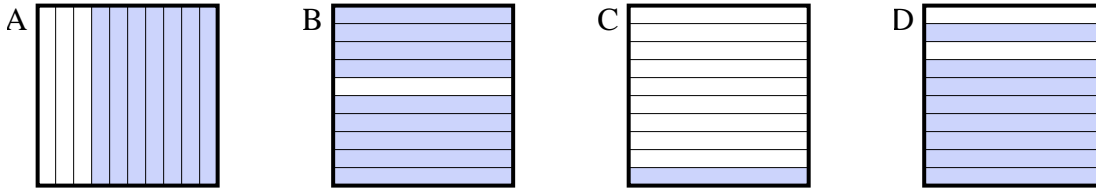




Bestimme, welcher Buchstabe die Frage richtig beantwortet.

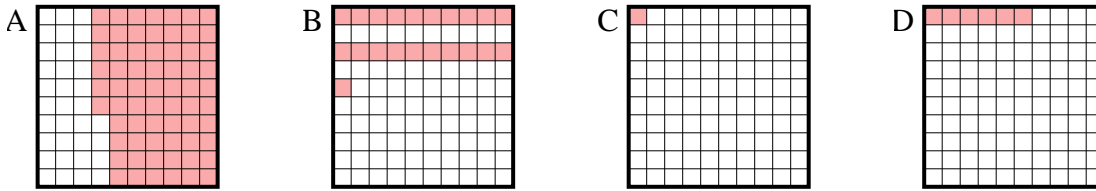
Antworten

1) Which 10•1 grid is shaded to represent the decimal number that, when added to 0,9, results in a total of 1.00?



1. _____

2) Which 10•10 grid is shaded to represent the decimal number that, when added to 0,94, results in a total of 1.00?



2. _____

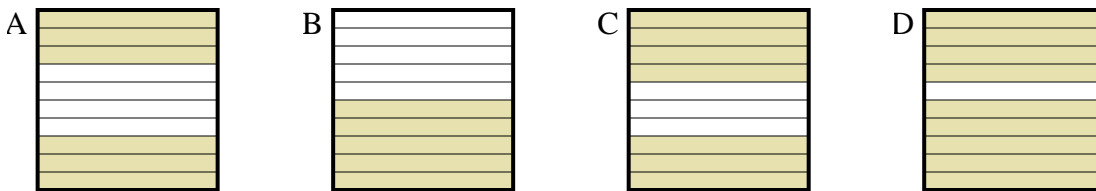
3. _____

4. _____

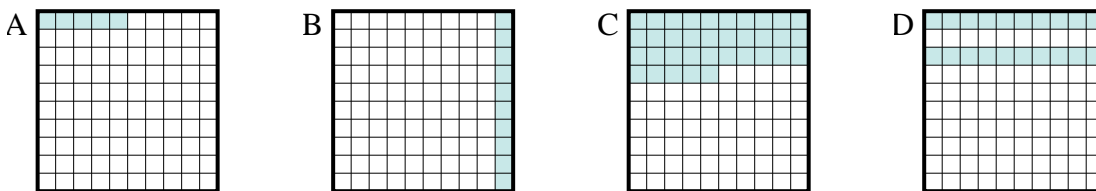
5. _____

6. _____

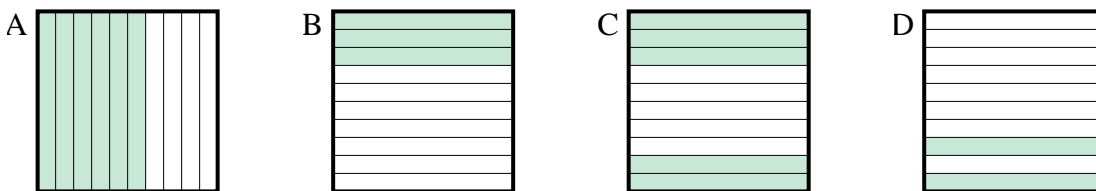
3) Which 10•1 grid is shaded to represent the decimal number that, when added to 0,1, results in a total of 1.00?



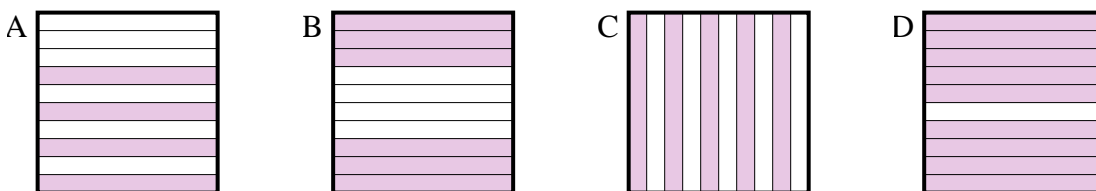
4) Which 10•10 grid is shaded to represent the decimal number that, when added to 0,95, results in a total of 1.00?



5) Which 10•1 grid is shaded to represent the decimal number that, when added to 0,8, results in a total of 1.00?



6) Which 10•1 grid is shaded to represent the decimal number that, when added to 0,6, results in a total of 1.00?

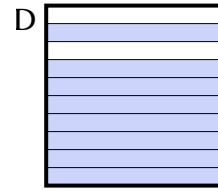
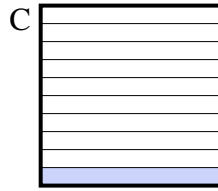
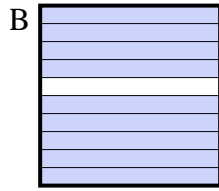
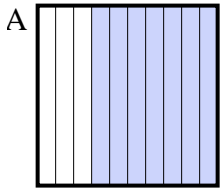




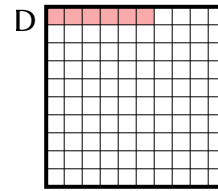
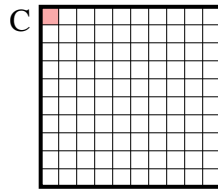
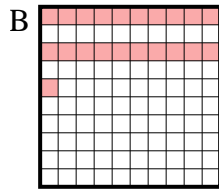
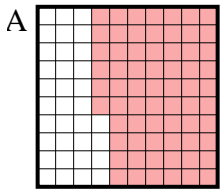
Bestimme, welcher Buchstabe die Frage richtig beantwortet.

Antworten





- 1) Which $10 \cdot 1$ grid is shaded to represent the decimal number that, when added to 0,9, results in a total of 1.00?

1. **C**

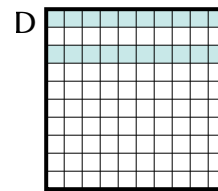
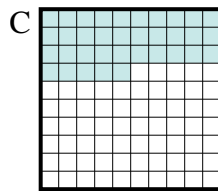
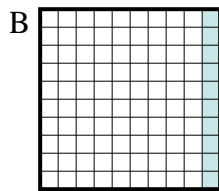
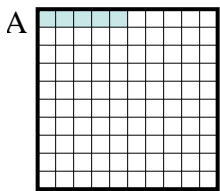
- 2) Which $10 \cdot 10$ grid is shaded to represent the decimal number that, when added to 0,94, results in a total of 1.00?

2. **D** 3. **D** 4. **A** 5. **D** 6. **A**

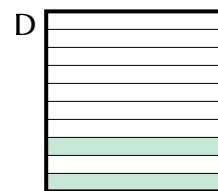


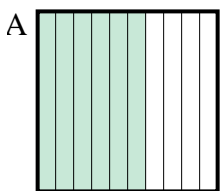
- 3) Which $10 \cdot 1$ grid is shaded to represent the decimal number that, when added to 0,1, results in a total of 1.00?



- 4) Which $10 \cdot 10$ grid is shaded to represent the decimal number that, when added to 0,95, results in a total of 1.00?



- 5) Which $10 \cdot 1$ grid is shaded to represent the decimal number that, when added to 0,8, results in a total of 1.00?



- 6) Which $10 \cdot 1$ grid is shaded to represent the decimal number that, when added to 0,6, results in a total of 1.00?

