




Bestimme die Anzahl der Zehnergruppe. Dann ermittle die ganze Anzahl der kleinen Blocks.

Antworten

Bsp)



1)



Bsp. 1 10

1. _____

2. _____

3. _____

4. _____

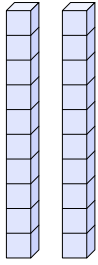
5. _____

6. _____

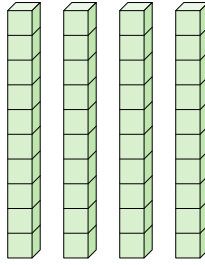
7. _____

8. _____

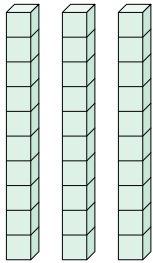
2)



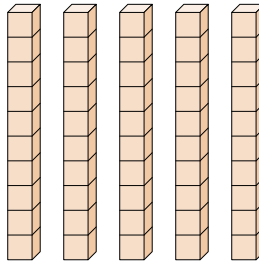
3)



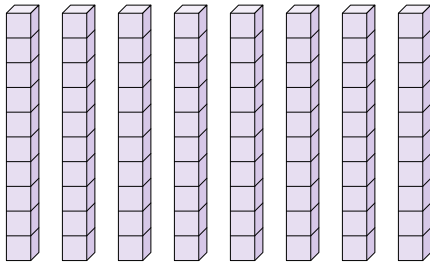
4)



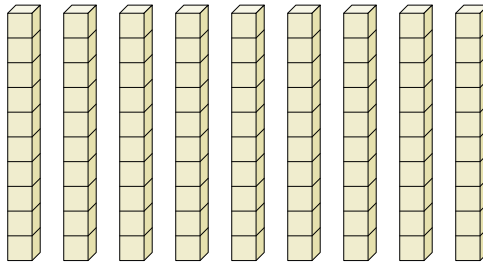
5)




6)



7)



8)






Bestimme die Anzahl der Zehnergruppe. Dann ermittle die ganze Anzahl der kleinen Blocks.

Antworten

Bsp)

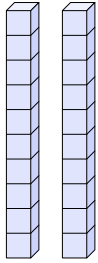


1)

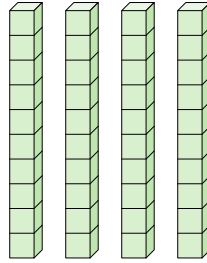


Bsp. 1 10

2)

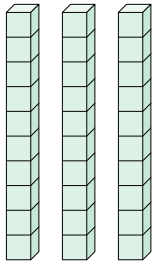


3)

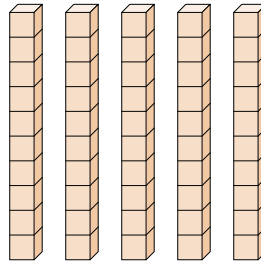


1. 6 60

4)

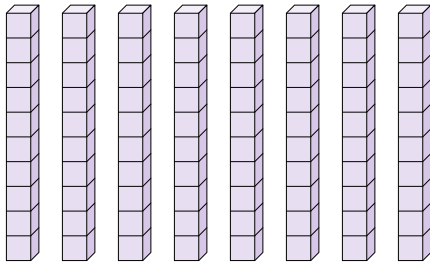


5)

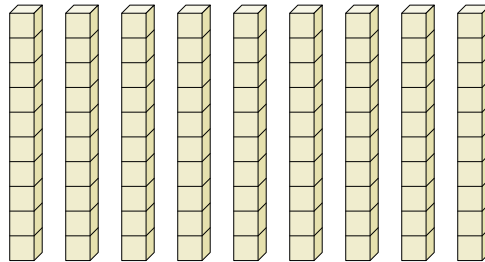


2. 2 20

6)




7)



3. 4 40

8)



4. 3 30

5. 5 50

6. 8 80

7. 9 90

8. 7 70