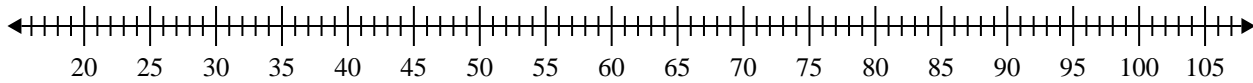


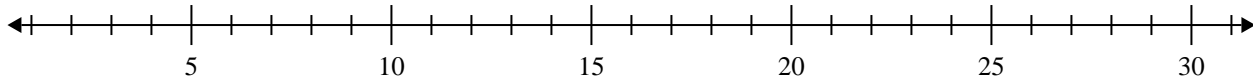


Erstelle eine Kastengrafik aus den angegebenen Zahlen.

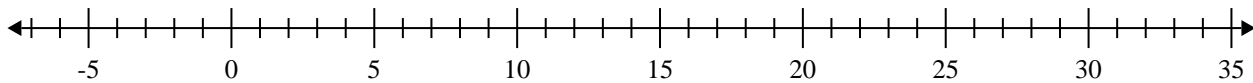
1) 67, 95, 60, 60, 31, 46, 57, 31



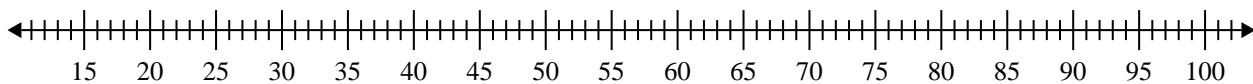
2) 13, 6, 16, 7, 12, 6, 9



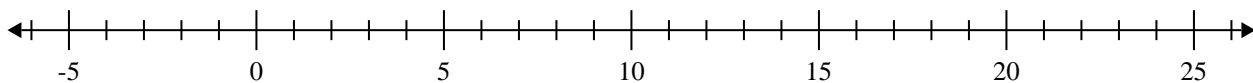
3) 18, 9, 15, 20, 8, 13, 16



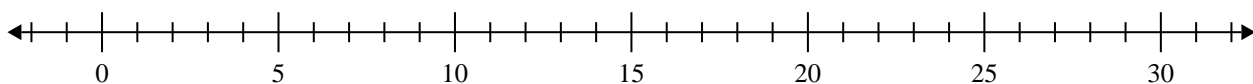
4) 83, 94, 92, 66, 83, 25, 54, 28, 42



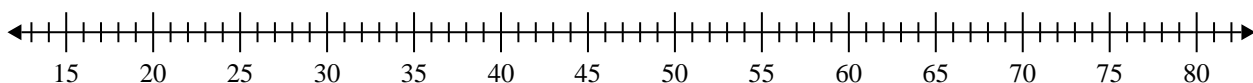
5) 7, 5, 7, 10, 13, 16



6) 20, 8, 20, 16, 8, 7, 20, 14, 20



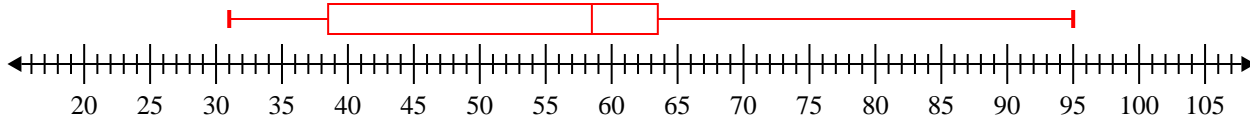
7) 63, 27, 64, 29, 51, 39, 59, 75



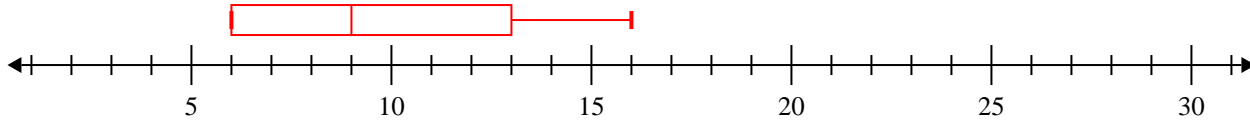


Erstelle eine Kastengrafik aus den angegebenen Zahlen.

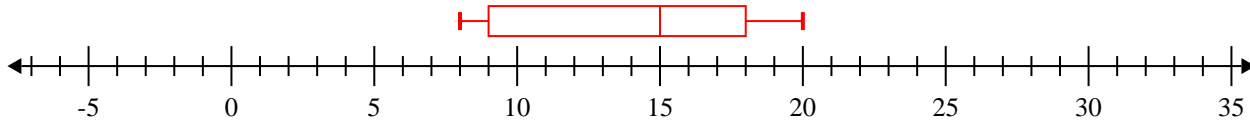
- 1) 67, 95, 60, 60, 31, 46, 57, 31 **Min=31 Max=95 q1=38.5 Q2=58.5 q3=63.5**



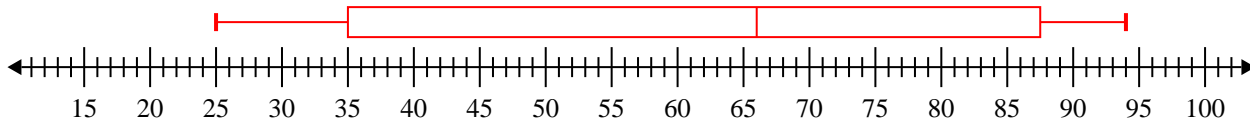
- 2) 13, 6, 16, 7, 12, 6, 9 **Min=6 Max=16 q1=6 Q2=9 q3=13**



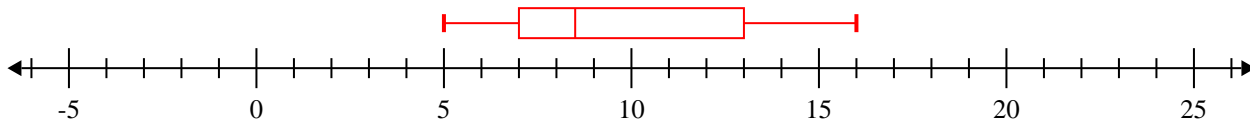
- 3) 18, 9, 15, 20, 8, 13, 16 **Min=8 Max=20 q1=9 Q2=15 q3=18**



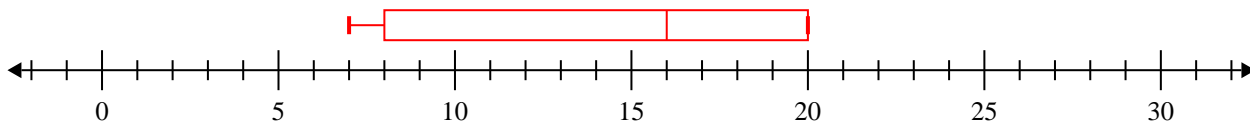
- 4) 83, 94, 92, 66, 83, 25, 54, 28, 42 **Min=25 Max=94 q1=35 Q2=66 q3=87.5**



- 5) 7, 5, 7, 10, 13, 16 **Min=5 Max=16 q1=7 Q2=8.5 q3=13**



- 6) 20, 8, 20, 16, 8, 7, 20, 14, 20 **Min=7 Max=20 q1=8 Q2=16 q3=20**



- 7) 63, 27, 64, 29, 51, 39, 59, 75 **Min=27 Max=75 q1=34 Q2=55 q3=63.5**

