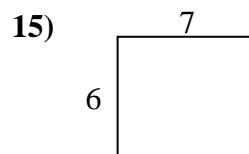
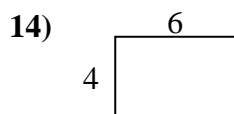
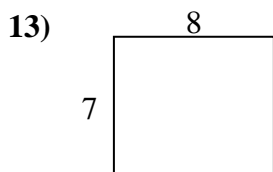
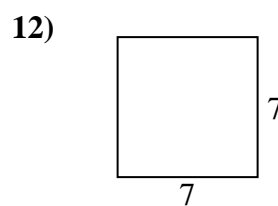
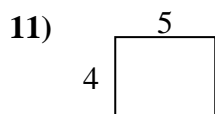

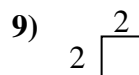
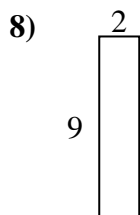
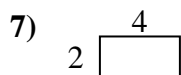
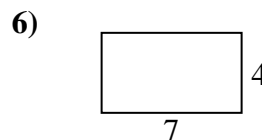
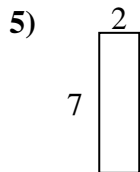

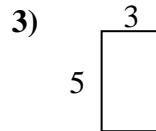
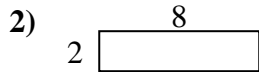
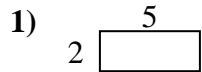




Bestimme den Umfang und die Fläche jeder Figur. Jede Figur ist in Zentimeter (cm). Nicht maßstäblich.

Antworten

1. _____

2. _____

3. _____

4. _____

5. _____

6. _____

7. _____

8. _____

9. _____

10. _____

11. _____

12. _____

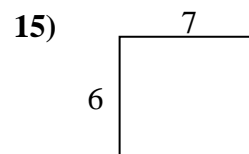
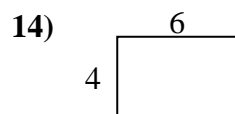
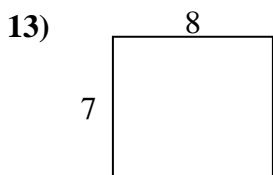
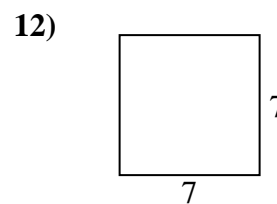
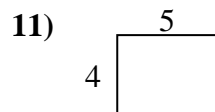
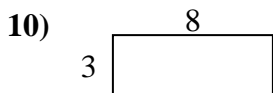
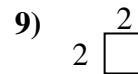
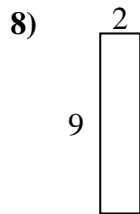
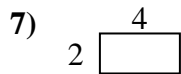
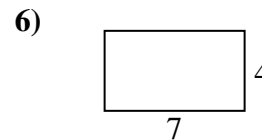
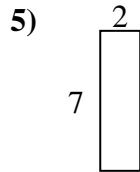

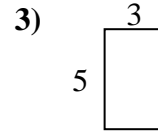
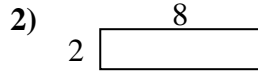
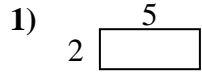
13. _____

14. _____

15. _____



Bestimme den Umfang und die Fläche jeder Figur. Jede Figur ist in Zentimeter (cm). Nicht maßstäblich.

Antworten

1. 14 cm 10 cm²

2. 20 cm 16 cm²

3. 16 cm 15 cm²

4. 24 cm 20 cm²

5. 18 cm 14 cm²

6. 22 cm 28 cm²

7. 12 cm 8 cm²

8. 22 cm 18 cm²

9. 8 cm 4 cm²

10. 22 cm 24 cm²

11. 18 cm 20 cm²

12. 28 cm 49 cm²

13. 30 cm 56 cm²

14. 20 cm 24 cm²

15. 26 cm 42 cm²