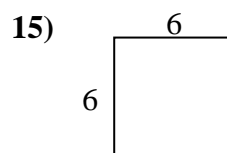
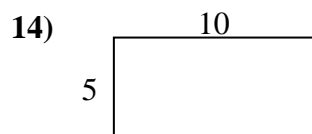
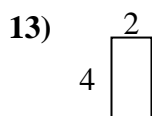
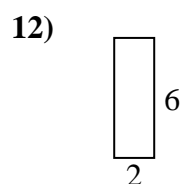
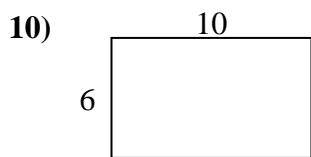
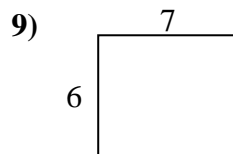
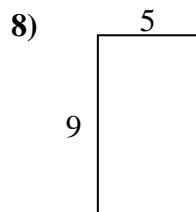
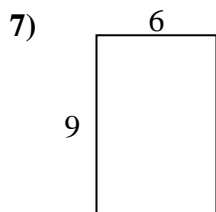
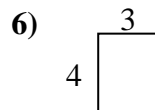
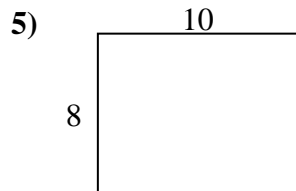
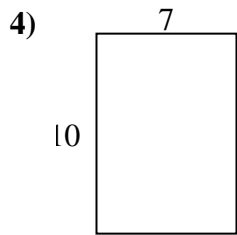
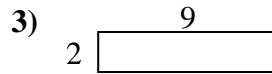
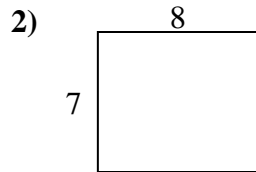
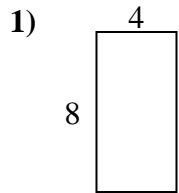




Bestimme den Umfang und die Fläche jeder Figur. Jede Figur ist in Zentimeter (cm).

Nicht maßstäblich.

Antworten

1. _____

2. _____

3. _____

4. _____

5. _____

6. _____

7. _____

8. _____

9. _____

10. _____

11. _____

12. _____

13. _____

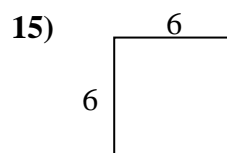
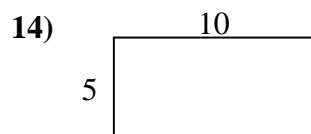
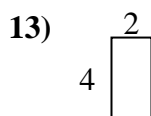
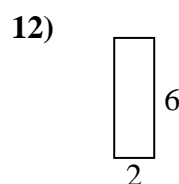
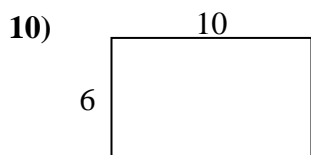
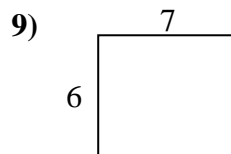
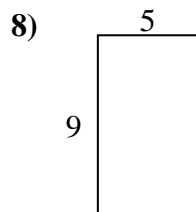
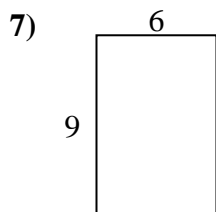
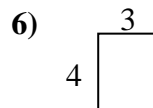
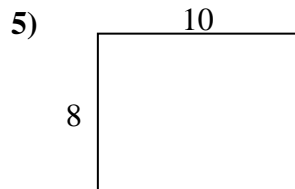
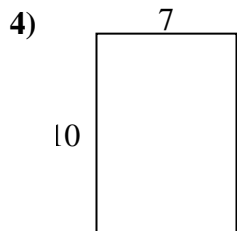
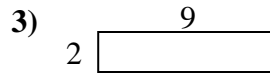
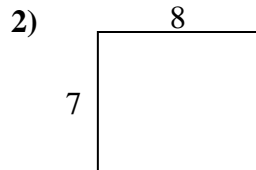
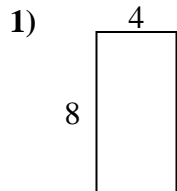
14. _____

15. _____



Bestimme den Umfang und die Fläche jeder Figur. Jede Figur ist in Zentimeter (cm).

Nicht maßstäblich.

Antworten

1. 24 cm 32 cm²

2. 30 cm 56 cm²

3. 22 cm 18 cm²

4. 34 cm 70 cm²

5. 36 cm 80 cm²

6. 14 cm 12 cm²

7. 30 cm 54 cm²

8. 28 cm 45 cm²

9. 26 cm 42 cm²

10. 32 cm 60 cm²

11. 20 cm 16 cm²

12. 16 cm 12 cm²

13. 12 cm 8 cm²

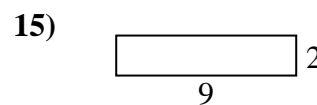
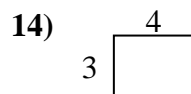
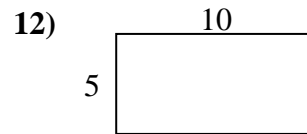
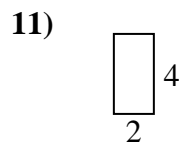
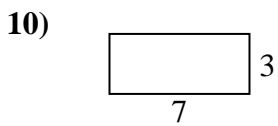
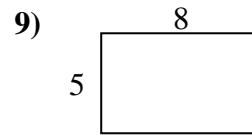
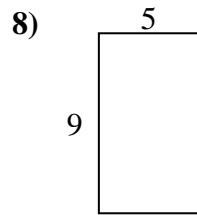
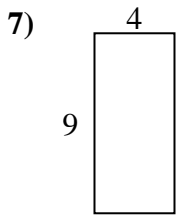
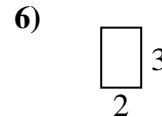
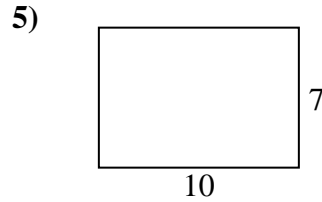
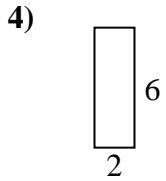
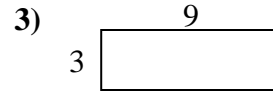
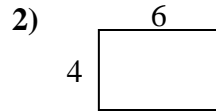
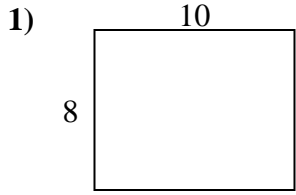
14. 30 cm 50 cm²

15. 24 cm 36 cm²



Bestimme den Umfang und die Fläche jeder Figur. Jede Figur ist in Zentimeter (cm).

Nicht maßstäblich.

Antworten

1. _____

2. _____

3. _____

4. _____

5. _____

6. _____

7. _____

8. _____

9. _____

10. _____

11. _____

12. _____

13. _____

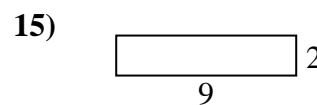
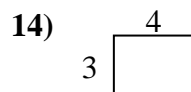
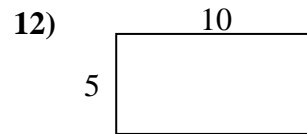
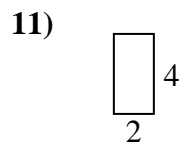
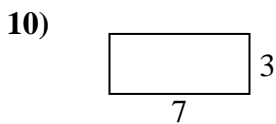
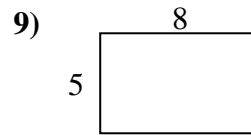
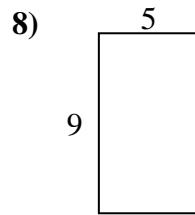
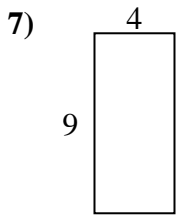
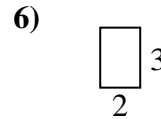
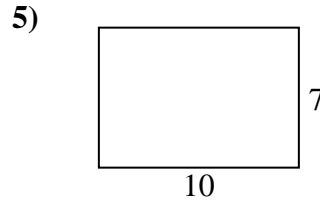
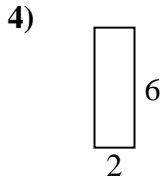
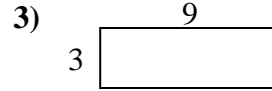
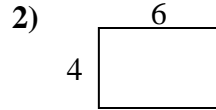
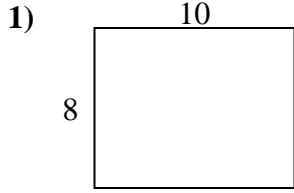
14. _____

15. _____



Bestimme den Umfang und die Fläche jeder Figur. Jede Figur ist in Zentimeter (cm).

Nicht maßstäblich.

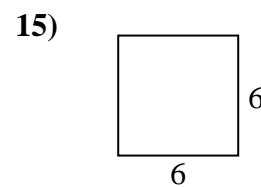
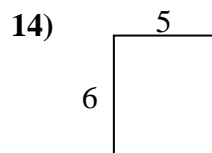
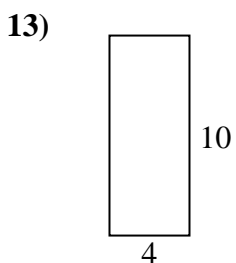
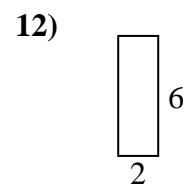
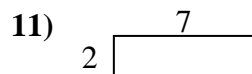
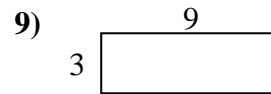
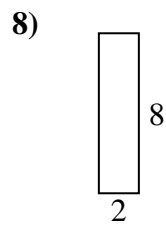
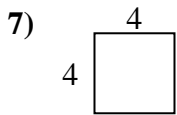
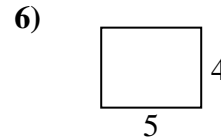
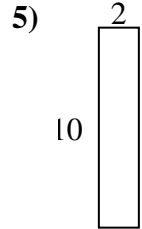
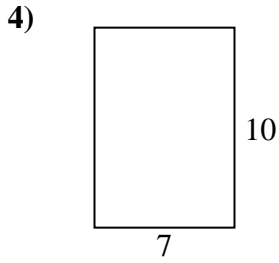
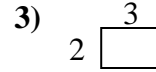
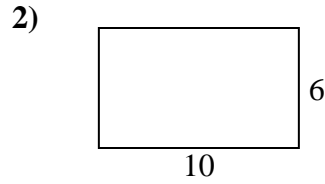
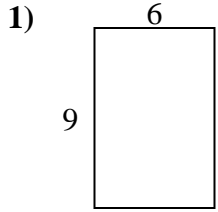
Antworten

- | | | |
|-----|--------------|--------------------------|
| 1. | <u>36 cm</u> | <u>80 cm²</u> |
| 2. | <u>20 cm</u> | <u>24 cm²</u> |
| 3. | <u>24 cm</u> | <u>27 cm²</u> |
| 4. | <u>16 cm</u> | <u>12 cm²</u> |
| 5. | <u>34 cm</u> | <u>70 cm²</u> |
| 6. | <u>10 cm</u> | <u>6 cm²</u> |
| 7. | <u>26 cm</u> | <u>36 cm²</u> |
| 8. | <u>28 cm</u> | <u>45 cm²</u> |
| 9. | <u>26 cm</u> | <u>40 cm²</u> |
| 10. | <u>20 cm</u> | <u>21 cm²</u> |
| 11. | <u>12 cm</u> | <u>8 cm²</u> |
| 12. | <u>30 cm</u> | <u>50 cm²</u> |
| 13. | <u>20 cm</u> | <u>16 cm²</u> |
| 14. | <u>14 cm</u> | <u>12 cm²</u> |
| 15. | <u>22 cm</u> | <u>18 cm²</u> |



Bestimme den Umfang und die Fläche jeder Figur. Jede Figur ist in Zentimeter (cm).

Nicht maßstäblich.

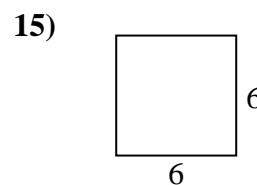
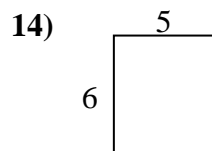
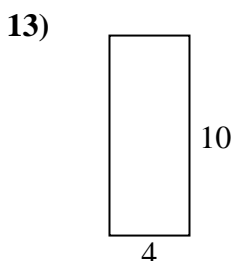
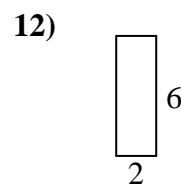
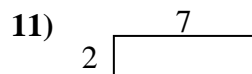
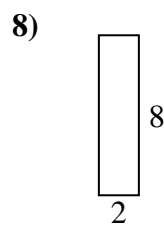
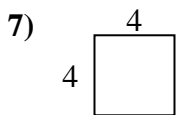
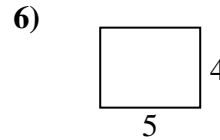
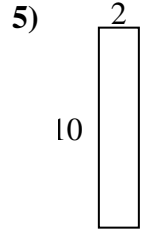
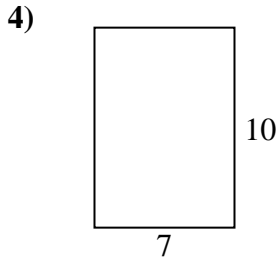
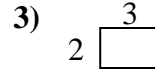
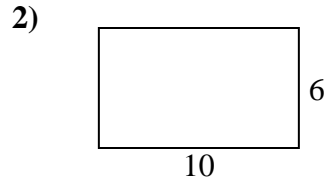
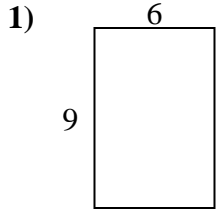
Antworten

1. _____
2. _____
3. _____
4. _____
5. _____
6. _____
7. _____
8. _____
9. _____
10. _____
11. _____
12. _____
13. _____
14. _____
15. _____



Bestimme den Umfang und die Fläche jeder Figur. Jede Figur ist in Zentimeter (cm).

Nicht maßstäblich.

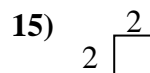
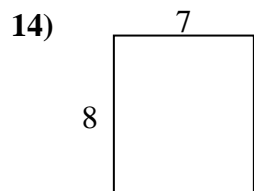
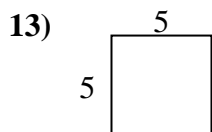
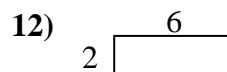
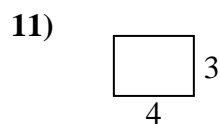
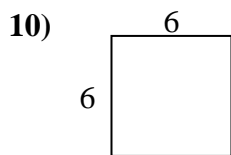
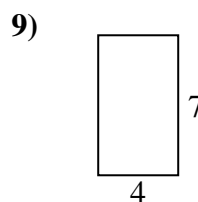
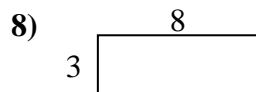
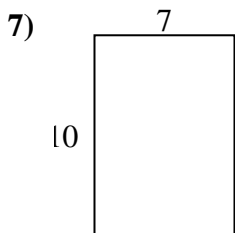
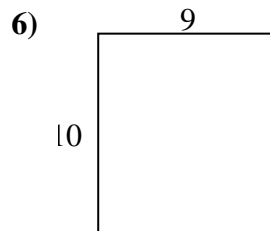
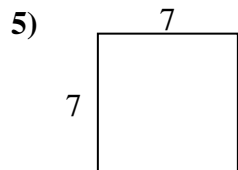
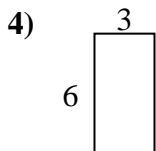
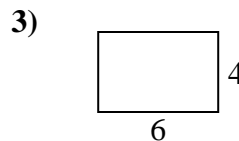

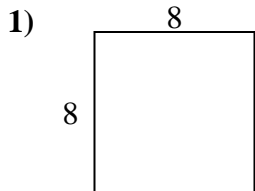
Antworten

- | | | |
|-----|--------------|--------------------------|
| 1. | <u>30 cm</u> | <u>54 cm²</u> |
| 2. | <u>32 cm</u> | <u>60 cm²</u> |
| 3. | <u>10 cm</u> | <u>6 cm²</u> |
| 4. | <u>34 cm</u> | <u>70 cm²</u> |
| 5. | <u>24 cm</u> | <u>20 cm²</u> |
| 6. | <u>18 cm</u> | <u>20 cm²</u> |
| 7. | <u>16 cm</u> | <u>16 cm²</u> |
| 8. | <u>20 cm</u> | <u>16 cm²</u> |
| 9. | <u>24 cm</u> | <u>27 cm²</u> |
| 10. | <u>22 cm</u> | <u>18 cm²</u> |
| 11. | <u>18 cm</u> | <u>14 cm²</u> |
| 12. | <u>16 cm</u> | <u>12 cm²</u> |
| 13. | <u>28 cm</u> | <u>40 cm²</u> |
| 14. | <u>22 cm</u> | <u>30 cm²</u> |
| 15. | <u>24 cm</u> | <u>36 cm²</u> |



Bestimme den Umfang und die Fläche jeder Figur. Jede Figur ist in Zentimeter (cm).

Nicht maßstäblich.

Antworten

1. _____

2. _____

3. _____

4. _____

5. _____

6. _____

7. _____

8. _____

9. _____

10. _____

11. _____

12. _____

13. _____

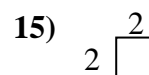
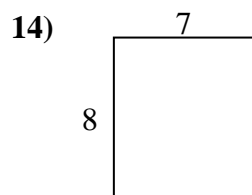
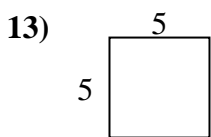
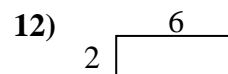
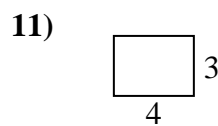
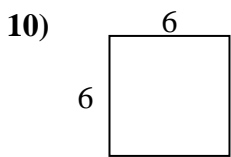
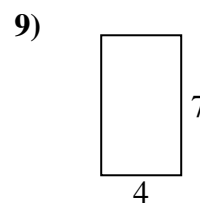
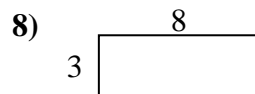
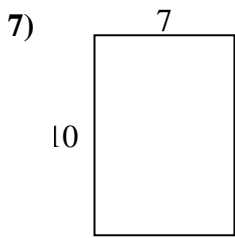
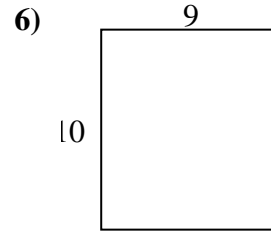
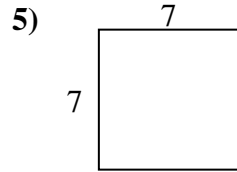
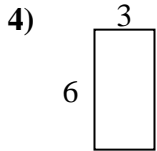
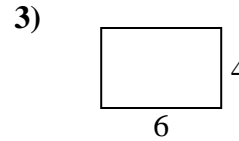

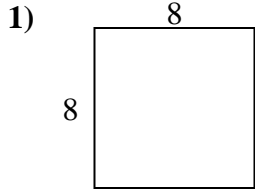
14. _____

15. _____



Bestimme den Umfang und die Fläche jeder Figur. Jede Figur ist in Zentimeter (cm).

Nicht maßstäblich.

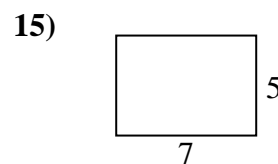
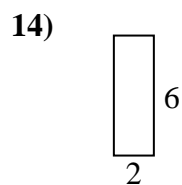
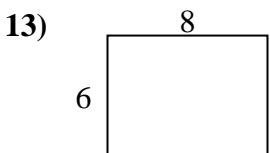
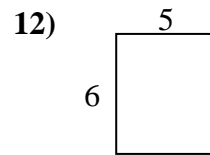
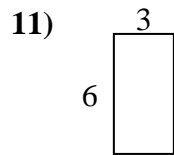
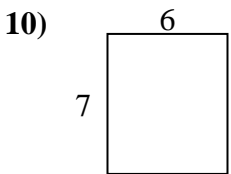
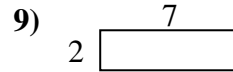
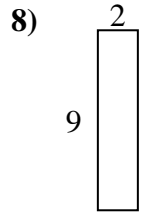
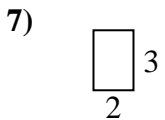
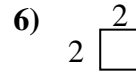
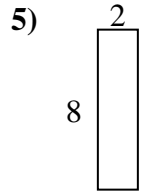
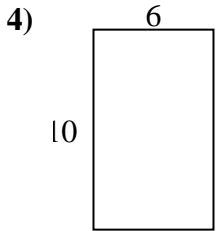
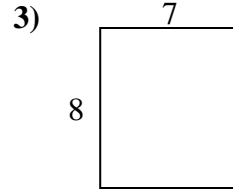
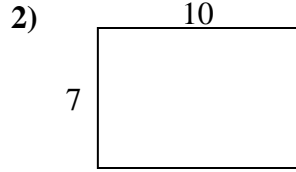
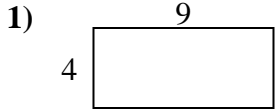
Antworten

- | | | |
|-----|--------------|--------------------------|
| 1. | <u>32 cm</u> | <u>64 cm²</u> |
| 2. | <u>24 cm</u> | <u>20 cm²</u> |
| 3. | <u>20 cm</u> | <u>24 cm²</u> |
| 4. | <u>18 cm</u> | <u>18 cm²</u> |
| 5. | <u>28 cm</u> | <u>49 cm²</u> |
| 6. | <u>38 cm</u> | <u>90 cm²</u> |
| 7. | <u>34 cm</u> | <u>70 cm²</u> |
| 8. | <u>22 cm</u> | <u>24 cm²</u> |
| 9. | <u>22 cm</u> | <u>28 cm²</u> |
| 10. | <u>24 cm</u> | <u>36 cm²</u> |
| 11. | <u>14 cm</u> | <u>12 cm²</u> |
| 12. | <u>16 cm</u> | <u>12 cm²</u> |
| 13. | <u>20 cm</u> | <u>25 cm²</u> |
| 14. | <u>30 cm</u> | <u>56 cm²</u> |
| 15. | <u>8 cm</u> | <u>4 cm²</u> |



Bestimme den Umfang und die Fläche jeder Figur. Jede Figur ist in Zentimeter (cm).

Nicht maßstäblich.



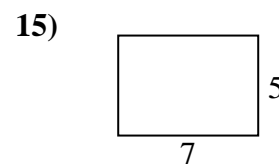
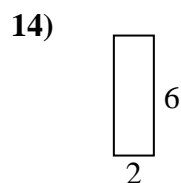
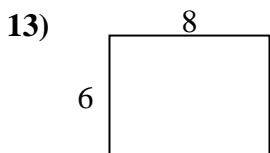
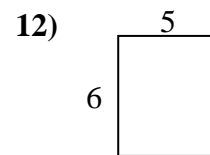
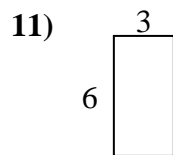
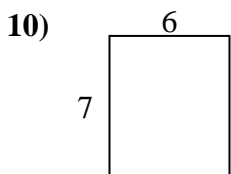
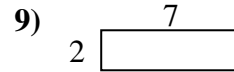
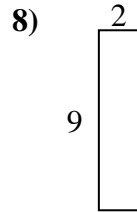
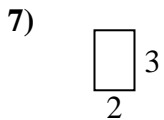
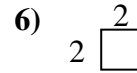
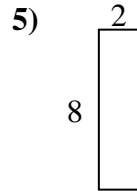
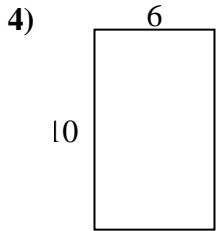
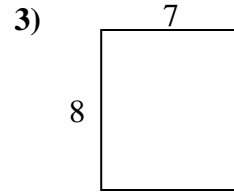
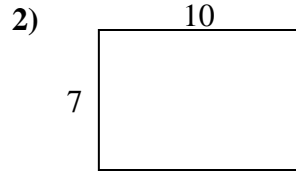
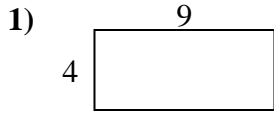
Antworten

- 1. _____
- 2. _____
- 3. _____
- 4. _____
- 5. _____
- 6. _____
- 7. _____
- 8. _____
- 9. _____
- 10. _____
- 11. _____
- 12. _____
- 13. _____
- 14. _____
- 15. _____



Bestimme den Umfang und die Fläche jeder Figur. Jede Figur ist in Zentimeter (cm).

Nicht maßstäblich.

Antworten

1. 26 cm 36 cm²

2. 34 cm 70 cm²

3. 30 cm 56 cm²

4. 32 cm 60 cm²

5. 20 cm 16 cm²

6. 8 cm 4 cm²

7. 10 cm 6 cm²

8. 22 cm 18 cm²

9. 18 cm 14 cm²

10. 26 cm 42 cm²

11. 18 cm 18 cm²

12. 22 cm 30 cm²

13. 28 cm 48 cm²

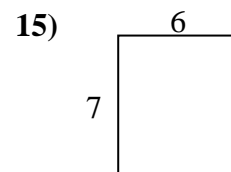
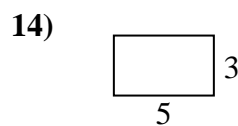
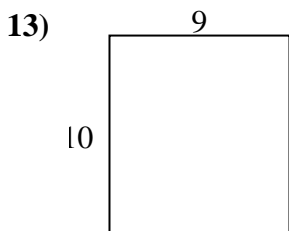
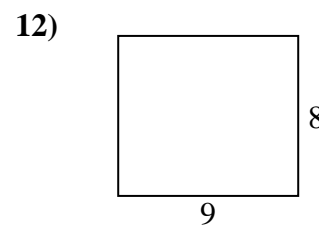
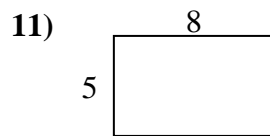
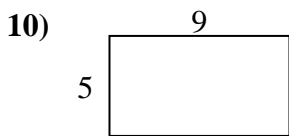
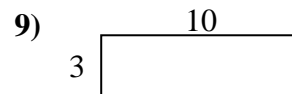
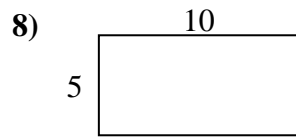
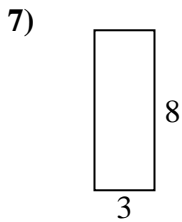
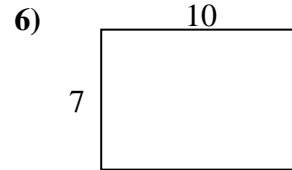
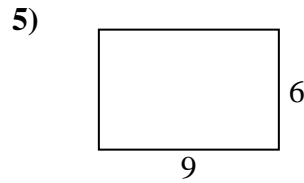
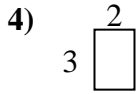
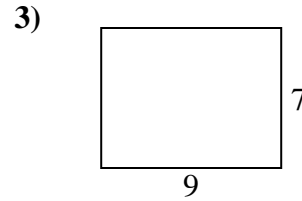
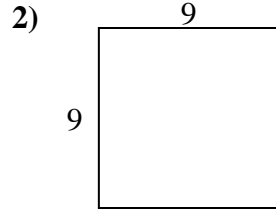
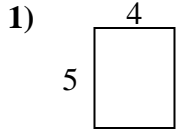
14. 16 cm 12 cm²

15. 24 cm 35 cm²



Bestimme den Umfang und die Fläche jeder Figur. Jede Figur ist in Zentimeter (cm).

Nicht maßstäblich.

Antworten

1. _____

2. _____

3. _____

4. _____

5. _____

6. _____

7. _____

8. _____

9. _____

10. _____

11. _____

12. _____

13. _____

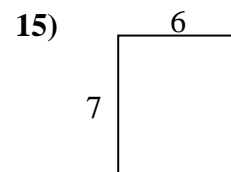
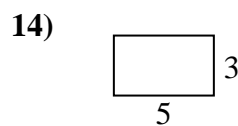
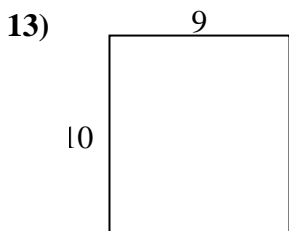
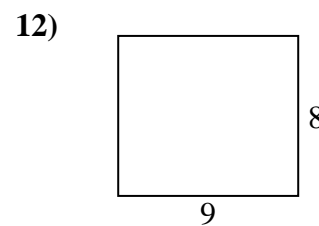
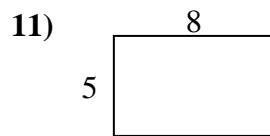
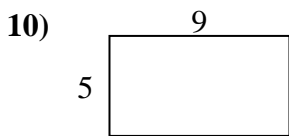
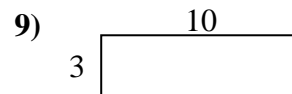
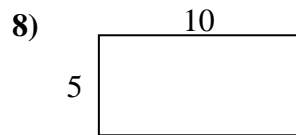
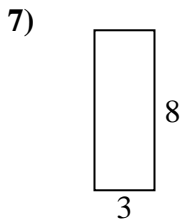
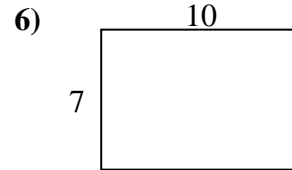
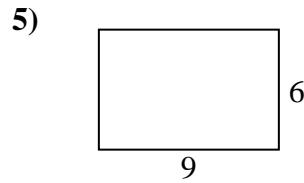
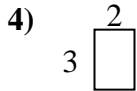
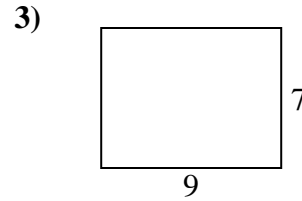
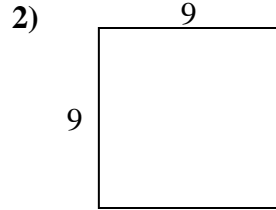
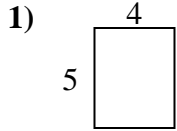
14. _____

15. _____



Bestimme den Umfang und die Fläche jeder Figur. Jede Figur ist in Zentimeter (cm).

Nicht maßstäblich.

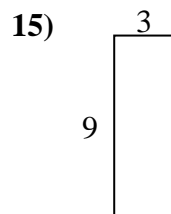
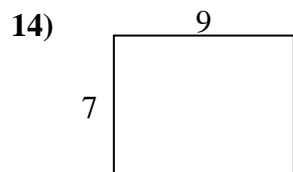
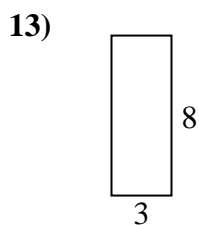
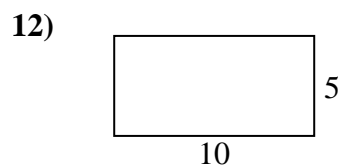
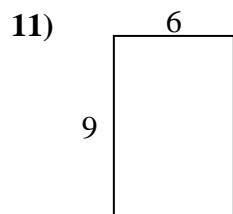
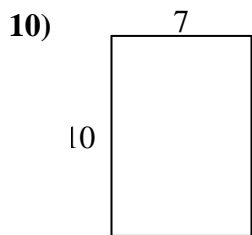
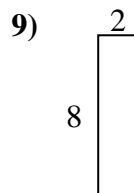
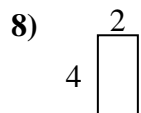
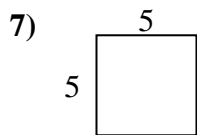
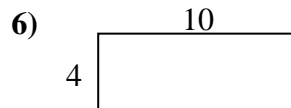
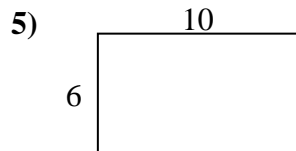
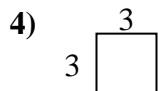
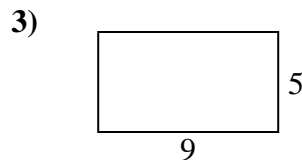
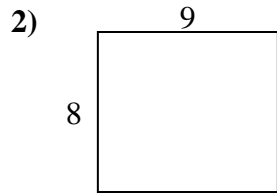
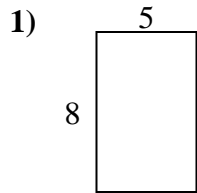
Antworten

- | | | |
|-----|--------------|--------------------------|
| 1. | <u>18 cm</u> | <u>20 cm²</u> |
| 2. | <u>36 cm</u> | <u>81 cm²</u> |
| 3. | <u>32 cm</u> | <u>63 cm²</u> |
| 4. | <u>10 cm</u> | <u>6 cm²</u> |
| 5. | <u>30 cm</u> | <u>54 cm²</u> |
| 6. | <u>34 cm</u> | <u>70 cm²</u> |
| 7. | <u>22 cm</u> | <u>24 cm²</u> |
| 8. | <u>30 cm</u> | <u>50 cm²</u> |
| 9. | <u>26 cm</u> | <u>30 cm²</u> |
| 10. | <u>28 cm</u> | <u>45 cm²</u> |
| 11. | <u>26 cm</u> | <u>40 cm²</u> |
| 12. | <u>34 cm</u> | <u>72 cm²</u> |
| 13. | <u>38 cm</u> | <u>90 cm²</u> |
| 14. | <u>16 cm</u> | <u>15 cm²</u> |
| 15. | <u>26 cm</u> | <u>42 cm²</u> |



Bestimme den Umfang und die Fläche jeder Figur. Jede Figur ist in Zentimeter (cm).

Nicht maßstäblich.

Antworten

1. _____

2. _____

3. _____

4. _____

5. _____

6. _____

7. _____

8. _____

9. _____

10. _____

11. _____

12. _____

13. _____

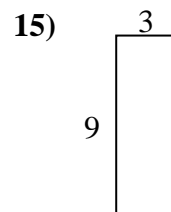
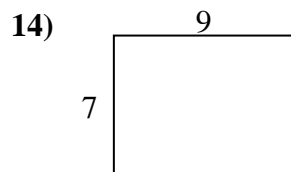
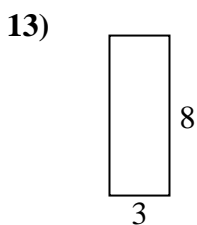
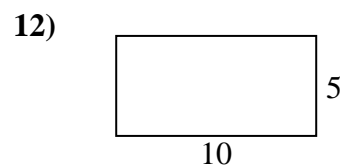
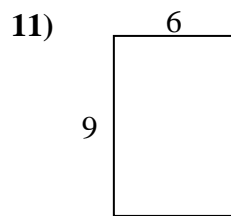
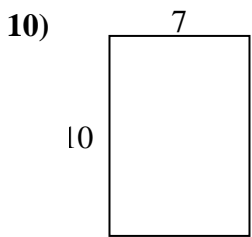
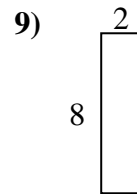
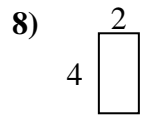
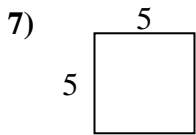
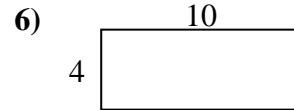
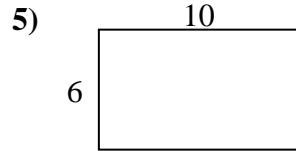
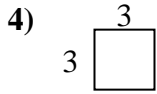
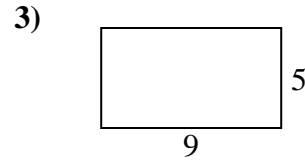
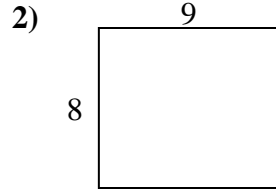
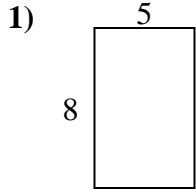
14. _____

15. _____



Bestimme den Umfang und die Fläche jeder Figur. Jede Figur ist in Zentimeter (cm).

Nicht maßstäblich.

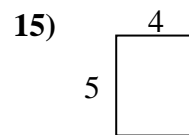
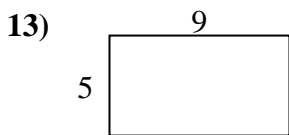
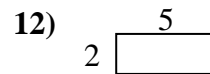
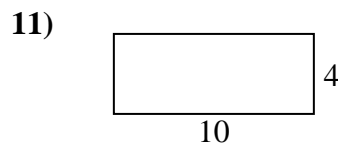
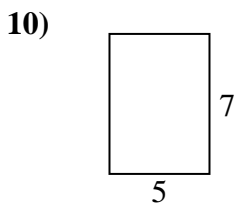
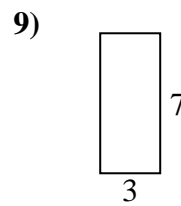
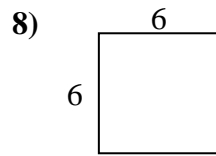
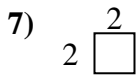
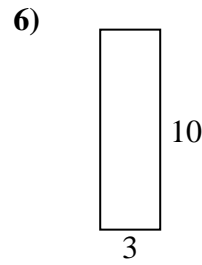
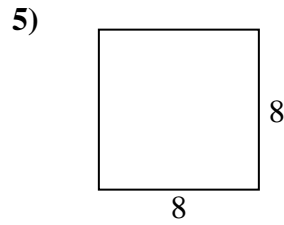
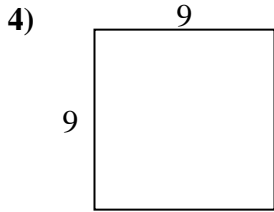
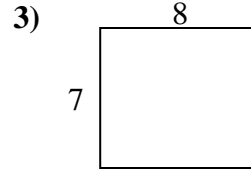
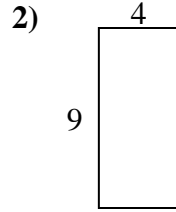
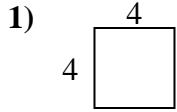
Antworten

- | | | |
|-----|--------------|--------------------------|
| 1. | <u>26 cm</u> | <u>40 cm²</u> |
| 2. | <u>34 cm</u> | <u>72 cm²</u> |
| 3. | <u>28 cm</u> | <u>45 cm²</u> |
| 4. | <u>12 cm</u> | <u>9 cm²</u> |
| 5. | <u>32 cm</u> | <u>60 cm²</u> |
| 6. | <u>28 cm</u> | <u>40 cm²</u> |
| 7. | <u>20 cm</u> | <u>25 cm²</u> |
| 8. | <u>12 cm</u> | <u>8 cm²</u> |
| 9. | <u>20 cm</u> | <u>16 cm²</u> |
| 10. | <u>34 cm</u> | <u>70 cm²</u> |
| 11. | <u>30 cm</u> | <u>54 cm²</u> |
| 12. | <u>30 cm</u> | <u>50 cm²</u> |
| 13. | <u>22 cm</u> | <u>24 cm²</u> |
| 14. | <u>32 cm</u> | <u>63 cm²</u> |
| 15. | <u>24 cm</u> | <u>27 cm²</u> |



Bestimme den Umfang und die Fläche jeder Figur. Jede Figur ist in Zentimeter (cm).

Nicht maßstäblich.

Antworten

1. _____

2. _____

3. _____

4. _____

5. _____

6. _____

7. _____

8. _____

9. _____

10. _____

11. _____

12. _____

13. _____

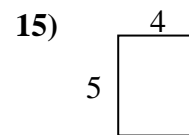
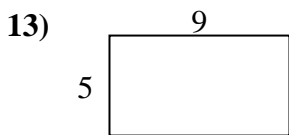
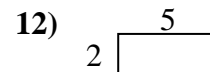
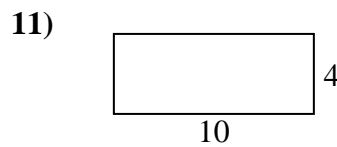
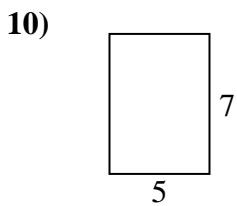
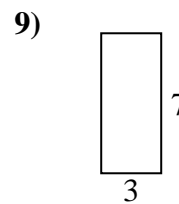
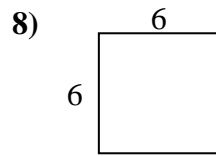
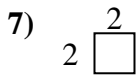
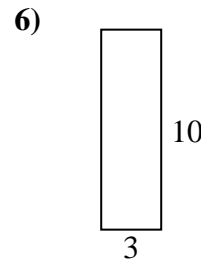
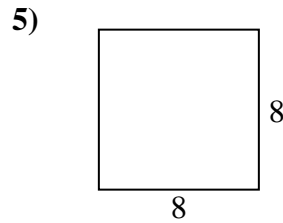
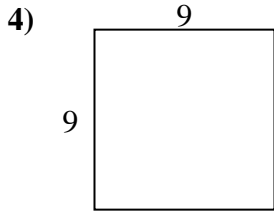
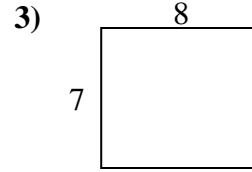
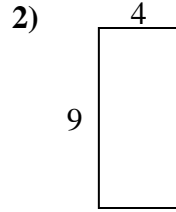
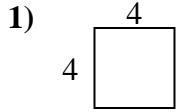
14. _____

15. _____



Bestimme den Umfang und die Fläche jeder Figur. Jede Figur ist in Zentimeter (cm).

Nicht maßstäblich.

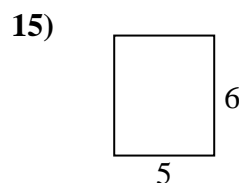
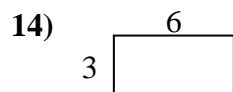
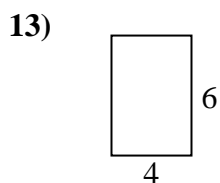
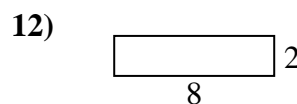
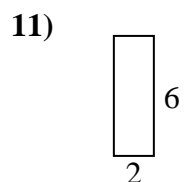
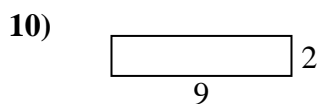
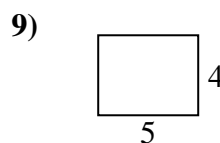
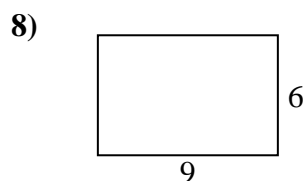
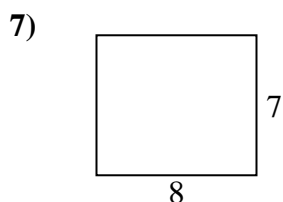
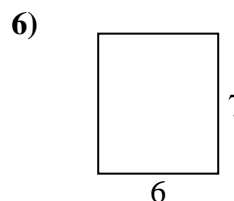
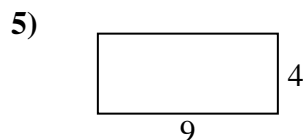
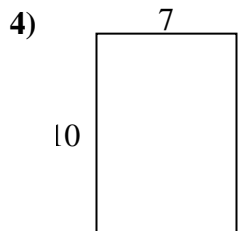
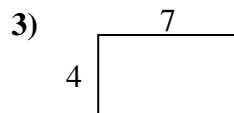
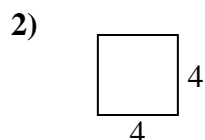
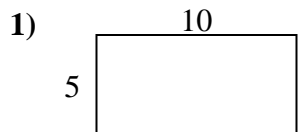
Antworten

- | | | |
|-----|--------------|--------------------------|
| 1. | <u>16 cm</u> | <u>16 cm²</u> |
| 2. | <u>26 cm</u> | <u>36 cm²</u> |
| 3. | <u>30 cm</u> | <u>56 cm²</u> |
| 4. | <u>36 cm</u> | <u>81 cm²</u> |
| 5. | <u>32 cm</u> | <u>64 cm²</u> |
| 6. | <u>26 cm</u> | <u>30 cm²</u> |
| 7. | <u>8 cm</u> | <u>4 cm²</u> |
| 8. | <u>24 cm</u> | <u>36 cm²</u> |
| 9. | <u>20 cm</u> | <u>21 cm²</u> |
| 10. | <u>24 cm</u> | <u>35 cm²</u> |
| 11. | <u>28 cm</u> | <u>40 cm²</u> |
| 12. | <u>14 cm</u> | <u>10 cm²</u> |
| 13. | <u>28 cm</u> | <u>45 cm²</u> |
| 14. | <u>18 cm</u> | <u>18 cm²</u> |
| 15. | <u>18 cm</u> | <u>20 cm²</u> |



Bestimme den Umfang und die Fläche jeder Figur. Jede Figur ist in Zentimeter (cm).

Nicht maßstäblich.

Antworten

1. _____

2. _____

3. _____

4. _____

5. _____

6. _____

7. _____

8. _____

9. _____

10. _____

11. _____

12. _____

13. _____

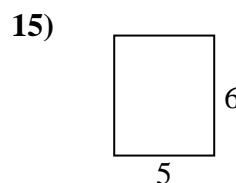
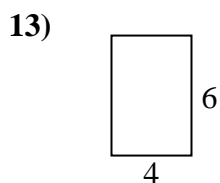
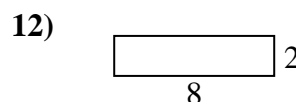
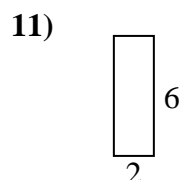
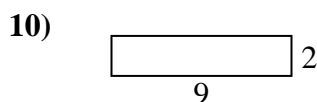
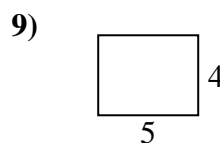
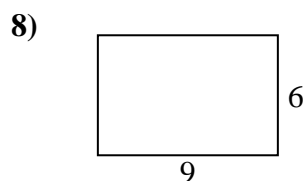
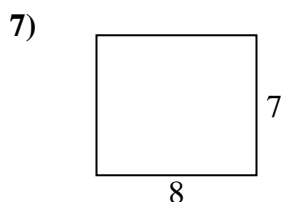
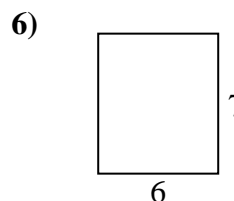
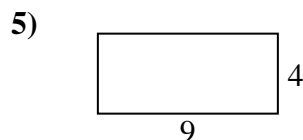
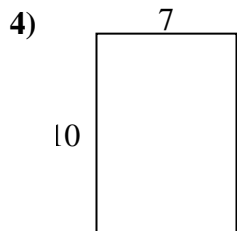
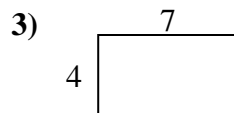
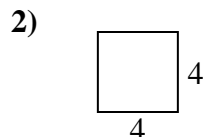
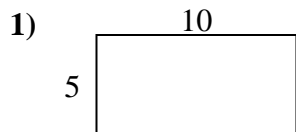
14. _____

15. _____



Bestimme den Umfang und die Fläche jeder Figur. Jede Figur ist in Zentimeter (cm).

Nicht maßstäblich.

Antworten

1. 30 cm 50 cm²

2. 16 cm 16 cm²

3. 22 cm 28 cm²

4. 34 cm 70 cm²

5. 26 cm 36 cm²

6. 26 cm 42 cm²

7. 30 cm 56 cm²

8. 30 cm 54 cm²

9. 18 cm 20 cm²

10. 22 cm 18 cm²

11. 16 cm 12 cm²

12. 20 cm 16 cm²

13. 20 cm 24 cm²

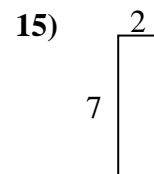
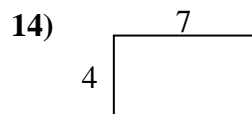
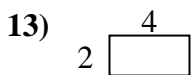
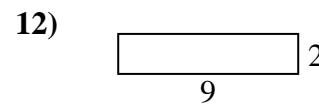
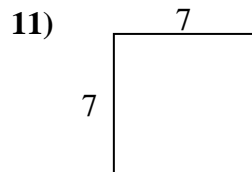
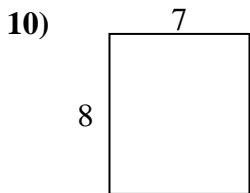
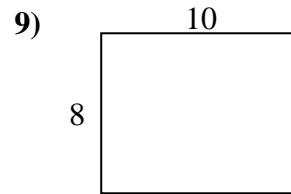
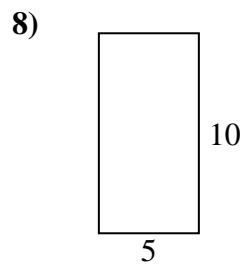
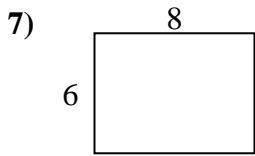
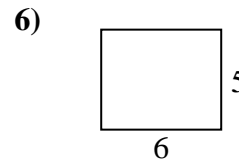
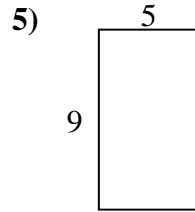
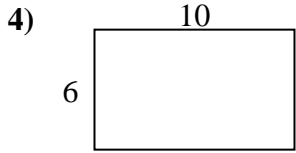
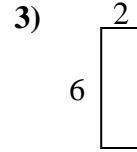
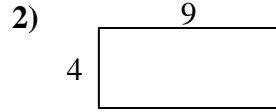
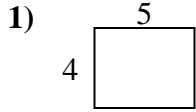
14. 18 cm 18 cm²

15. 22 cm 30 cm²



Bestimme den Umfang und die Fläche jeder Figur. Jede Figur ist in Zentimeter (cm).

Nicht maßstäblich.

Antworten

1. _____

2. _____

3. _____

4. _____

5. _____

6. _____

7. _____

8. _____

9. _____

10. _____

11. _____

12. _____

13. _____

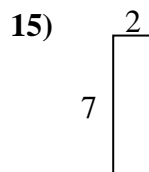
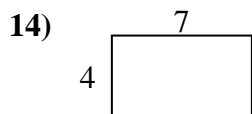
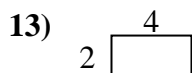
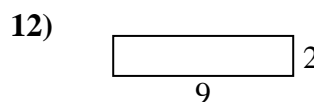
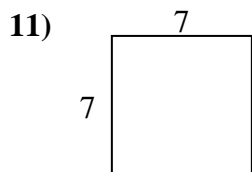
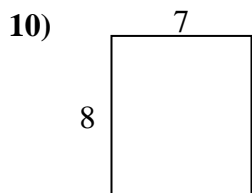
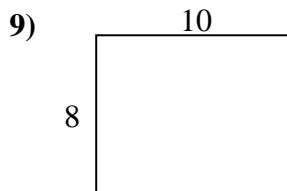
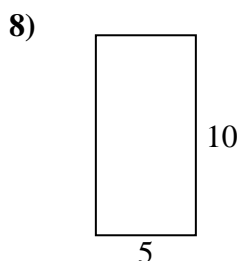
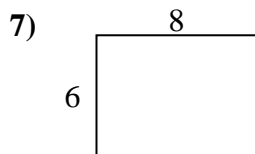
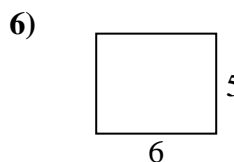
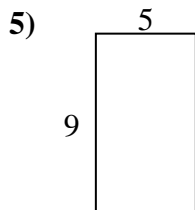
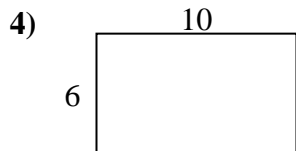
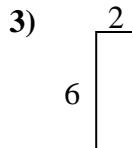
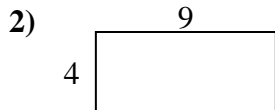
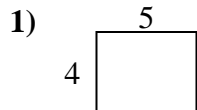
14. _____

15. _____



Bestimme den Umfang und die Fläche jeder Figur. Jede Figur ist in Zentimeter (cm).

Nicht maßstäblich.

Antworten

1. 18 cm 20 cm²

2. 26 cm 36 cm²

3. 16 cm 12 cm²

4. 32 cm 60 cm²

5. 28 cm 45 cm²

6. 22 cm 30 cm²

7. 28 cm 48 cm²

8. 30 cm 50 cm²

9. 36 cm 80 cm²

10. 30 cm 56 cm²

11. 28 cm 49 cm²

12. 22 cm 18 cm²

13. 12 cm 8 cm²

14. 22 cm 28 cm²

15. 18 cm 14 cm²