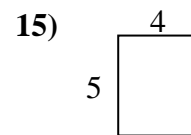
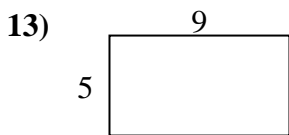
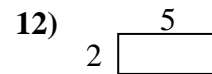
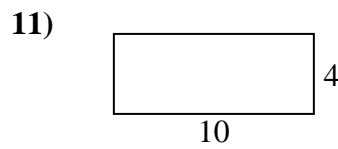
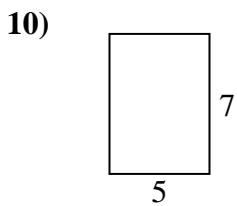
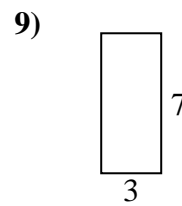
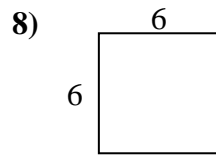
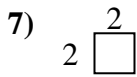
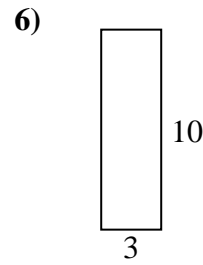
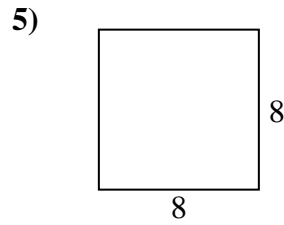
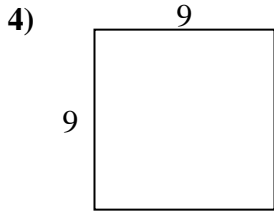
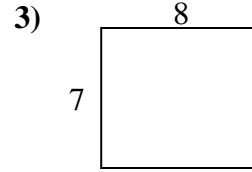
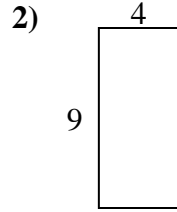
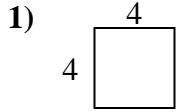




Bestimme den Umfang und die Fläche jeder Figur. Jede Figur ist in Zentimeter (cm).

Nicht maßstäblich.

Antworten

1. _____

2. _____

3. _____

4. _____

5. _____

6. _____

7. _____

8. _____

9. _____

10. _____

11. _____

12. _____

13. _____

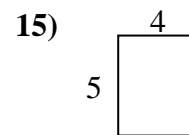
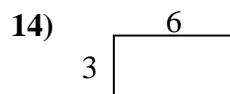
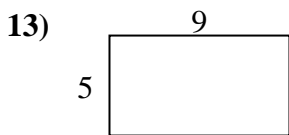
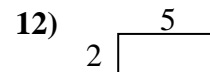
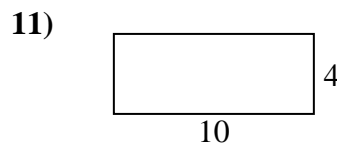
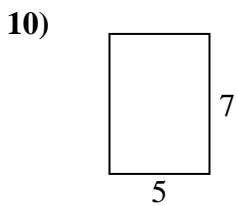
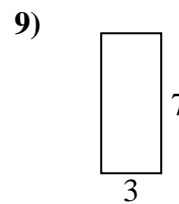
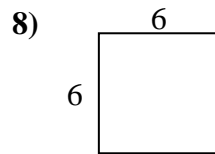
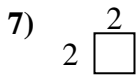
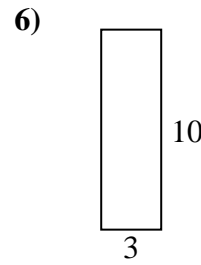
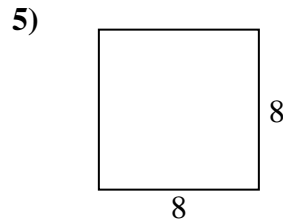
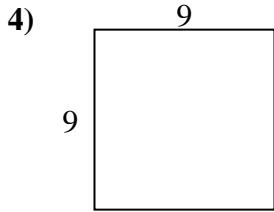
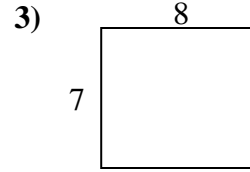
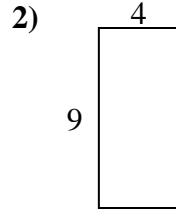
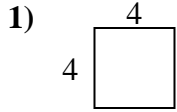
14. _____

15. _____



Bestimme den Umfang und die Fläche jeder Figur. Jede Figur ist in Zentimeter (cm).

Nicht maßstäblich.

Antworten

- | | | |
|-----|--------------|--------------------------|
| 1. | <u>16 cm</u> | <u>16 cm²</u> |
| 2. | <u>26 cm</u> | <u>36 cm²</u> |
| 3. | <u>30 cm</u> | <u>56 cm²</u> |
| 4. | <u>36 cm</u> | <u>81 cm²</u> |
| 5. | <u>32 cm</u> | <u>64 cm²</u> |
| 6. | <u>26 cm</u> | <u>30 cm²</u> |
| 7. | <u>8 cm</u> | <u>4 cm²</u> |
| 8. | <u>24 cm</u> | <u>36 cm²</u> |
| 9. | <u>20 cm</u> | <u>21 cm²</u> |
| 10. | <u>24 cm</u> | <u>35 cm²</u> |
| 11. | <u>28 cm</u> | <u>40 cm²</u> |
| 12. | <u>14 cm</u> | <u>10 cm²</u> |
| 13. | <u>28 cm</u> | <u>45 cm²</u> |
| 14. | <u>18 cm</u> | <u>18 cm²</u> |
| 15. | <u>18 cm</u> | <u>20 cm²</u> |