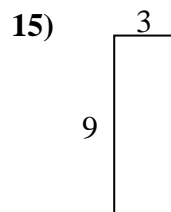
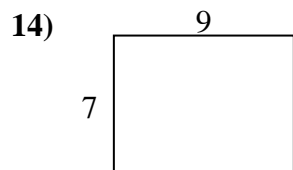
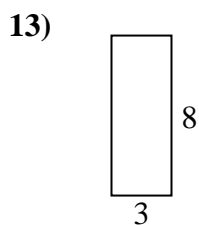
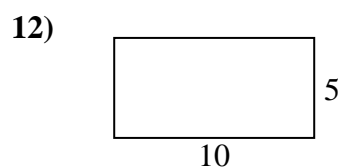
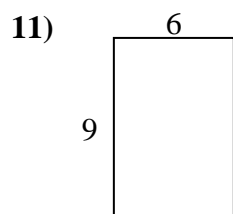
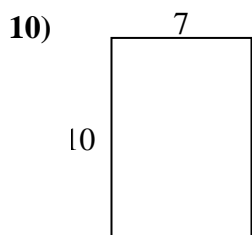
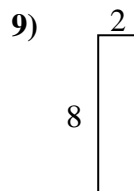
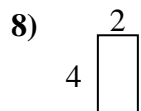
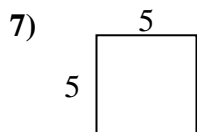
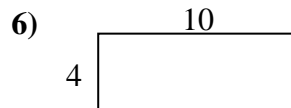
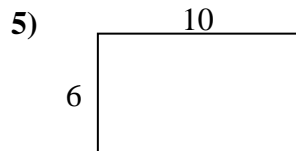
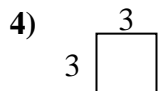
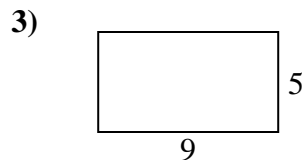
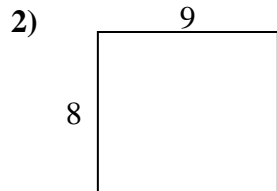
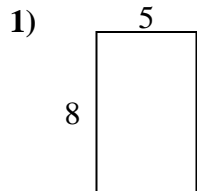




Bestimme den Umfang und die Fläche jeder Figur. Jede Figur ist in Zentimeter (cm).

Nicht maßstäblich.

Antworten

1. \_\_\_\_\_

2. \_\_\_\_\_

3. \_\_\_\_\_

4. \_\_\_\_\_

5. \_\_\_\_\_

6. \_\_\_\_\_

7. \_\_\_\_\_

8. \_\_\_\_\_

9. \_\_\_\_\_

10. \_\_\_\_\_

11. \_\_\_\_\_

12. \_\_\_\_\_

13. \_\_\_\_\_

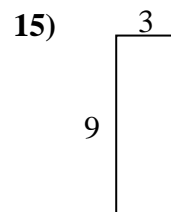
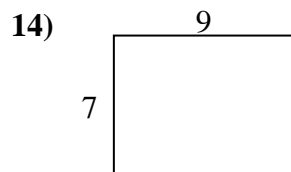
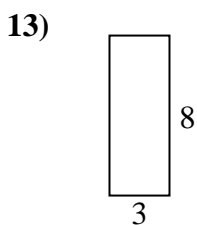
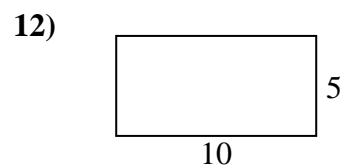
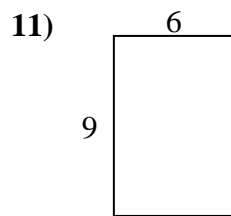
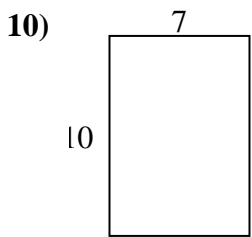
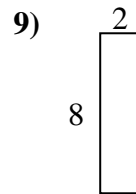
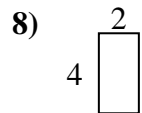
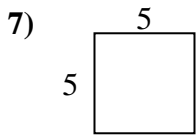
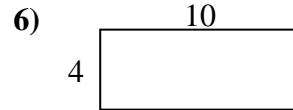
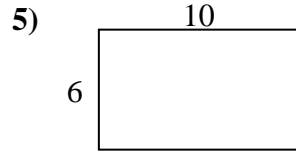
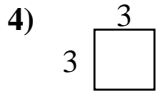
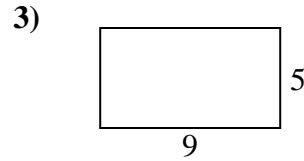
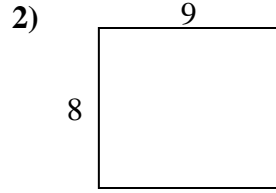
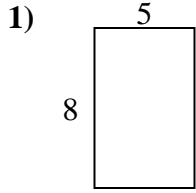
14. \_\_\_\_\_

15. \_\_\_\_\_



Bestimme den Umfang und die Fläche jeder Figur. Jede Figur ist in Zentimeter (cm).

Nicht maßstäblich.

Antworten

1. 26 cm 40 cm<sup>2</sup>

2. 34 cm 72 cm<sup>2</sup>

3. 28 cm 45 cm<sup>2</sup>

4. 12 cm 9 cm<sup>2</sup>

5. 32 cm 60 cm<sup>2</sup>

6. 28 cm 40 cm<sup>2</sup>

7. 20 cm 25 cm<sup>2</sup>

8. 12 cm 8 cm<sup>2</sup>

9. 20 cm 16 cm<sup>2</sup>

10. 34 cm 70 cm<sup>2</sup>

11. 30 cm 54 cm<sup>2</sup>

12. 30 cm 50 cm<sup>2</sup>

13. 22 cm 24 cm<sup>2</sup>

14. 32 cm 63 cm<sup>2</sup>

15. 24 cm 27 cm<sup>2</sup>