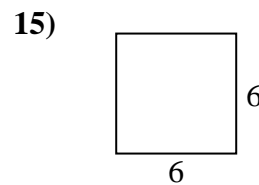
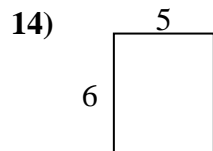
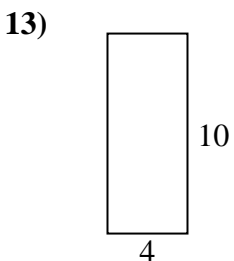
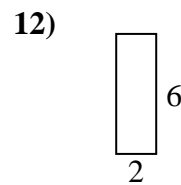
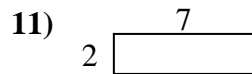
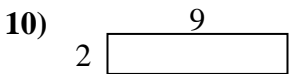
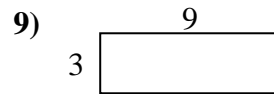
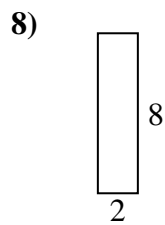
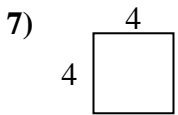
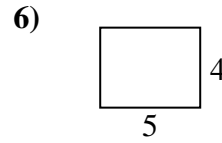

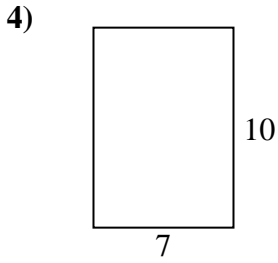
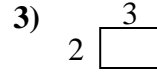
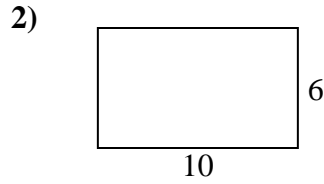
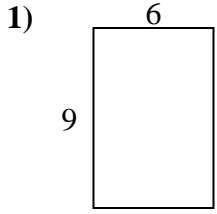




Bestimme den Umfang und die Fläche jeder Figur. Jede Figur ist in Zentimeter (cm).

Nicht maßstäblich.



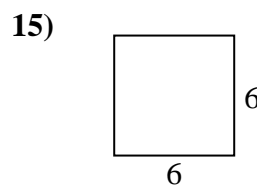
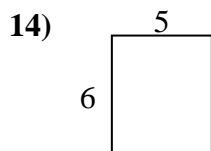
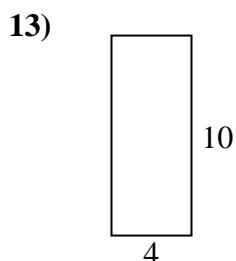
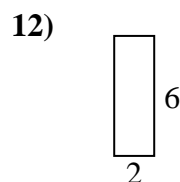
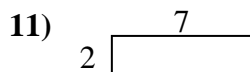
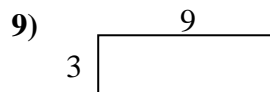
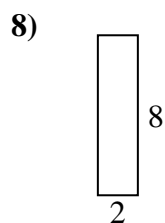
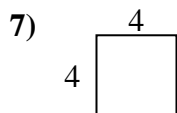
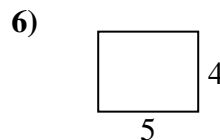
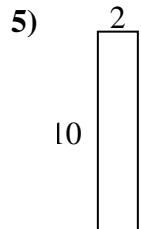
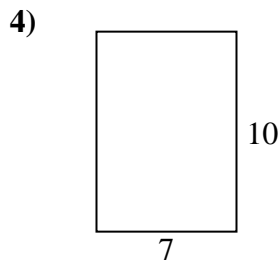
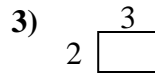
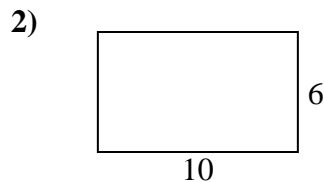
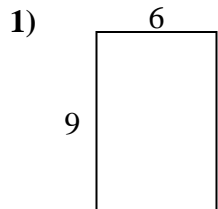
Antworten

- 1. \_\_\_\_\_
- 2. \_\_\_\_\_
- 3. \_\_\_\_\_
- 4. \_\_\_\_\_
- 5. \_\_\_\_\_
- 6. \_\_\_\_\_
- 7. \_\_\_\_\_
- 8. \_\_\_\_\_
- 9. \_\_\_\_\_
- 10. \_\_\_\_\_
- 11. \_\_\_\_\_
- 12. \_\_\_\_\_
- 13. \_\_\_\_\_
- 14. \_\_\_\_\_
- 15. \_\_\_\_\_



Bestimme den Umfang und die Fläche jeder Figur. Jede Figur ist in Zentimeter (cm).

Nicht maßstäblich.

Antworten

1. 30 cm 54 cm<sup>2</sup>

2. 32 cm 60 cm<sup>2</sup>

3. 10 cm 6 cm<sup>2</sup>

4. 34 cm 70 cm<sup>2</sup>

5. 24 cm 20 cm<sup>2</sup>

6. 18 cm 20 cm<sup>2</sup>

7. 16 cm 16 cm<sup>2</sup>

8. 20 cm 16 cm<sup>2</sup>

9. 24 cm 27 cm<sup>2</sup>

10. 22 cm 18 cm<sup>2</sup>

11. 18 cm 14 cm<sup>2</sup>

12. 16 cm 12 cm<sup>2</sup>

13. 28 cm 40 cm<sup>2</sup>

14. 22 cm 30 cm<sup>2</sup>

15. 24 cm 36 cm<sup>2</sup>