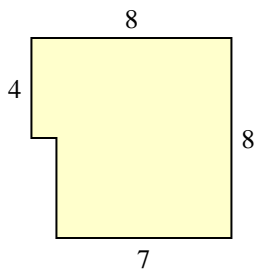


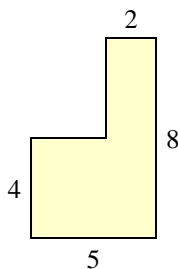


Bestimme die Gesamtfläche von jeder Form. Maßeinheit ist in mm. Abbildung ist nicht maßstäblich.

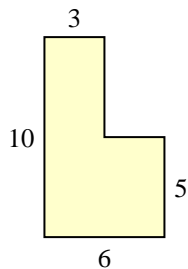
1)



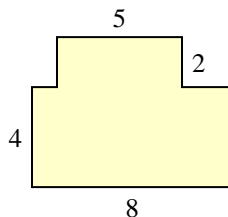
2)



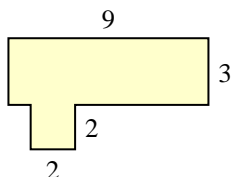
3)



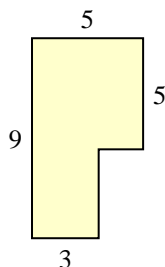
4)



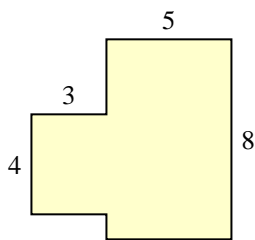
5)



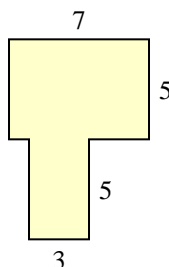
6)



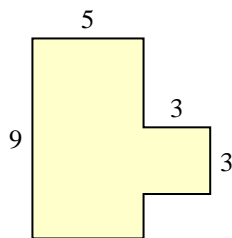
7)



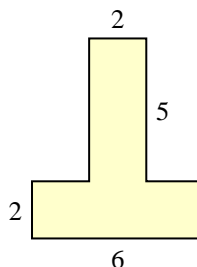
8)



9)



10)



Antworten

1. \_\_\_\_\_

2. \_\_\_\_\_

3. \_\_\_\_\_

4. \_\_\_\_\_

5. \_\_\_\_\_

6. \_\_\_\_\_

7. \_\_\_\_\_

8. \_\_\_\_\_

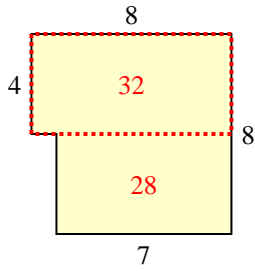
9. \_\_\_\_\_

10. \_\_\_\_\_

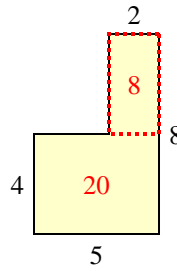


Bestimme die Gesamtfläche von jeder Form. Maßeinheit ist in mm. Abbildung ist nicht maßstäblich.

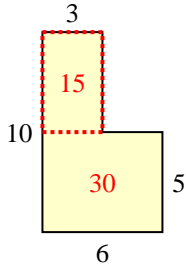
1)



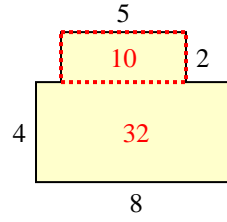
2)



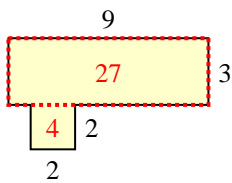
3)



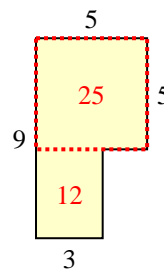
4)



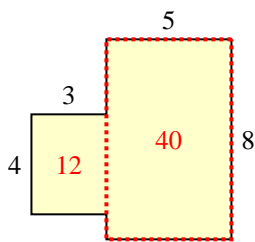
5)



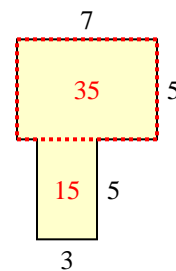
6)



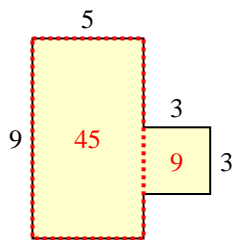
7)



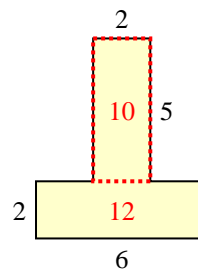
8)



9)



10)

**Antworten**1. 60 mm<sup>2</sup>2. 28 mm<sup>2</sup>3. 45 mm<sup>2</sup>4. 42 mm<sup>2</sup>5. 31 mm<sup>2</sup>6. 37 mm<sup>2</sup>7. 52 mm<sup>2</sup>8. 50 mm<sup>2</sup>9. 54 mm<sup>2</sup>10. 22 mm<sup>2</sup>