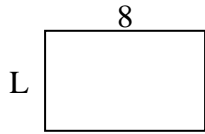




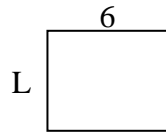
Berechne den Wert von 'L'.

Antworten

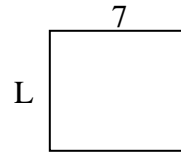
1) Umfang = 26



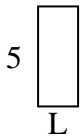
2) Umfang = 22




3) Umfang = 26



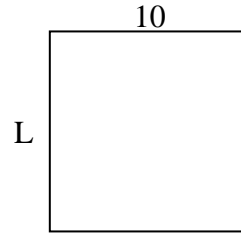
4) Umfang = 14



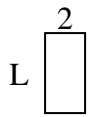
5) Umfang = 32



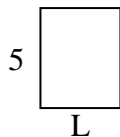
6) Umfang = 40



7) Umfang = 12



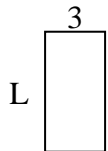
8) Umfang = 18



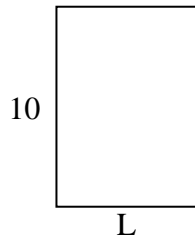
9) Umfang = 10



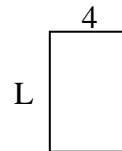
10) Umfang = 18



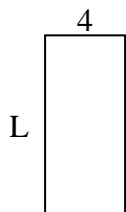
11) Umfang = 34



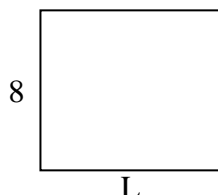
12) Umfang = 20



13) Umfang = 26



14) Umfang = 34



15) Umfang = 16

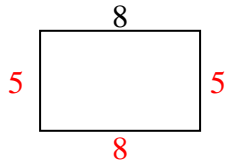


1. _____
2. _____
3. _____
4. _____
5. _____
6. _____
7. _____
8. _____
9. _____
10. _____
11. _____
12. _____
13. _____
14. _____
15. _____

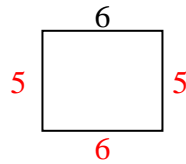


Berechne den Wert von 'L'.

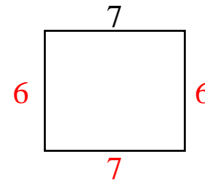
1) Umfang = 26



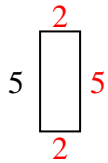
2) Umfang = 22



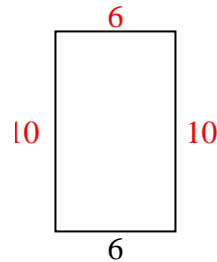
3) Umfang = 26



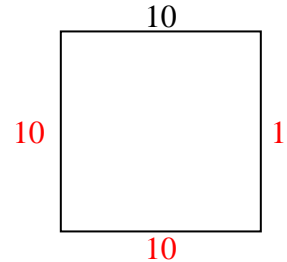
4) Umfang = 14



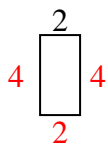
5) Umfang = 32



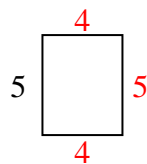
6) Umfang = 40



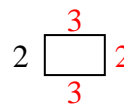
7) Umfang = 12



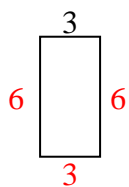
8) Umfang = 18



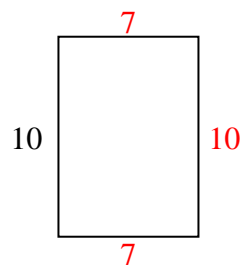
9) Umfang = 10



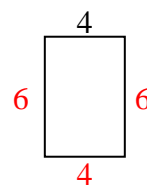
10) Umfang = 18



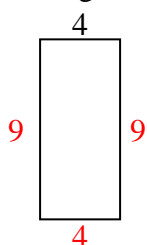
11) Umfang = 34



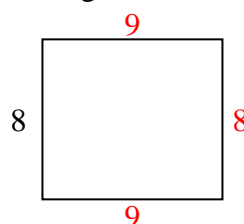
12) Umfang = 20



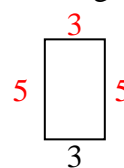
13) Umfang = 26



14) Umfang = 34



15) Umfang = 16

**Antworten**1. 5 cm2. 5 cm3. 6 cm4. 2 cm5. 10 cm6. 10 cm7. 4 cm8. 4 cm9. 3 cm10. 6 cm11. 7 cm12. 6 cm13. 9 cm14. 9 cm15. 5 cm