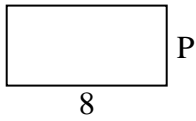


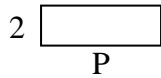


Berechne den Wert von "P".

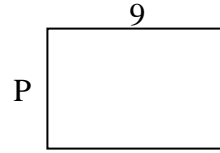
1) Umfang = 24



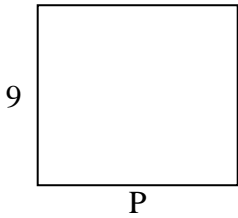
2) Umfang = 16



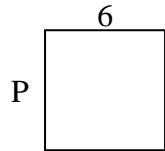
3) Umfang = 30



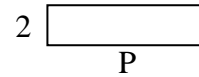
4) Umfang = 38



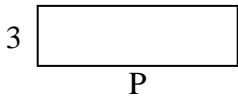
5) Umfang = 24




6) Umfang = 20



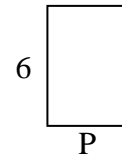
7) Umfang = 26



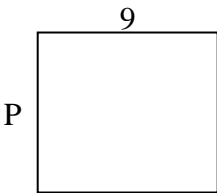
8) Umfang = 30



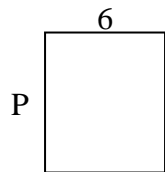
9) Umfang = 20



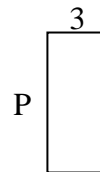
10) Umfang = 34



11) Umfang = 26



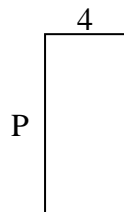
12) Umfang = 20



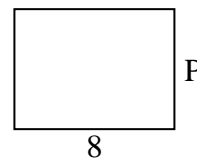
13) Umfang = 10



14) Umfang = 26



15) Umfang = 28



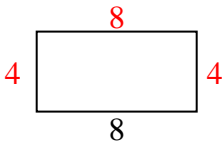
Antworten

1. _____
2. _____
3. _____
4. _____
5. _____
6. _____
7. _____
8. _____
9. _____
10. _____
11. _____
12. _____
13. _____
14. _____
15. _____

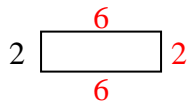


Berechne den Wert von "P".

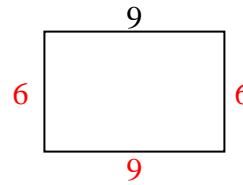
1) Umfang = 24



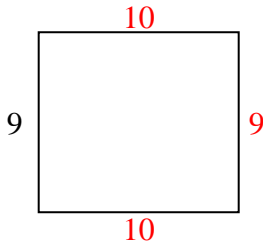
2) Umfang = 16



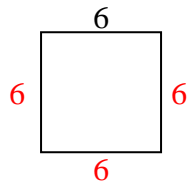
3) Umfang = 30



4) Umfang = 38



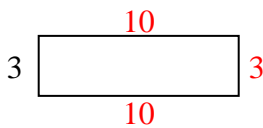
5) Umfang = 24



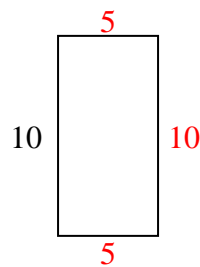
6) Umfang = 20



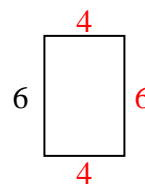
7) Umfang = 26



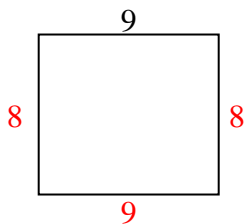
8) Umfang = 30



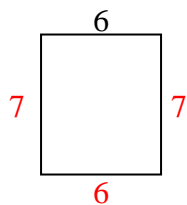
9) Umfang = 20



10) Umfang = 34



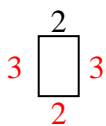
11) Umfang = 26



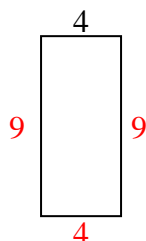
12) Umfang = 20



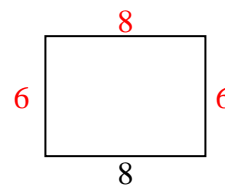
13) Umfang = 10



14) Umfang = 26



15) Umfang = 28

**Antworten**1. 4 cm2. 6 cm3. 6 cm4. 10 cm5. 6 cm6. 8 cm7. 10 cm8. 5 cm9. 4 cm10. 8 cm11. 7 cm12. 7 cm13. 3 cm14. 9 cm15. 6 cm