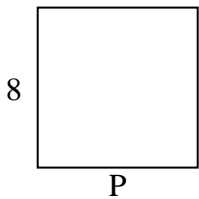


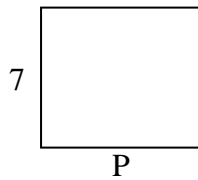


Berechne den Wert von "P".

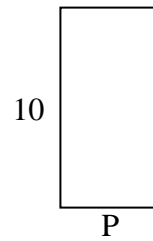
1) Umfang = 32



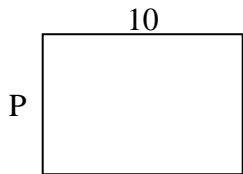
2) Umfang = 30



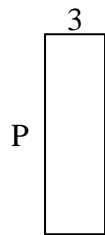
3) Umfang = 30



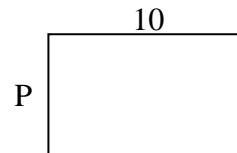
4) Umfang = 34



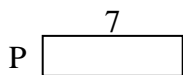
5) Umfang = 26



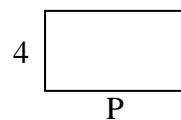
6) Umfang = 32



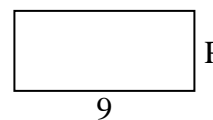
7) Umfang = 18



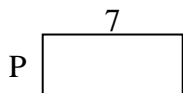
8) Umfang = 22




9) Umfang = 26



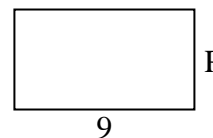
10) Umfang = 20



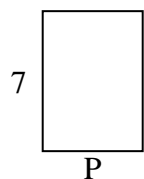
11) Umfang = 28



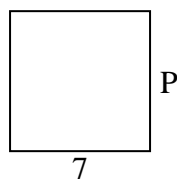
12) Umfang = 28



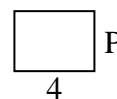
13) Umfang = 24



14) Umfang = 28



15) Umfang = 14



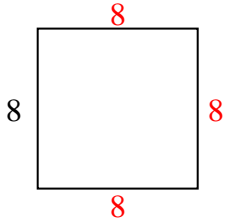
Antworten

1. _____
2. _____
3. _____
4. _____
5. _____
6. _____
7. _____
8. _____
9. _____
10. _____
11. _____
12. _____
13. _____
14. _____
15. _____

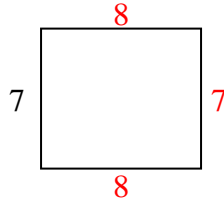


Berechne den Wert von "P".

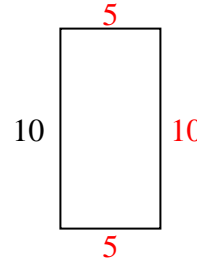
1) Umfang = 32



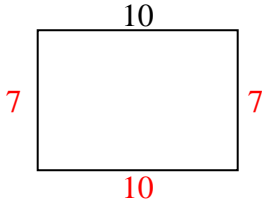
2) Umfang = 30



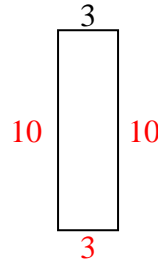
3) Umfang = 30



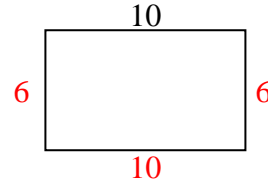
4) Umfang = 34



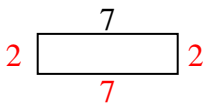
5) Umfang = 26



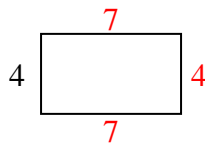
6) Umfang = 32



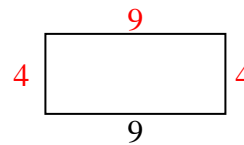
7) Umfang = 18



8) Umfang = 22



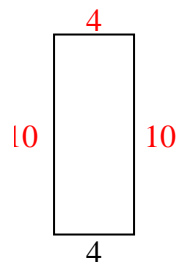
9) Umfang = 26



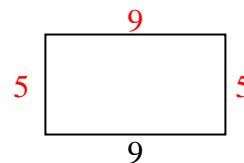
10) Umfang = 20



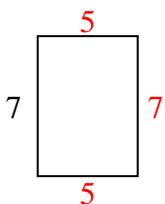
11) Umfang = 28



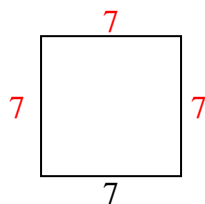
12) Umfang = 28



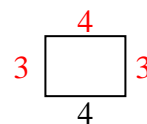
13) Umfang = 24



14) Umfang = 28



15) Umfang = 14



Antworten

1. 8 cm

2. 8 cm

3. 5 cm

4. 7 cm

5. 10 cm

6. 6 cm

7. 2 cm

8. 7 cm

9. 4 cm

10. 3 cm

11. 10 cm

12. 5 cm

13. 5 cm

14. 7 cm

15. 3 cm