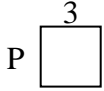




Berechne den Wert von "P".

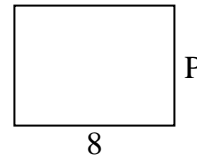
1) Umfang = 12



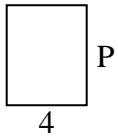
2) Umfang = 24



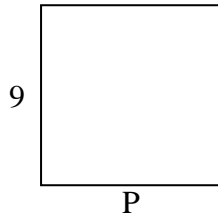
3) Umfang = 28



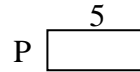
4) Umfang = 18




5) Umfang = 36



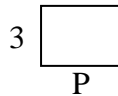
6) Umfang = 14



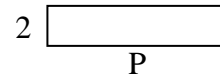
7) Umfang = 22



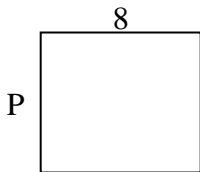
8) Umfang = 14



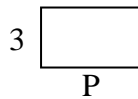
9) Umfang = 22



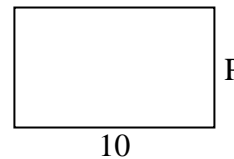
10) Umfang = 30



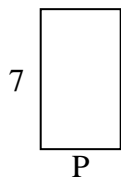
11) Umfang = 16



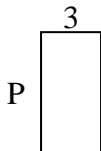
12) Umfang = 32



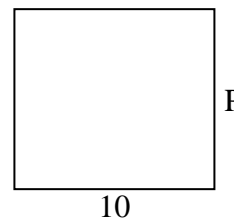
13) Umfang = 22



14) Umfang = 18



15) Umfang = 38



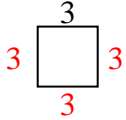
Antworten

1. _____
2. _____
3. _____
4. _____
5. _____
6. _____
7. _____
8. _____
9. _____
10. _____
11. _____
12. _____
13. _____
14. _____
15. _____

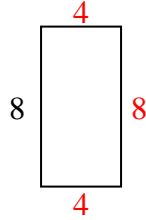


Berechne den Wert von "P".

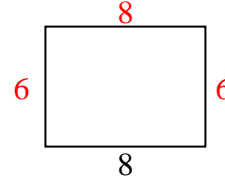
1) Umfang = 12



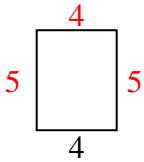
2) Umfang = 24



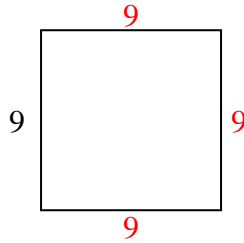
3) Umfang = 28



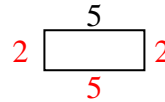
4) Umfang = 18



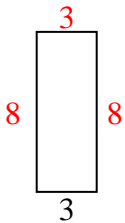
5) Umfang = 36



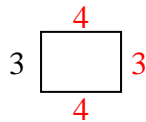
6) Umfang = 14



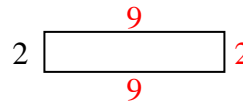
7) Umfang = 22



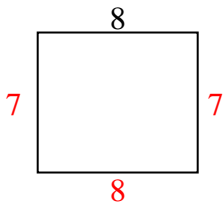
8) Umfang = 14



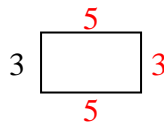
9) Umfang = 22



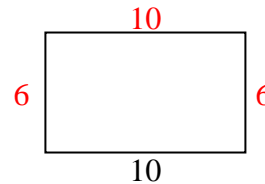
10) Umfang = 30



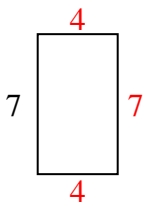
11) Umfang = 16



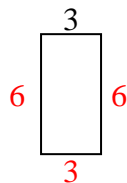
12) Umfang = 32



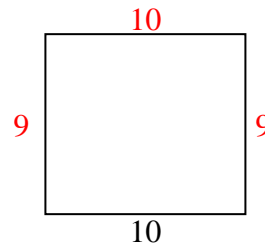
13) Umfang = 22



14) Umfang = 18



15) Umfang = 38

Antworten1. 3 cm2. 4 cm3. 6 cm4. 5 cm5. 9 cm6. 2 cm7. 8 cm8. 4 cm9. 9 cm10. 7 cm11. 5 cm12. 6 cm13. 4 cm14. 6 cm15. 9 cm